

Name: _____

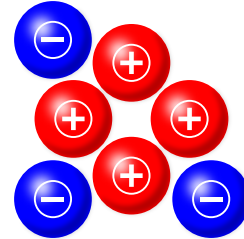
Electrical Charges

If an object has more positive charges (⊕) than negative charges (⊖), its electrical charge is positive (⊕).

If an object has more negative charges (⊖) than positive charges (⊕), its electrical charge is negative (⊖).

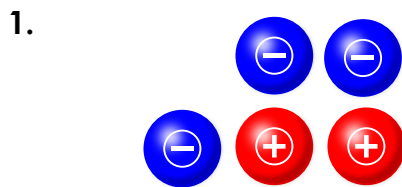
If an object has the same number of positive (⊕) and negative (⊖) charges, it has no electrical charge or is neutral.

Example:




Electrical charge: **positive charge**

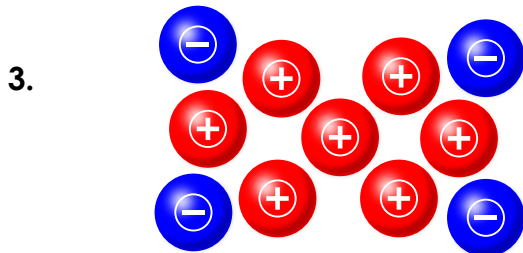
Count the positive and negative charges in each picture. Write positive charge, negative charge, or no charge on each line.



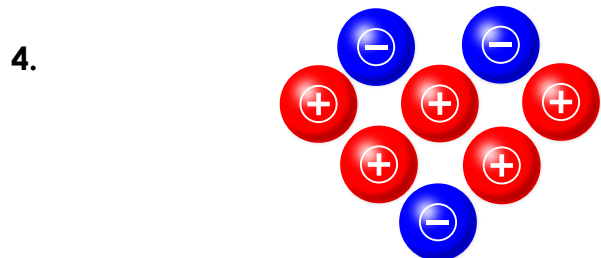
electrical charge: _____



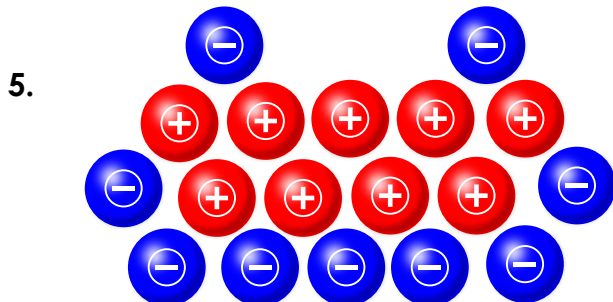
electrical charge: _____



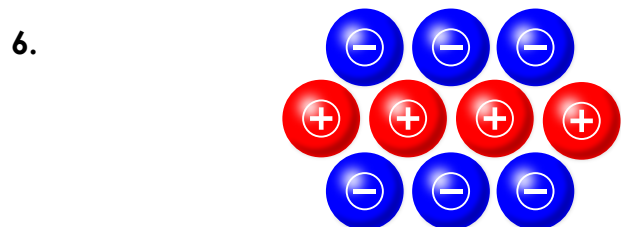
electrical charge: _____



electrical charge: _____



electrical charge: _____



electrical charge: _____

ANSWER KEY

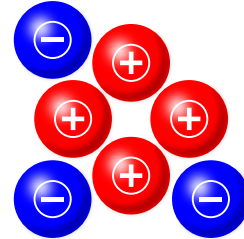
Electrical Charges

If an object has more positive charges (⊕) than negative charges (⊖), its electrical charge is positive (⊕).

If an object has more negative charges (⊖) than positive charges (⊕), its electrical charge is negative (⊖).

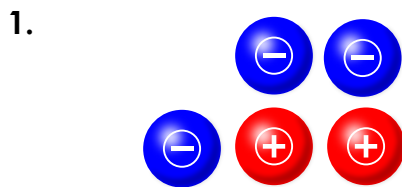
If an object has the same number of positive (⊕) and negative (⊖) charges, it has no electrical charge or is neutral.

Example:




Electrical charge: positive charge

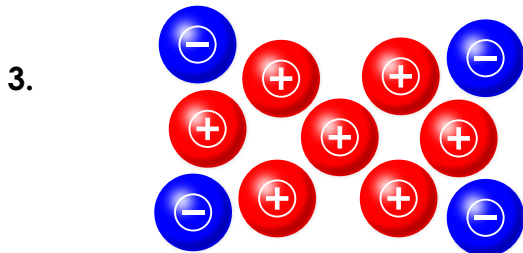
Count the positive and negative charges in each picture. Write positive charge, negative charge, or no charge on each line.



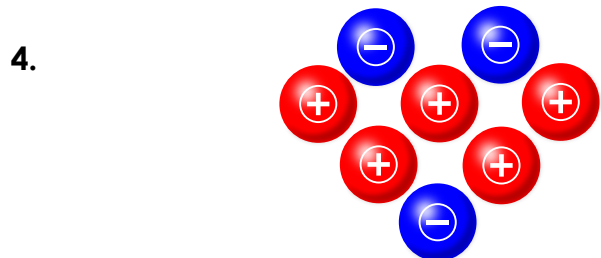
electrical charge: negative charge



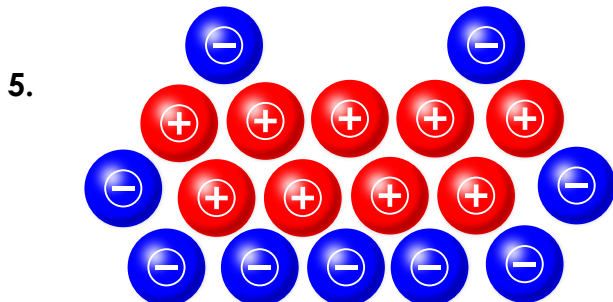
electrical charge: no charge



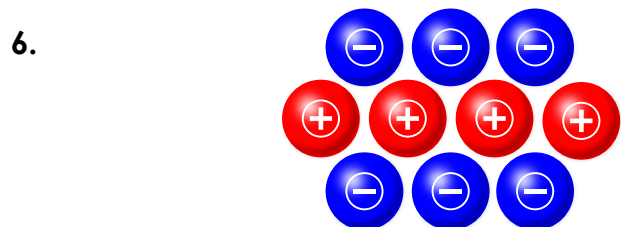
electrical charge: positive charge



electrical charge: positive charge



electrical charge: no charge



electrical charge: negative charge