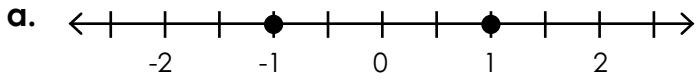


Name: _____

Absolute Value: Number Lines

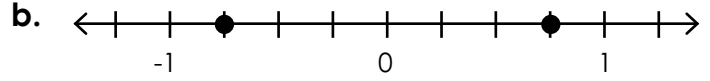
Circle the correct description of the number line.



$|1|$ and its opposite

$|-1|$ and $|1|$

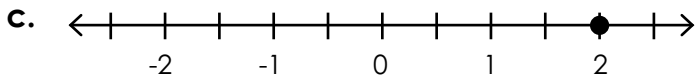
1 and $|-1|$



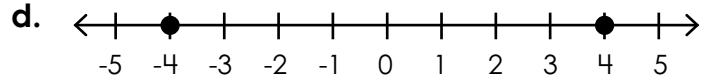
$|0.75|$ and its opposite

$|-0.75|$ and $|0.75|$

0.75 and $|-0.75|$



$|-2|$ and its opposite



$|-4|$ and its opposite



Preview

Please log in to download
the printable version of this worksheet.

Circle the number farther to the right of the bold number on a number line.

- | | | |
|---|---|---|
| <p>k. 7</p> <p>-9 -8 $\frac{7}{1}$</p> | <p>l. $-\frac{1}{2}$</p> <p>$\frac{1}{2}$ -1 -0.75</p> | <p>m. -26</p> <p>-29 1 -27</p> |
| <p>n. 11</p> <p>-21 3 -12</p> | <p>o. 30</p> <p>-25 -45 35</p> | <p>p. -42</p> <p>0 24 -51</p> |

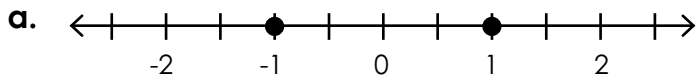
Circle the number farther to the left of the bold number on a number line.

- | | | |
|---|---|--|
| <p>q. -8</p> <p>-2 -15 8</p> | <p>r. $-\frac{1}{3}$</p> <p>$\frac{2}{3}$ $\frac{1}{6}$ $-\frac{2}{3}$</p> | <p>s. -16</p> <p>-17 0 18</p> |
| <p>t. 0.75</p> <p>-0.8 $\frac{1}{4}$ 1</p> | <p>u. 5</p> <p>-7 5 -3</p> | <p>v. -9</p> <p>-11 12 -10</p> |

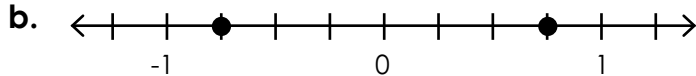
ANSWER KEY

Absolute Value: Number Lines

Circle the correct description of the number line.



|1| and its opposite



|0.75| and its opposite



- | | | | | | | | | | | | |
|----|-------------|-----------------------------------|---|----|---------------|----------------|----------------------------------|----|------------|------------|------------|
| q. | -2 | -8 | 8 | r. | $\frac{2}{3}$ | $-\frac{1}{6}$ | $-\frac{2}{3}$ | s. | -16 | 0 | 18 |
| t. | 0.75 | $\frac{1}{4}$ | 1 | u. | 5 | -3 | -3 | v. | -9 | -11 | -10 |
| | -0.8 | | | | -7 | 5 | | | | 12 | |