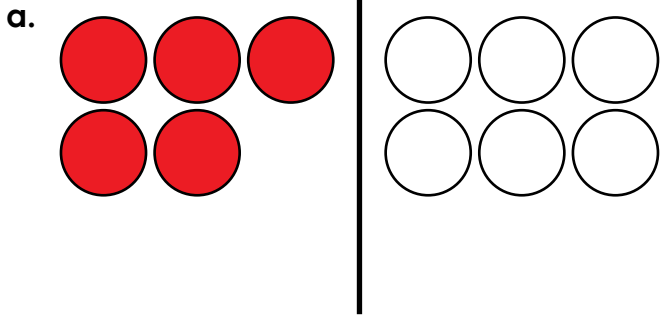
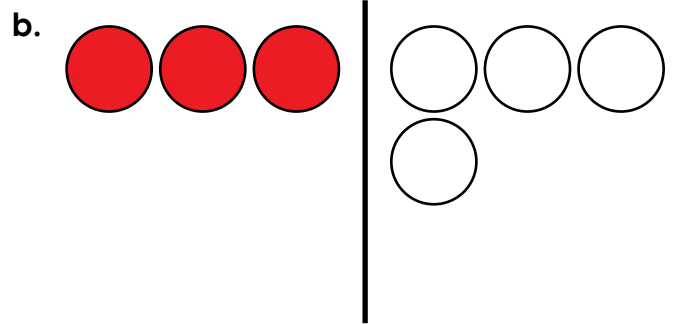


Name: _____

Addition



$$\underline{5} + \underline{6} = \underline{\quad}$$



$$\underline{\quad} + \underline{\quad} = \underline{\quad}$$

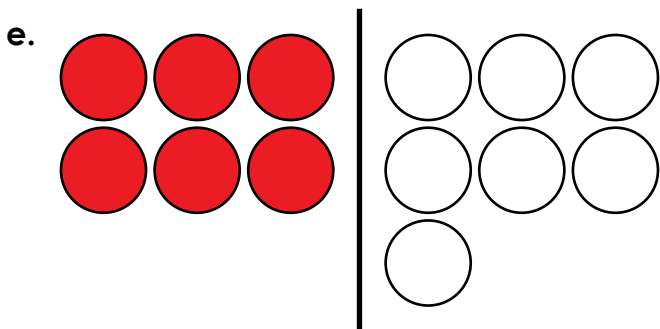


Preview

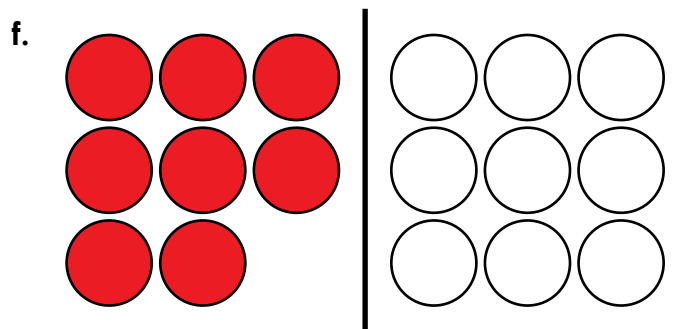
Please log in to download the printable version of this worksheet.

$$\underline{\quad} + \underline{\quad} = \underline{\quad}$$

$$\underline{\quad} + \underline{\quad} = \underline{\quad}$$

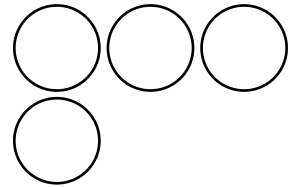

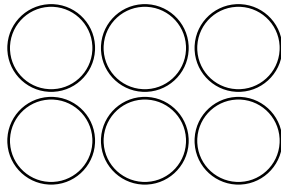
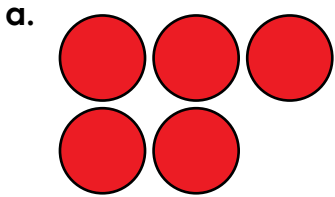


$$\underline{\quad} + \underline{\quad} = \underline{\quad}$$



$$\underline{\quad} + \underline{\quad} = \underline{\quad}$$

Addition



c.

Preview

Please log in to download
the printable version of this worksheet.

e.



$$\underline{6} + \underline{7} = \underline{13}$$

$$\underline{8} + \underline{9} = \underline{17}$$