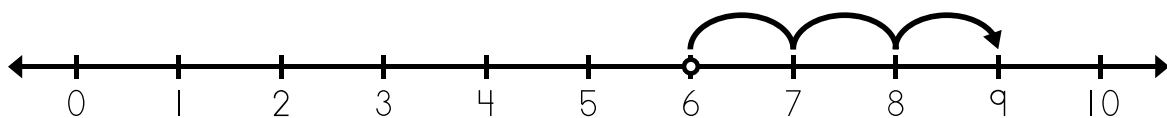


Name: _____

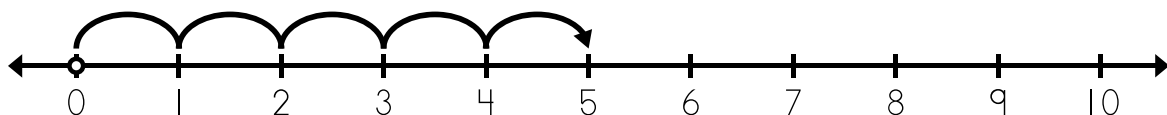
Number Line Addition

a.



$$\underline{6} + \underline{3} = \underline{9}$$

b.



$$\underline{\quad} + \underline{\quad} = \underline{\quad}$$

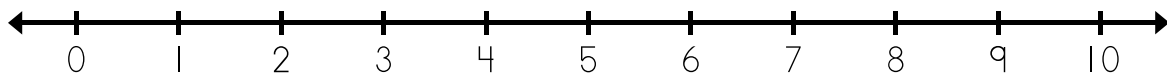


Preview

Please log in to download
the printable version of this worksheet.

$$\underline{\quad} + \underline{\quad} = \underline{\quad}$$

e. Use the number line to solve.



$$2 + 2 = \underline{\quad}$$

$$10 + 0 = \underline{\quad}$$

$$0 + 7 = \underline{\quad}$$

$$5 + 4 = \underline{\quad}$$

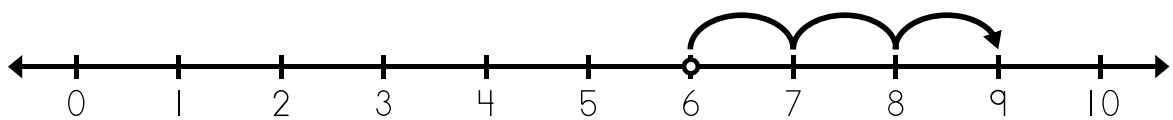
$$4 + 1 = \underline{\quad}$$

$$3 + 3 = \underline{\quad}$$

ANSWER KEY

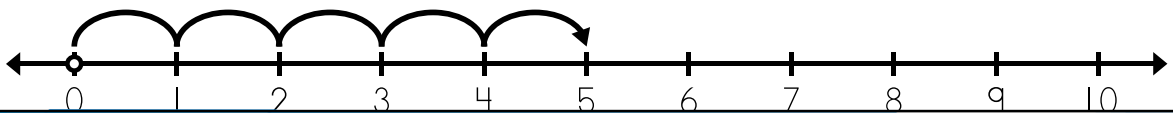
Number Line Addition

a.



$$\underline{6} + \underline{3} = \underline{9}$$

b.



Preview

Please log in to download
the printable version of this worksheet.



$$0 + 7 = \underline{7}$$

$$5 + 4 = \underline{9}$$

$$4 + 1 = \underline{5}$$

$$3 + 3 = \underline{6}$$