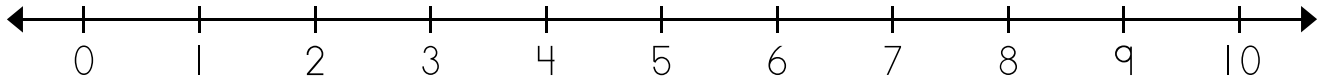


Name: \_\_\_\_\_

## Number Line Addition

Use the number line to solve.




a.  $8 + 2 = \underline{10}$

b.  $4 + 3 = \underline{\quad}$

c.  $0 + 4 = \underline{\quad}$

d.  $3 + 2 = \underline{\quad}$



# Preview

Please log in to download  
the printable version of this worksheet.

g. 
$$\begin{array}{r} 6 \\ + 2 \\ \hline 8 \end{array}$$

h. 
$$\begin{array}{r} 3 \\ + 1 \\ \hline \end{array}$$

i. 
$$\begin{array}{r} 2 \\ + 4 \\ \hline \end{array}$$

j. 
$$\begin{array}{r} 5 \\ + 5 \\ \hline \end{array}$$

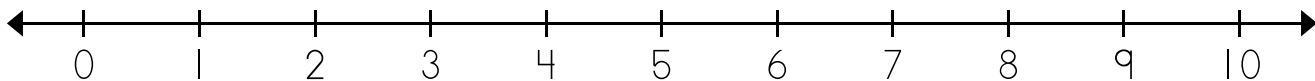
k. 
$$\begin{array}{r} 9 \\ + 0 \\ \hline \end{array}$$

l. 
$$\begin{array}{r} 1 \\ + 1 \\ \hline \end{array}$$

# ANSWER KEY

## Number Line Addition

Use the number line to solve.



a.  $8 + 2 = \underline{10}$

b.  $4 + 3 = \underline{7}$

Use



$$\begin{array}{r} + 5 \\ \hline 10 \end{array}$$

$$\begin{array}{r} + 0 \\ \hline 9 \end{array}$$

$$\begin{array}{r} + 1 \\ \hline 2 \end{array}$$