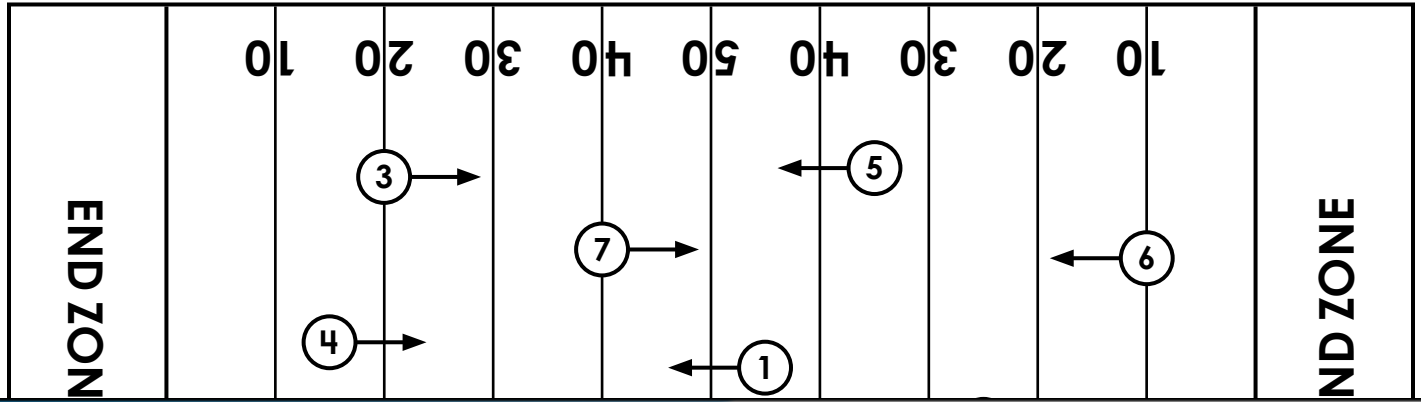


Name: _____

End Zone Addition

Complete each addition fact to calculate how many yards your team needs to move up the field to get the football into the end zone. Match each question number with the number on the football field. Use the arrows to determine toward which end zone to move the football.



Preview

Please log in to download the printable version of this worksheet.

3. + _____ = 100

4. + _____ = 100

5. + _____ = 100

6. + _____ = 100

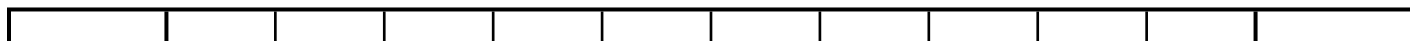
7. + _____ = 100

8. + _____ = 100

ANSWER KEY

End Zone Addition

Complete each addition fact to calculate how many yards your team needs to move up the field to get the football into the end zone. Match each question number with the number on the football field. Use the arrows to determine toward which end zone to move the football.




Preview

Please log in to download
the printable version of this worksheet.



7.  + 60 = 100

8.  + 75 = 100