

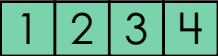

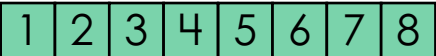


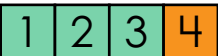
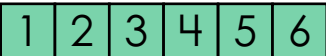


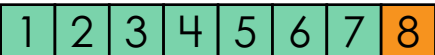

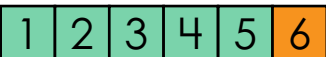
Name: _____

Adding Doubles + 1

	What doubles + 1 math fact is shown?	What doubles math fact helped you?
<div style="display: flex; justify-content: space-between; margin-bottom: 5px;"> 1 2 3 4 </div> <div style="display: flex; justify-content: space-between;"> 1 2 3 4 5 </div>	$\underline{4} + \underline{5} = \underline{9}$	$\underline{4} + \underline{4} = \underline{8}$
<div style="display: flex; justify-content: space-between; margin-bottom: 5px;"> 1 2 3 4 5 6 7 8 </div> <div style="display: flex; justify-content: space-between;"> 1 2 3 4 5 6 7 8 9 </div>	$8 + 9 = \underline{\quad}$	$8 + 8 = \underline{\quad}$
<div style="display: flex; justify-content: space-between; margin-bottom: 5px;"> 1 2 3 </div> <div style="display: flex; justify-content: space-between;"> 1 2 3 4 </div>	$3 + 4 = \underline{\quad}$	$3 + 3 = \underline{\quad}$
<div style="display: flex; justify-content: space-between; margin-bottom: 5px;"> 1 2 3 4 5 6 </div> <div style="display: flex; justify-content: space-between;"> 1 2 3 4 5 6 7 </div>	$\underline{\quad} + \underline{\quad} = \underline{\quad}$	$\underline{\quad} + \underline{\quad} = \underline{\quad}$
<div style="display: flex; justify-content: space-between; margin-bottom: 5px;"> 1 2 3 4 5 6 7 </div> <div style="display: flex; justify-content: space-between;"> 1 2 3 4 5 6 7 8 </div>	$\underline{\quad} + \underline{\quad} = \underline{\quad}$	$\underline{\quad} + \underline{\quad} = \underline{\quad}$
<div style="display: flex; justify-content: space-between; margin-bottom: 5px;"> 1 2 3 4 5 </div> <div style="display: flex; justify-content: space-between;"> 1 2 3 4 5 6 </div>	$\underline{\quad} + \underline{\quad} = \underline{\quad}$	$\underline{\quad} + \underline{\quad} = \underline{\quad}$

ANSWER KEY

Adding Doubles + 1

	What doubles + 1 math fact is shown?	What doubles math fact helped you?
 	$\underline{4} + \underline{5} = \underline{9}$	$\underline{4} + \underline{4} = \underline{8}$
 	$8 + 9 = \underline{17}$	$8 + 8 = \underline{16}$
 	$3 + 4 = \underline{7}$	$3 + 3 = \underline{6}$
 	$\underline{6} + \underline{7} = \underline{13}$	$\underline{6} + \underline{6} = \underline{12}$
 	$\underline{7} + \underline{8} = \underline{15}$	$\underline{7} + \underline{7} = \underline{14}$
 	$\underline{5} + \underline{6} = \underline{11}$	$\underline{5} + \underline{5} = \underline{10}$