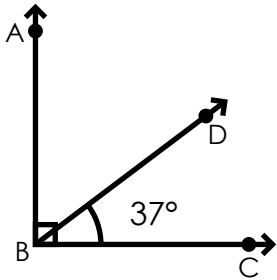


Name: _____

Complementary Angles

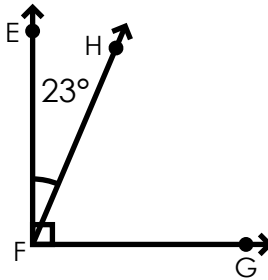
Find the complementary angles.

a.



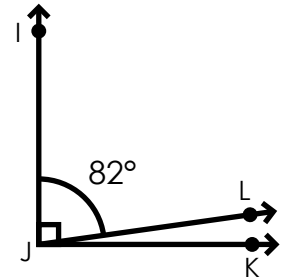
$\angle ABD =$ _____

b.



$\angle HFG =$ _____

c.



$\angle LJK =$ _____

d.



e.

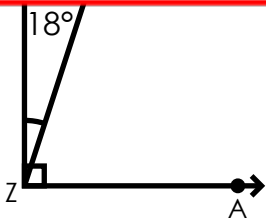


f.

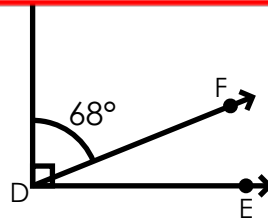


~ PREVIEW ~

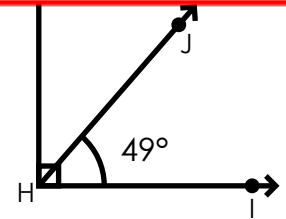
Please log in or register to download the printable version of this worksheet.



$\angle BZA =$ _____

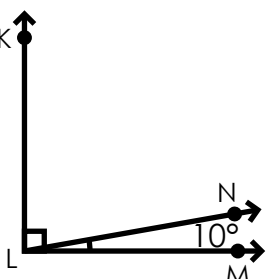


$\angle FDE =$ _____



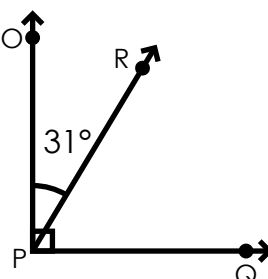
$\angle GHJ =$ _____

j.



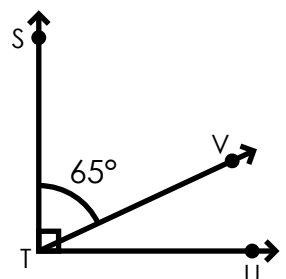
$\angle KLN =$ _____

k.



$\angle R PQ =$ _____

l.



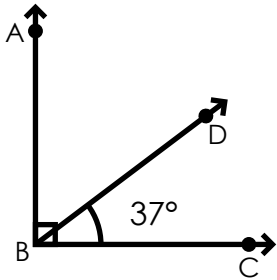
$\angle VTU =$ _____

ANSWER KEY

Complementary Angles

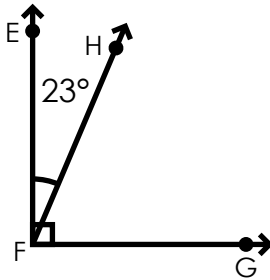
Find the complementary angles.

a.



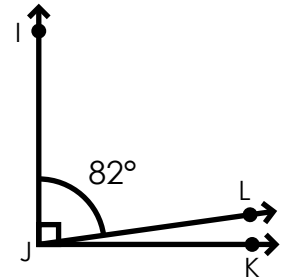
$$\angle ABD = \underline{53^\circ}$$

b.



$$\angle HFG = \underline{67^\circ}$$

c.



$$\angle LJK = \underline{8^\circ}$$



~ PREVIEW ~

Please log in or register to download
the printable version of this worksheet.