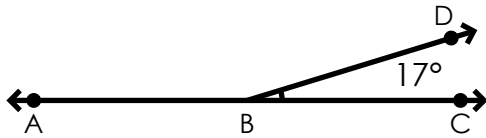


Name: _____

Supplementary Angles

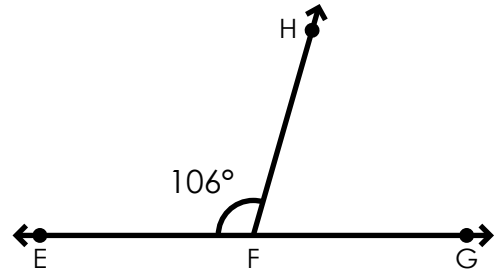
Find the supplementary angles.

a.



$\angle ABD =$ _____

b.



$\angle HFG =$ _____

c.

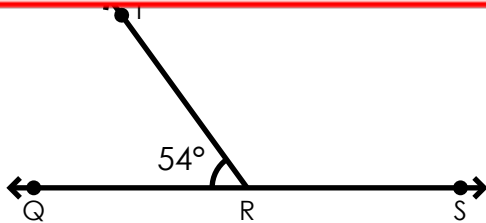


d.

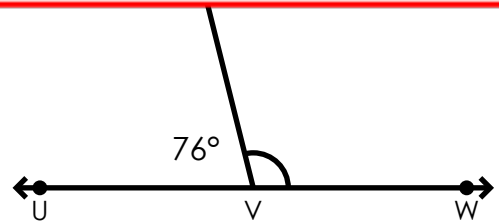


~ PREVIEW ~

Please log in or register to download the printable version of this worksheet.

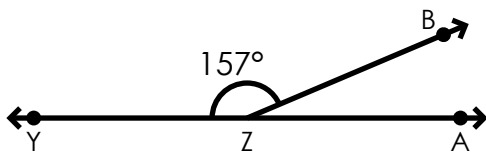


$\angle TRS =$ _____



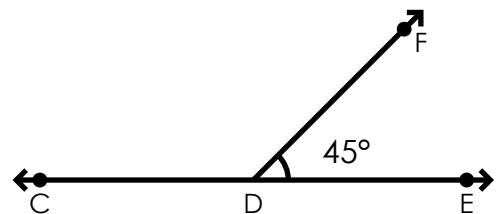
$\angle XVW =$ _____

g.



$\angle ABD =$ _____

h.



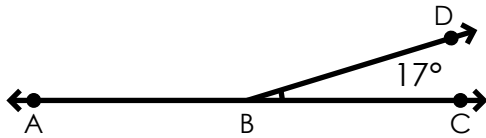
$\angle CDF =$ _____

ANSWER KEY

Supplementary Angles

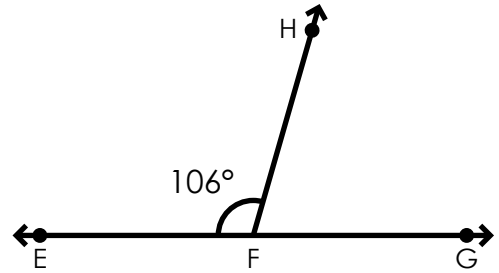
Find the supplementary angles.

a.



$$\angle ABD = 163^\circ$$

b.



$$\angle HFG = 74^\circ$$



~ PREVIEW ~

Please log in or register to download the printable version of this worksheet.

$$\angle ABD = \underline{23^\circ}$$

$$\angle CDF = \underline{135^\circ}$$