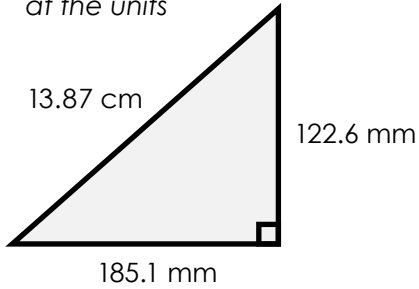


Name: \_\_\_\_\_

# Area and Perimeter of a Triangle

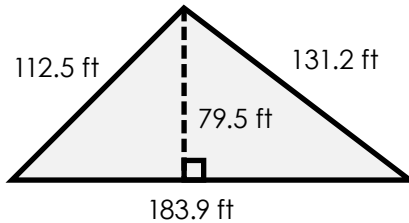
Find the area and perimeter of each triangle.

a. *Hint: Look carefully at the units*



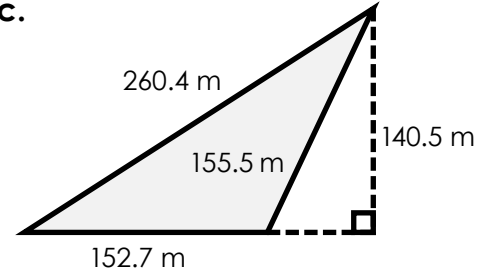
area = \_\_\_\_\_

b.



area = \_\_\_\_\_

c.



area = \_\_\_\_\_



# Preview

Please log in to download the printable version of this worksheet.

area = \_\_\_\_\_

area = \_\_\_\_\_

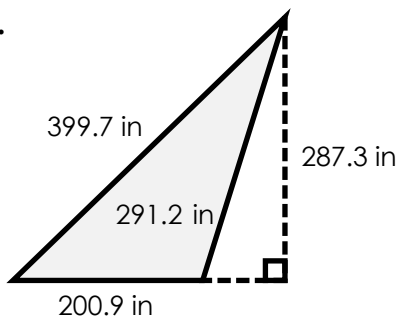
area = \_\_\_\_\_

perimeter = \_\_\_\_\_

perimeter = \_\_\_\_\_

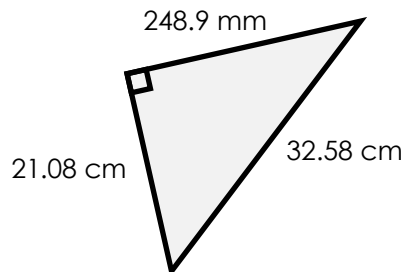
perimeter = \_\_\_\_\_

g.



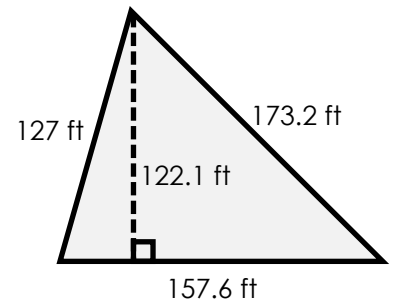
area = \_\_\_\_\_

h. *Hint: Look carefully at the units*



area = \_\_\_\_\_

i.



area = \_\_\_\_\_

perimeter = \_\_\_\_\_

perimeter = \_\_\_\_\_

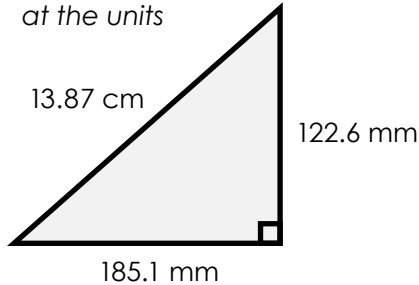
perimeter = \_\_\_\_\_

# ANSWER KEY

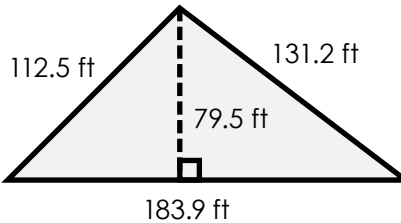
## Area and Perimeter of a Triangle

Find the area and perimeter of each triangle.

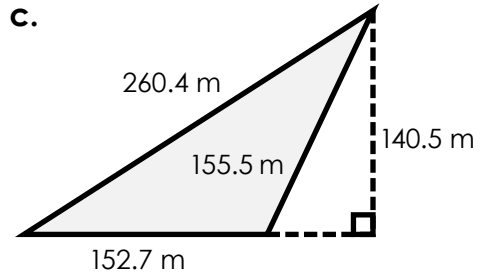
- a. *Hint: Look carefully at the units*



- b.



- c.



# Preview

Please log in to download  
the printable version of this worksheet.

