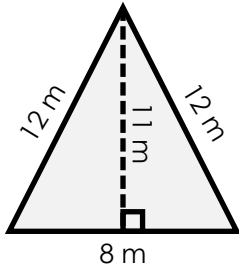


Name: \_\_\_\_\_

# Area and Perimeter of a Triangle

Find the area and perimeter of each triangle.

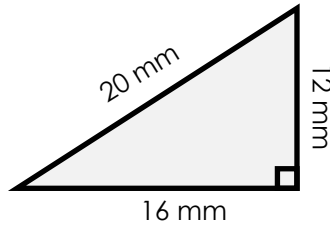
a.



area = \_\_\_\_\_

perimeter = \_\_\_\_\_

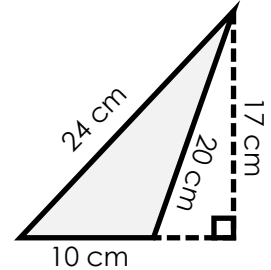
b.



area = \_\_\_\_\_

perimeter = \_\_\_\_\_

c.



area = \_\_\_\_\_

perimeter = \_\_\_\_\_



# Preview

Please log in to download the printable version of this worksheet.

area = \_\_\_\_\_

perimeter = \_\_\_\_\_

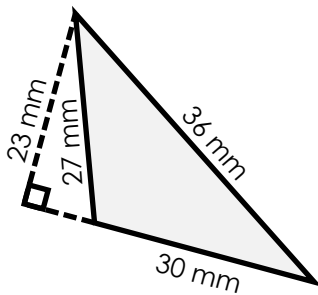
area = \_\_\_\_\_

perimeter = \_\_\_\_\_

area = \_\_\_\_\_

perimeter = \_\_\_\_\_

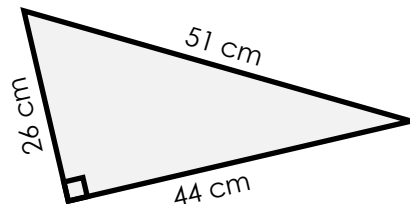
g.



area = \_\_\_\_\_

perimeter = \_\_\_\_\_

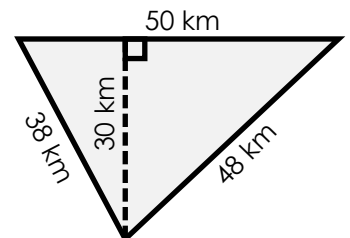
h.



area = \_\_\_\_\_

perimeter = \_\_\_\_\_

i.



area = \_\_\_\_\_

perimeter = \_\_\_\_\_

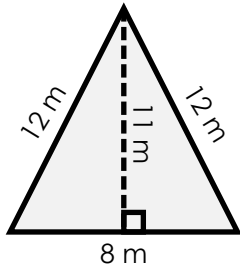
## ANSWER KEY

# Area and Perimeter of a Triangle

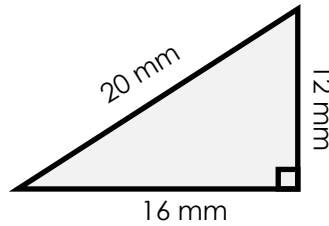
**NOTE: The measurements of the triangles have been rounded to the nearest whole number. Triangles are not drawn to scale.**

Find the area and perimeter of each triangle.

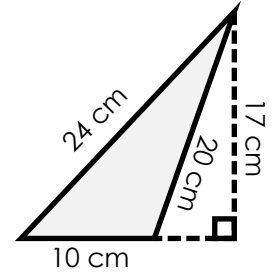
a.



b.



c.



# Preview

Please log in to download  
the printable version of this worksheet.

