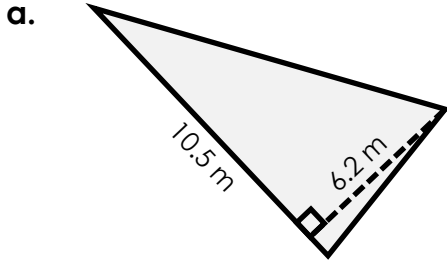


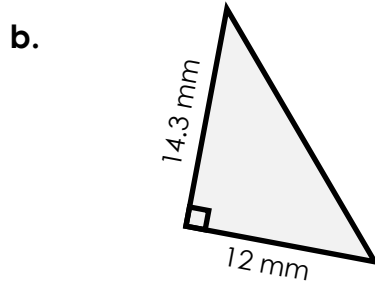
Name: _____

Area of a Triangle

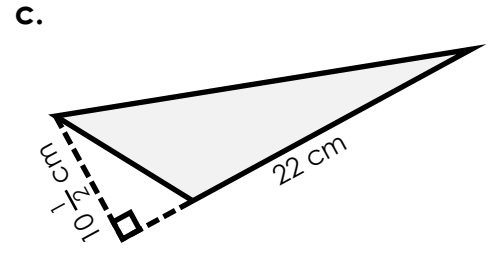
Find the area of each triangle.



area = _____



area = _____



area = _____

b. 6.4 km

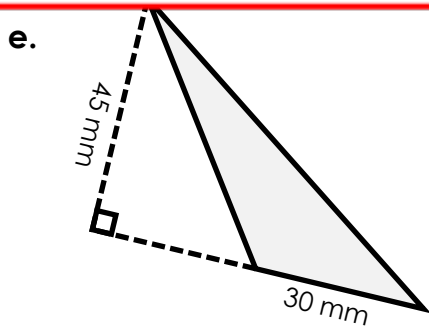
c.

d.

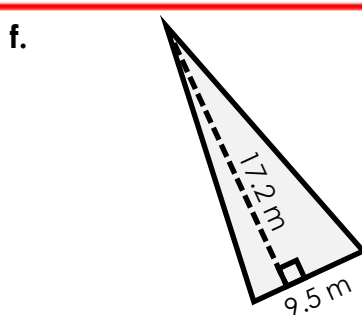


~ PREVIEW ~

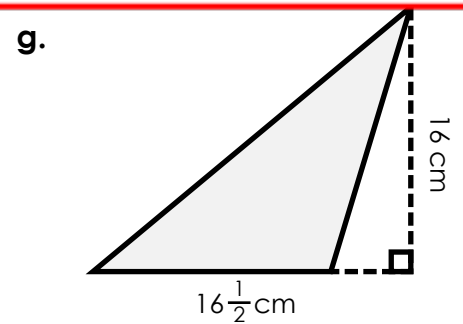
Please log in or register to download the printable version of this worksheet.



area = _____



area = _____



area = _____

Find the area of each triangle using the base and height measurements.

h. $b = 24$ centimeters
 $h = 17$ centimeters

area = _____

i. $b = 40.5$ kilometers
 $h = 10$ kilometers

area = _____

j. $b = 28.3$ meters
 $h = 18.6$ meters

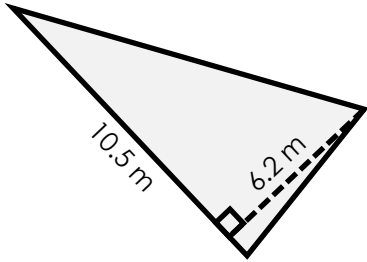
area = _____

ANSWER KEY

Area of a Triangle

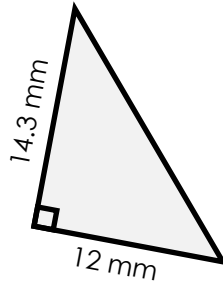
Find the area of each triangle.

a.



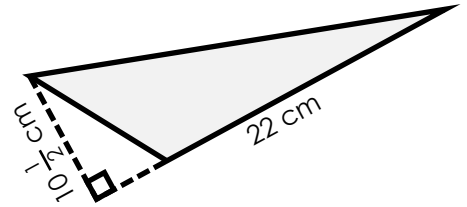
22.55 m²

b.



85.8 mm²

c.



115.5 cm²



~ PREVIEW ~

Please log in or register to download the printable version of this worksheet.

area = _____ area = _____ area = _____