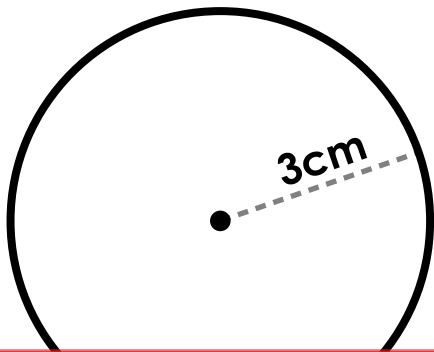


1. Area of a Circle

Calculate the area of the circle.



2. Area of a Circle

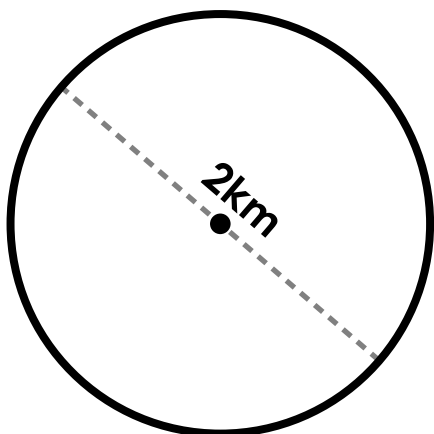
**A circle has a diameter of 8m.
What is the area?**



Preview

Please log in to download the printable version of this worksheet.

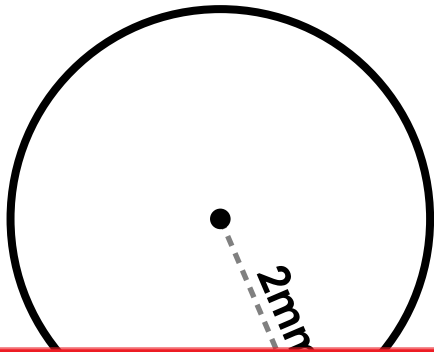
Calculate the area of the circle



**A circle has a radius of 5mm.
What is the area?**

5. Area of a Circle

Calculate the area of the circle



6. Area of a Circle

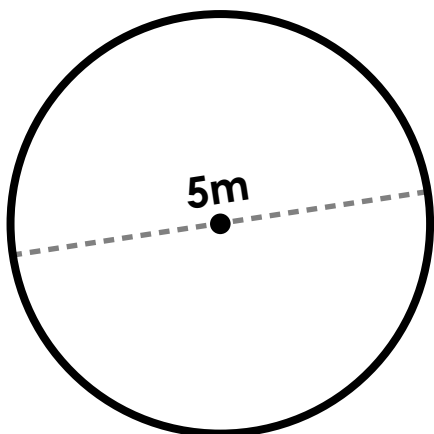
**A circle has a diameter of 6cm.
What is the area?**



Preview

Please log in to download the printable version of this worksheet.

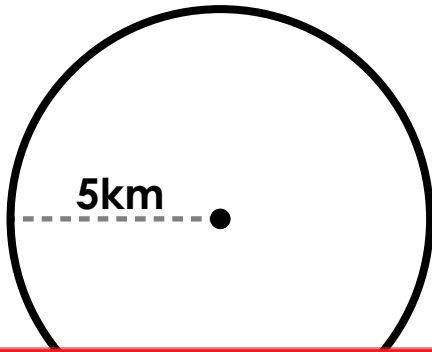
Calculate the area of the circle



**A circle has a radius of 9km.
What is the area?**

9. Area of a Circle

Calculate the area of the circle



10. Area of a Circle

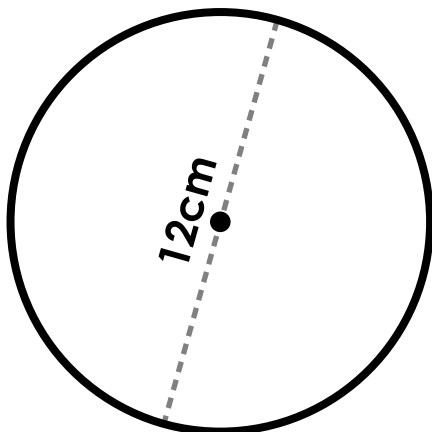
**A circle has a diameter of 1mm.
What is the area?**



Preview

Please log in to download the printable version of this worksheet.

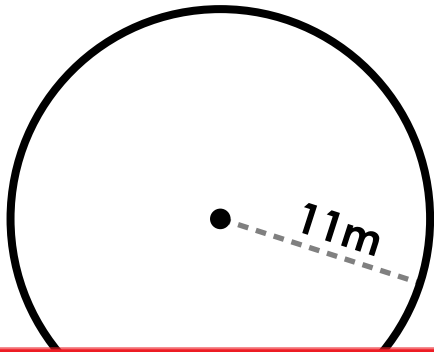
Calculate the area of the circle



**A circle has a radius of 4m.
What is the area?**

13. Area of a Circle

Calculate the area of the circle



14. Area of a Circle

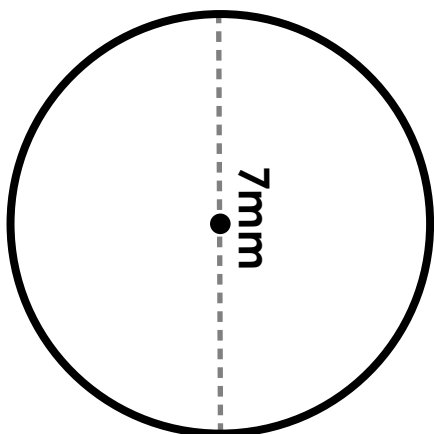
**A circle has a diameter of 3km.
What is the area?**



Preview

Please log in to download the printable version of this worksheet.

Calculate the area of the circle



**A circle has a radius of 8cm.
What is the area?**

17. Area of a Circle

Calculate the area of the circle



18. Area of a Circle

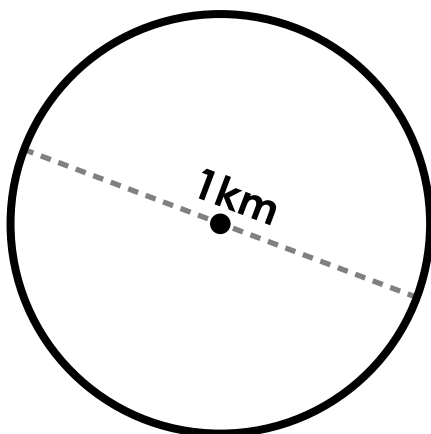
**A circle has a diameter of 5m.
What is the area?**



Preview

Please log in to download the printable version of this worksheet.

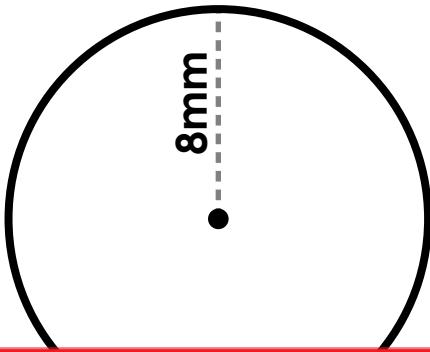
Calculate the area of the circle



**A circle has a radius of 10mm.
What is the area?**

21. Area of a Circle

Calculate the area of the circle



22. Area of a Circle

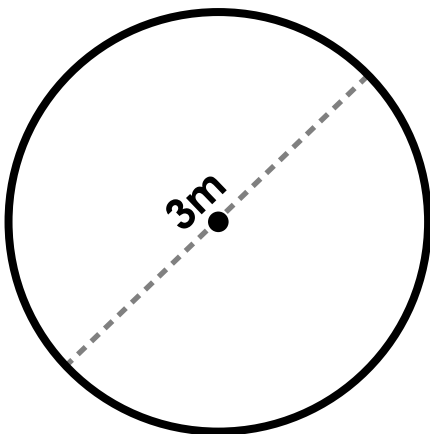
**A circle has a diameter of 4cm.
What is the area?**



Preview

Please log in to download the printable version of this worksheet.

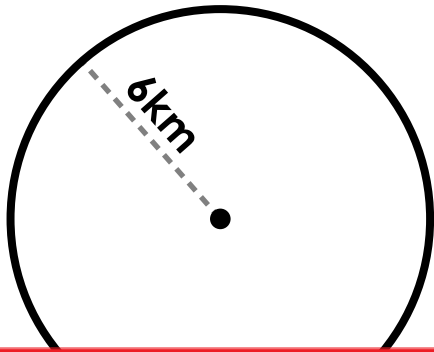
Calculate the area of the circle



**A circle has a radius of 7km.
What is the area?**

25. Area of a Circle

Calculate the area of the circle



26. Area of a Circle

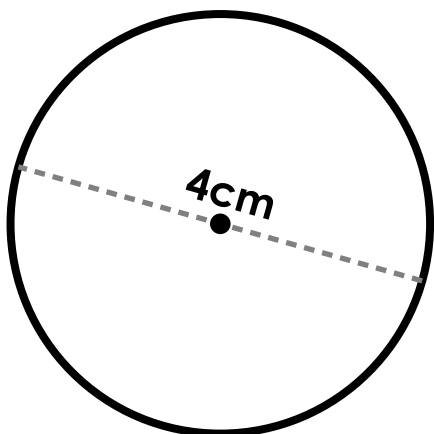
**A circle has a diameter of 9mm.
What is the area?**



Preview

Please log in to download the printable version of this worksheet.

Calculate the area of the circle



**A circle has a radius of 2m.
What is the area?**

29. Area of a Circle

Calculate the area of the circle

30. Area of a Circle



Preview

Please log in to download the printable version of this worksheet.

Name: _____

Task Cards: Area of a Circle

1. Area = _____

16. Area = _____

2. Area = _____

17. Area = _____

Preview

Please log in to download
the printable version of this worksheet.



14. Area = _____

29. Area = _____

15. Area = _____

30. Area = _____

ANSWER KEY

Task Cards: Area of a Circle

1. Area = 28.27 cm²

16. Area = 201.06 cm²

2. Area = 50.27 m²

17. Area = 50.27 cm²

Preview

Please log in to download
the printable version of this worksheet.



14. Area = 7.07 km²

29. Area = 314.16 m²

15. Area = 38.48 mm²

30. Area = 38.48 km²

Task Cards: Area of a Circle

This file contains 30 task cards.

There are countless ways to use task cards in your classroom.
Here are a few ideas:

Preview

Please log in to download
the printable version of this worksheet.



Have a parent, friend, or volunteer sit with individual students who need extra help. They can practice by solving the problems on the task cards together.