


Name: \_\_\_\_\_

# Community Helpers Math



Color **8** badges.



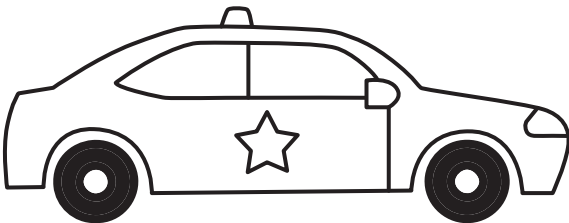


## Preview

Please log in to download the printable version of this worksheet.

How many police officers? \_\_\_\_\_ + \_\_\_\_\_ = \_\_\_\_\_

How many blocks long is the police car?



The police car is \_\_\_\_\_ blocks long.

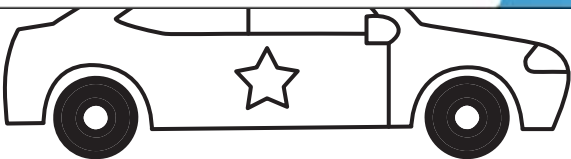
## Community Helpers Math



Color **8** badges.

# Preview

Please log in to download  
the printable version of this worksheet.



The police car is   4   blocks long.