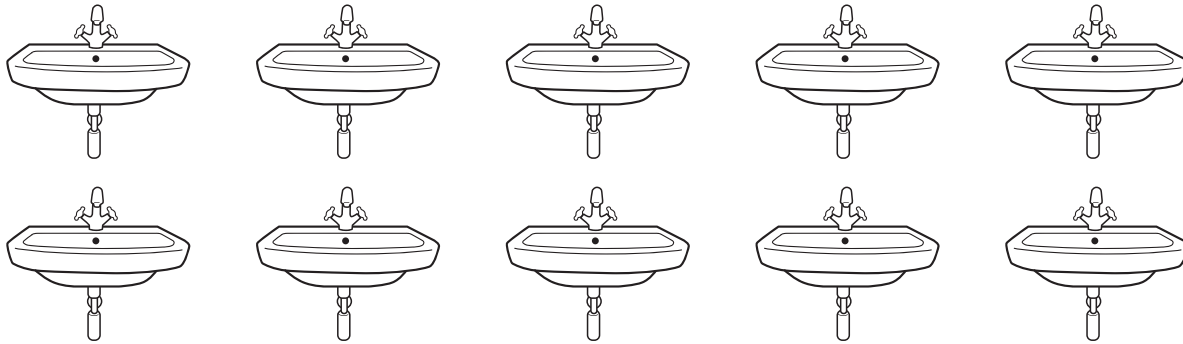


Name: _____

Community Helpers Math

Color **5** sinks.

Add




Preview

Please log in to download
the printable version of this worksheet.

How many plumbers? _____ + _____ = _____

How many blocks long is the tub?



The tub is _____ blocks long.


Community Helpers Math



Color **5** sinks.

Preview

Please log in to download
the printable version of this worksheet.



The tub is **3** blocks long.