

Name: \_\_\_\_\_


by 10s and 1s

# Numbers up to 100



Each bundle contains 10 sticks.

Count the bundles. Count the additional sticks. Then write the total number.

1. 

tens	ones
total	


2. 

tens	ones
------	------




# Preview

Please log in to download the printable version of this worksheet.

4. 

tens	ones
total	

5. 

tens	ones
total	

Name: \_\_\_\_\_

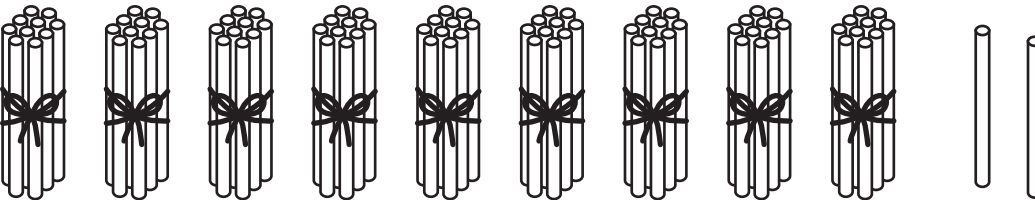
by 10s and 1s

# Numbers up to 100



Each bundle contains 10 sticks.

Count the bundles. Count the additional sticks. Then write the total number.

6. 

tens	ones
total	

7. 

tens	ones
------	------




# Preview


Please log in to download the printable version of this worksheet.



total	
-------	--

9. 

tens	ones
total	

10. 

tens	ones
total	

# ANSWER KEY


by 10s and 1s

## Numbers up to 100

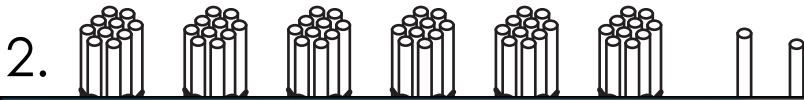


Each bundle contains 10 sticks.

Count the bundles. Count the additional sticks. Then write the total number.



tens	ones
3	4
total	
34	




tens	ones
6	2


# Preview

Please log in to download the printable version of this worksheet.

15
----



tens	ones
10	1
total	
101	



tens	ones
4	3
total	
43	

# ANSWER KEY


by 10s and 1s

## Numbers up to 100



Each bundle contains 10 sticks.

Count the bundles. Count the additional sticks. Then write the total number.



tens	ones
9	2
total	
92	



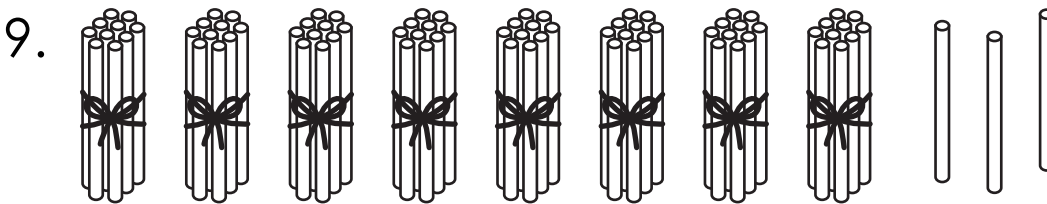
tens	ones
2	4

# Preview


Please log in to download the printable version of this worksheet.



71	
----	--



tens	ones
8	3
total	
83	



tens	ones
5	5
total	
55	