

Name: _____

Twenty-Six

Special Number

26

Trace and write.

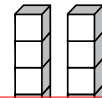
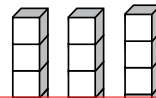
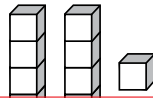
26

twenty-six

odd

even

Which set of blocks shows 26? (Circle one.)




tens



Preview

Please log in to download the printable version of this worksheet.



Show 26 with tally marks.