


Name: \_\_\_\_\_

# Comparing Money

Write the amount shown by each set of coins.  
Then, compare the sets of coins using the symbols:  $<$ ,  $>$ , or  $=$ .



compare:  $<$ ,  $>$ ,  $=$



total: \_\_\_\_\_


total: \_\_\_\_\_

compare:  $<$ ,  $>$ ,  $=$



# Preview


Please log in to download the printable version of this worksheet.



total: \_\_\_\_\_

total: \_\_\_\_\_

compare:  $<$ ,  $>$ ,  $=$



total: \_\_\_\_\_

total: \_\_\_\_\_

# ANSWER KEY


## Comparing Money

Write the amount shown by each set of coins.

Then, compare the sets of coins using the symbols:  $<$ ,  $>$ , or  $=$ .



compare:  $<$ ,  $>$ ,  $=$




# Preview

Please log in to download the printable version of this worksheet.



compare:  $<$ ,  $>$ ,  $=$



total: 56¢

total: 50¢