

Name: \_\_\_\_\_


# Counting Nickels


Count the money. Write the amount.


a.  \_\_\_\_\_ ¢


b.  \_\_\_\_\_ ¢

c.  \_\_\_\_\_ ¢

d.  \_\_\_\_\_ ¢

e.  \_\_\_\_\_ ¢


f.  \_\_\_\_\_ ¢

g.  \_\_\_\_\_ ¢

h.  \_\_\_\_\_ ¢

i.  \_\_\_\_\_ ¢

j.  \_\_\_\_\_ ¢

k.  \_\_\_\_\_ ¢

# ANSWER KEY


## Counting Nickels


Count the money. Write the amount.


a.  \_\_\_\_\_ **55** ¢


b.  \_\_\_\_\_ **35** ¢


c.  \_\_\_\_\_ **45** ¢

d.  \_\_\_\_\_ **5** ¢


e.  \_\_\_\_\_ **20** ¢

f.  \_\_\_\_\_ **40** ¢

g.  \_\_\_\_\_ **85** ¢

h.  \_\_\_\_\_ **50** ¢

i.  \_\_\_\_\_ **65** ¢

j.  \_\_\_\_\_ **15** ¢

k.  \_\_\_\_\_ **45** ¢