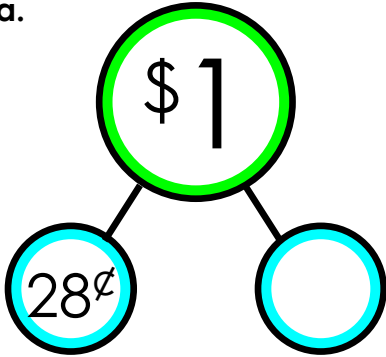


Name: _____

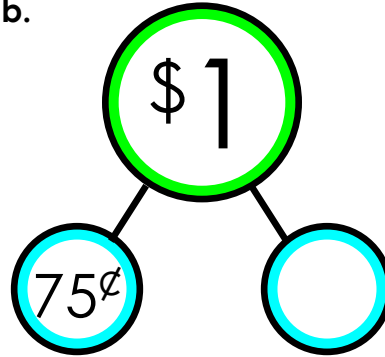
Money Bonds

The coin amounts on the outside of each web add up to the one dollar in the center. Write the correct amount in the empty circle to add up to one dollar.

a.



b.

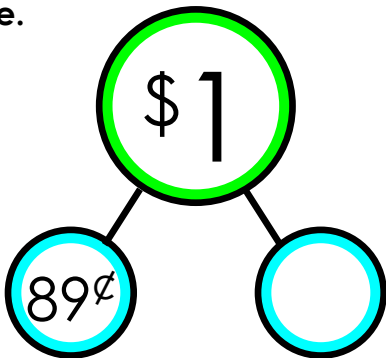


~ PREVIEW ~

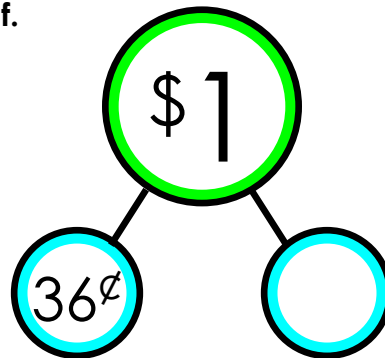
Please log in or register to download the printable version of this worksheet.



e.



f.




ANSWER KEY

Money Bonds

The coin amounts on the outside of each web add up to the one dollar in the center. Write the correct amount in the empty circle to add up to one dollar.

a.



b.



~ PREVIEW ~

Please log in or register to download
the printable version of this worksheet.