


Name: \_\_\_\_\_

Round Up to the Next Dollar

# Snack Shack


## Next Dollar Up



A pretzel costs \$1.72.

How many dollars will you need to buy the pretzel?


\_\_\_\_\_



A slice of pizza costs \$5.95.

How many dollars will you need to buy the pizza?


\_\_\_\_\_



An apple costs 49¢.

How many dollars will you need to buy the apple?


\_\_\_\_\_



A burger costs \$6.88.

How many dollars will you need to buy the burger?

\_\_\_\_\_



French fries cost \$3.50.

How many dollars will you need to buy the fries?

\_\_\_\_\_




A bowl of soup costs \$4.69.

How many dollars will you need to buy the soup?

\_\_\_\_\_


## Snack Shack Next Dollar Up



A pretzel costs \$1.72.

How many dollars will you need to buy the pretzel?


**\$2.00**



A slice of pizza costs \$5.95.

How many dollars will you need to buy the pizza?


**\$6.00**



An apple costs 49¢.

How many dollars will you need to buy the apple?


**\$1.00**



A burger costs \$6.88.

How many dollars will you need to buy the burger?

**\$7.00**



French fries cost \$3.50.

How many dollars will you need to buy the fries?

**\$4.00**



A bowl of soup costs \$4.69.

How many dollars will you need to buy the soup?

**\$5.00**