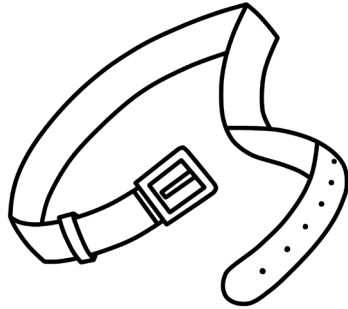


1. Next Dollar Up

A belt costs **\$8.99**.



Round up to the nearest dollar.

How many dollars would you

2. Next Dollar Up

A bottle of glue costs **79¢**.



Round up to the nearest dollar.


How many dollars would you



Preview

Please log in to download
the printable version of this worksheet.

A hat costs **\$6.29**.



Round up to the nearest dollar.

How many dollars would you
need to buy the hat?

An ice cream cone
costs **\$3.19**.

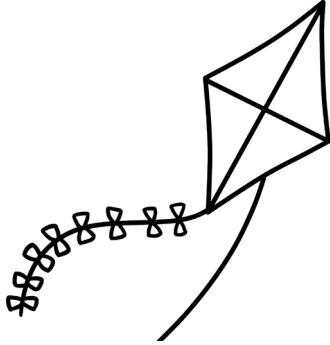


Round up to the nearest dollar.

How many dollars would you
need to buy an ice cream
cone?

5. Next Dollar Up

A kite costs **\$2.75**.




Round up to the nearest dollar.

How many dollars would you

6. Next Dollar Up

A hair brush costs **\$5.45**.



Round up to the nearest dollar.


How many dollars would you



Preview

Please log in to download
the printable version of this worksheet.

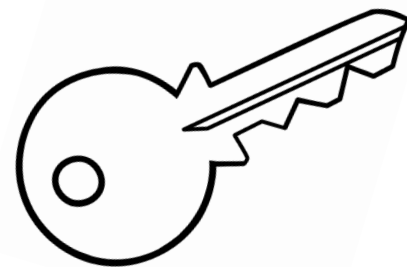
A crown costs **\$2.12**.



Round up to the nearest dollar.

How many dollars would you
need to buy a crown?

A key costs **\$1.89**.




Round up to the nearest dollar.

How many dollars would you
need to buy the key?

9. Next Dollar Up

A blanket costs **\$10.55**.

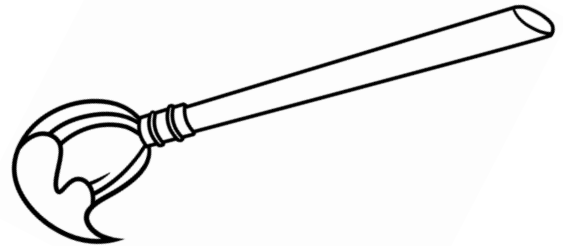


Round up to the nearest dollar.

How many dollars would you


10. Next Dollar Up

A paint brush costs **97¢**.



Round up to the nearest dollar.

How many dollars would you



Preview

Please log in to download
the printable version of this worksheet.


A cupcake costs **\$3.50**.



Round up to the nearest dollar.

How many dollars would you
need to buy the cupcake?

A shirt costs **\$8.69**.

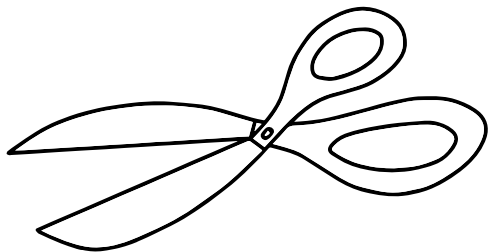


Round up to the nearest dollar.

How many dollars would you
need to buy a shirt?

13. Next Dollar Up

A pair of scissors costs **\$2.30**.




Round up to the nearest dollar.

How many dollars would you


14. Next Dollar Up

Popcorn costs **\$4.36**.



Round up to the nearest dollar.


How many dollars would you



Preview

Please log in to download
the printable version of this worksheet.


A pair of slippers costs **\$6.60**.



Round up to the nearest dollar.

How many dollars would you
need to buy the slipper?

A light bulb costs **\$4.39**.




Round up to the nearest dollar.

How many dollars would you
need to buy a light bulb?

17. Next Dollar Up

A pot costs **\$11.50**.



Round up to the nearest dollar.

How many dollars would you

18. Next Dollar Up

Shorts costs **\$7.95**.



Round up to the nearest dollar.


How many dollars would you



Preview

Please log in to download
the printable version of this worksheet.

A slice of pizza costs **\$4.25**.



Round up to the nearest dollar.

How many dollars would you
need to buy a slice of pizza?

A houseplant costs **\$9.97**.



Round up to the nearest dollar.

How many dollars would you
need to buy the houseplant?

Name: _____

Task Cards: Next Dollar Up

1. How many dollars will you need to buy the belt _____ ?
2. How many dollars will you need to buy the bottle of glue _____ ?

Preview

Please log in to download
the printable version of this worksheet.



18. How many dollars will you need to buy the shorts _____ ?
19. How many dollars will you need to buy a slice of pizza _____ ?
20. How many dollars will you need to buy the houseplant _____ ?

ANSWER KEY

Task Cards: Next Dollar Up

1. How many dollars will you need to buy the belt _____ **\$9.00** _____ ?
2. How many dollars will you need to buy the bottle of glue _____ **\$1.00** _____ ?

Preview

Please log in to download
the printable version of this worksheet.



18. How many dollars will you need to buy the shorts _____ **\$8.00** _____ ?
19. How many dollars will you need to buy a slice of pizza _____ **\$5.00** _____ ?
20. How many dollars will you need to buy the houseplant _____ **\$10.00** _____ ?