

Name: \_\_\_\_\_



# Math Buzz


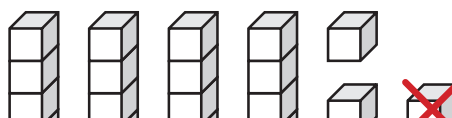
Which fact is related to this subtraction fact?

$$17 - 6 = 11$$

$$17 + 6 = 23 \quad 11 + 6 = 17 \quad 17 + 11 = 28 \quad 6 + 5 = 11$$

Draw the hour hand to show 9:00.

Subtract.




# Preview

Please log in to download the printable version of this worksheet.

Thea had 13 pennies in her jar.  
Her brother gave her 5 more.  
How many pennies does Thea have now?



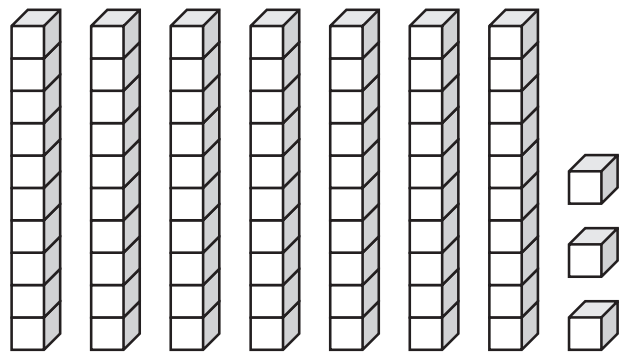
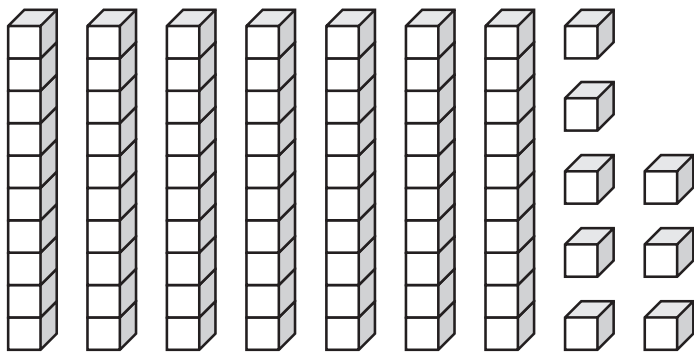
answer: \_\_\_\_\_ pennies



Name: \_\_\_\_\_

# Math Buzz

Compare.



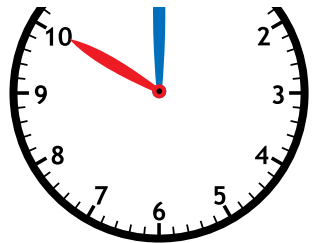
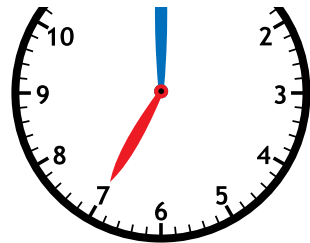
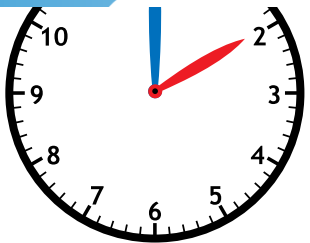
\_\_\_\_\_ is greater than \_\_\_\_\_




# Preview

Please log in to download the printable version of this worksheet.

$$\begin{array}{r} / \\ + 3 \\ \hline \end{array}$$



Fill in the missing numbers.



The rectangle has \_\_\_\_\_ fourths.

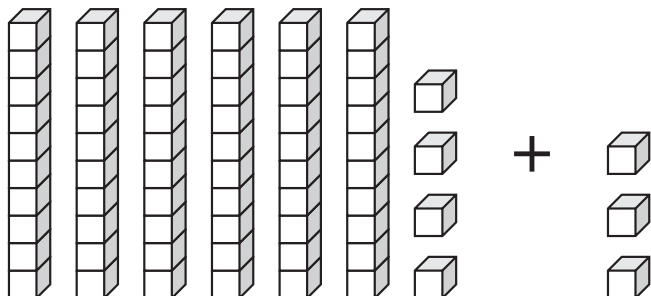
The \_\_\_\_\_ equal parts make one whole.

Name: \_\_\_\_\_



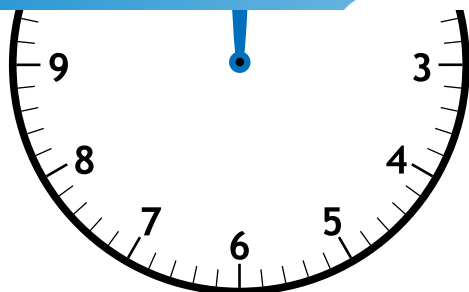

# Math Buzz

Add.



$$\square + \square = \square$$

Write the fact family for the numbers in the number bond.



# Preview


Please log in to download the printable version of this worksheet.

$$\underline{\quad} - \underline{\quad} = \underline{\quad}$$


$$\underline{\quad} - \underline{\quad} = \underline{\quad}$$

Khalil had 12 eggs. He used 2 eggs to make breakfast. How many eggs does Khalil have left?

answer: \_\_\_\_\_ eggs



Name: \_\_\_\_\_



# Math Buzz

Fill in the missing numbers.

91	92	93	94	95	96	97	98	99	100
101	102	103	104	105	106	107	108	109	110
111	112	113	114	115	116	117	118	119	120

10 less

101

10 more




# Preview

Please log in to download  
the printable version of this worksheet.

\_\_\_\_\_ is less than \_\_\_\_\_

\_\_\_\_\_ < \_\_\_\_\_



Wade, Luka, and Alani are selling boxes of cookies. Wade sold 7 boxes, Luka sold 4, and Alani sold 5. How many boxes did they sell all together?

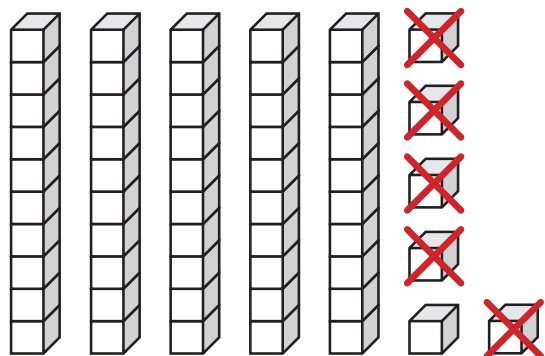
answer: \_\_\_\_\_ **boxes of cookies**

Name: \_\_\_\_\_



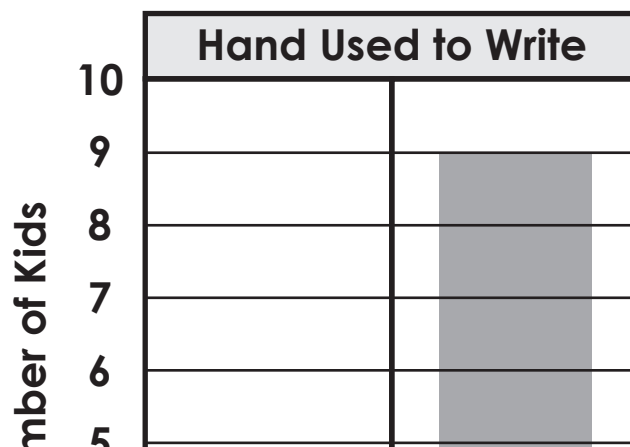
# Math Buzz

Subtract.



$$\boxed{\phantom{00}} - \boxed{\phantom{00}} = \boxed{\phantom{00}}$$

Use the bar graph to answer the questions.



The ribbon is about \_\_\_\_\_ paperclips long.

How many tens and ones make this number?

95

- a. 5 tens 5 ones
- b. 9 tens 5 ones
- c. 5 tens 9 ones
- d. 9 tens 9 ones

# Preview

Please log in to download the printable version of this worksheet.

Left Hand



Right Hand



How many kids write with their left hand? \_\_\_\_\_

How many kids write with their right hand? \_\_\_\_\_

How many kids are there in all? \_\_\_\_\_



Which fact is related to this subtraction fact?

$$17 - 6 = 11$$

$$17 + 6 = 23$$

$$11 + 6 = 17$$

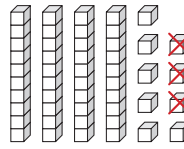
$$17 + 11 = 28$$

$$6 + 5 = 11$$

Draw the hour hand to show 9:00.



Subtract.



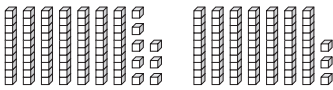
$$49 - 3 = 46$$

Thea had 13 pennies in her jar. Her brother gave her 5 more. How many pennies does Thea have now?

$$13 + 5 = 18$$

answer: 18 pennies

Compare.



78 is greater than 73

$$78 > 73$$


Add.

$$\begin{array}{r} 9 \\ 7 \\ + 3 \\ \hline 19 \end{array}$$

Santiago woke up for school at 7:00. Which clock shows 7:00?



Fill in the missing numbers.



The rectangle shows 4 fourths.



# Preview

Please log in to download the printable version of this worksheet.

answer: 16 eggs

Fill in the missing numbers.

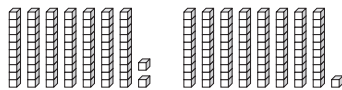
91	92	93	94	95	96	97	98	99	100
101	102	103	104	105	106	107	108	109	110
111	112	113	114	115	116	117	118	119	120

10 less  
91

101

10 more  
111

Compare.



72 is less than 81

$$72 < 81$$

Which flat surface does a **cylinder** have?

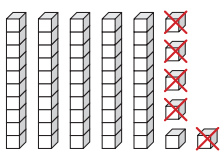


Wade, Luka, and Alani are selling boxes of cookies. Wade sold 7 boxes, Luka sold 4, and Alani sold 5. How many boxes did they sell all together?

$$7 + 4 + 5 = 16$$

answer: 16 boxes of cookies

Subtract.



$$56 - 5 = 51$$

About how many paperclips long is the ribbon.



The ribbon is about 6 paperclips long.

Use the bar graph to answer the questions.

How many kids write with their left hand? 3

How many kids write with their right hand? 9

How many kids are there in all? 12

How many tens and ones make this number?

95

a. 5 tens 5 ones

b. 9 tens 5 ones

c. 5 tens 9 ones

d. 9 tens 9 ones