

Name: \_\_\_\_\_



# Math Buzz

Add.

$$\begin{array}{r} 10 \\ 7 \\ + 8 \\ \hline \end{array}$$

Fill in the missing numbers.

10 less
94
10 more

Subtract.

	Tens	Ones
	4	8
-		5
<hr/>		



# Preview


Please log in to download  
the printable version of this worksheet.

6	7	8	9	10	11	12
13	14	15	16	17	18	19 Family BBQ
20	21	22	23	24	25	26
27	28	29	30			

How many days are in the month of June? \_\_\_\_\_

What day of the week is Malik's family BBQ? \_\_\_\_\_

Name: \_\_\_\_\_

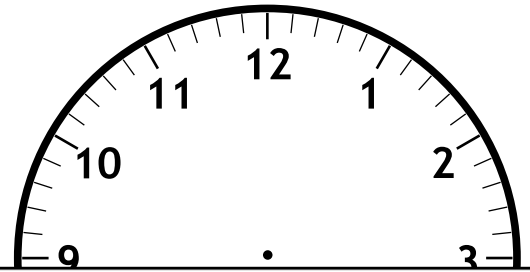


## Math Buzz

How many squares shorter is the ring than the watch?



Ariana has a dentist appointment at 2:00. Draw the hands on the clock to show 2:00.



# Preview

Please log in to download the printable version of this worksheet.

the watch.

Fill in the missing numbers.

$$5 + \square = 14$$

$$14 - \square = 5$$

Add.

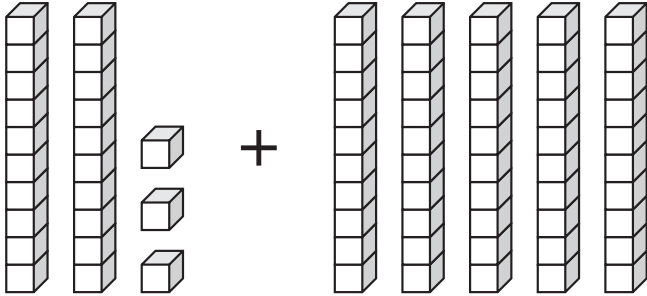
	Tens	Ones
	3	1
+		8
<hr/>		



Name: \_\_\_\_\_

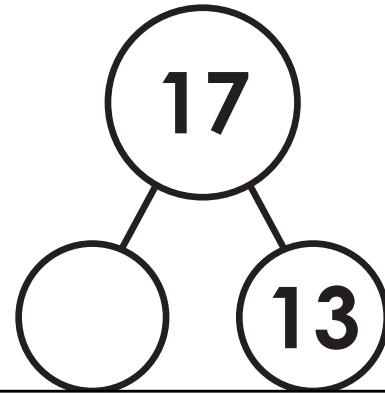
# Math Buzz

Add.



$$\square + \square = \square$$

Fill in the missing number.  
Write the fact family for the numbers in the number bond.






# Preview

Please log in to download  
the printable version of this worksheet.

$$\underline{\quad\quad} - \underline{\quad\quad} = \underline{\quad\quad}$$

$$\underline{\quad\quad} - \underline{\quad\quad} = \underline{\quad\quad}$$

answer: \_\_\_\_\_ gorillas


Circle the shape that has equal **fourths**.



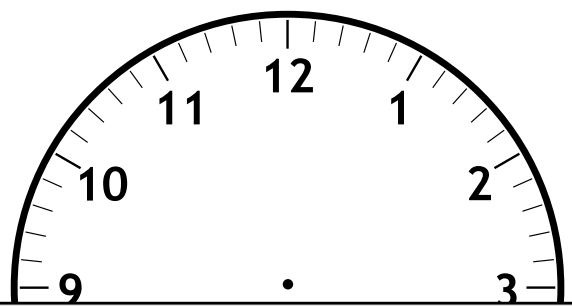
Name: \_\_\_\_\_

# Math Buzz

How many paperclips longer is the guitar than the drum?



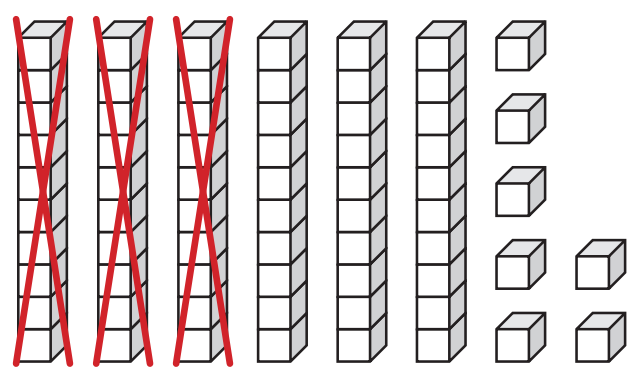
Juliana has a soccer game at 10:00. Draw the hands on the clock to show 10:00.



# Preview

Please log in to download the printable version of this worksheet.

Subtract.



$$\square - \square = \square$$

Write how many tens and ones make this number.

eighty-two	
tens	ones

Name: \_\_\_\_\_



## Math Buzz

Compare the numbers using words.



59 \_\_\_\_\_ 95

is greater than

is less than

Compare the numbers using  $<$  or  $>$ .

Use the bar graph to answer the questions.




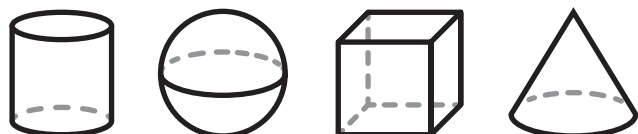
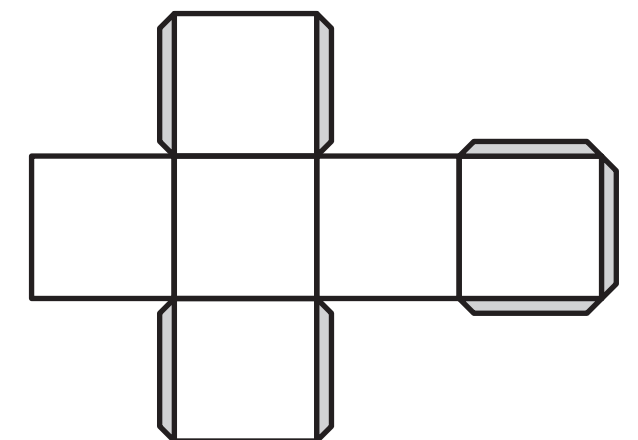
## Preview

Please log in to download the printable version of this worksheet.

How many kids walk to school? \_\_\_\_\_

How many more students take the bus than ride in a car? \_\_\_\_\_

Circle the shape that has equal **quarters**.





Add.

$$\begin{array}{r} 1 \\ 10 \\ 7 \\ + 8 \\ \hline 25 \end{array}$$

Fill in the missing numbers.

10 less
<b>84</b>
94
10 more
<b>104</b>

Subtract.

Tens	Ones
4	8
-	5
<b>4</b>	<b>3</b>

June						
Sunday	Monday	Tuesday	Wednesday	Thursday	Friday	Saturday
6	7	8	9	10	11	12
13	14	15	16	17	18	19 Family BBQ
20	21	22	23	24	25	26
27	28	29	30			

How many days are in the month of June? 30

What day of the week is Malik's family BBQ? Saturday

How many squares shorter is the ring than the watch?

Fill in the missing numbers.


$$5 + \boxed{9} = 14$$

$$14 - \boxed{9} = 5$$

Ariana has a dentist appointment at 2:00. Draw the hands on the clock to show 2:00.

Add.

Tens	Ones
3	1
+	8
<b>3</b>	<b>9</b>



# Preview

Please log in to download the printable version of this worksheet.

answer: 17 - 13 = 4

How many paperclips longer is the guitar than the drum?

The guitar is 3 paperclips longer than the drum.

Juliana has a soccer game at 10:00. Draw the hands on the clock to show 10:00.

Subtract.

$$\boxed{67} - \boxed{30} = \boxed{37}$$

Write how many tens and ones make this number.

eighty-two	
tens	ones
<b>8</b>	<b>2</b>

Compare the numbers using words.

59 is greater than 95

is less than

Compare the numbers using < or >.

59 < 95

Use the bar graph to answer the questions.

Mode	Number of Students
Walk	5
Car	10
Bus	15

How many kids walk to school? 5

How many more students take the bus than ride in a car? 4

Circle the shape the pattern will make if you fold it and tape it together.

Circle the shape that has equal quarters.