

Name: _____



Math Buzz

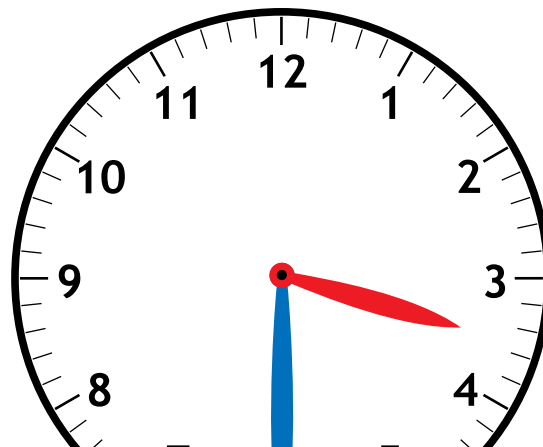
Write the fact family for the numbers in the box.

8	9	17
---	---	----

$$\underline{\quad} + \underline{\quad} = \underline{\quad}$$

$$\underline{\quad} + \underline{\quad} = \underline{\quad}$$

What time is shown on the clock?



Preview

Please log in to download the printable version of this worksheet.

Add.


	Tens	Ones
	4	6
+		3
<hr/>		

Gia and Pax rode their bikes to the park. Each bike has 2 wheels. How many wheels are there total?



answer: _____ wheels

Name: _____




Math Buzz

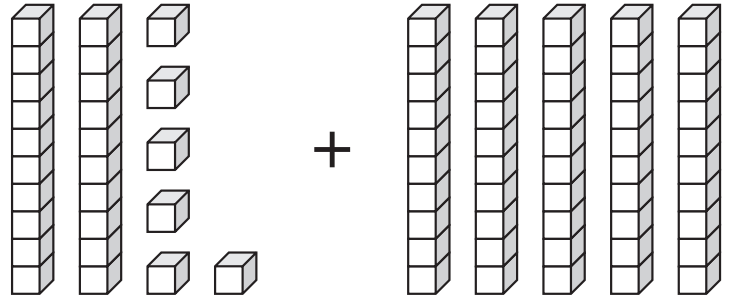
I have one curved surface and no corners.

What shape am I?

cone cube sphere



Add.



$$\square + \square = \square$$



Preview

Please log in to download the printable version of this worksheet.

Color the penny.



Name: _____

Math Buzz



Write **shorter** or **longer** to complete the sentences.

red 

yellow 

blue 

Solve.

$$\begin{array}{r} 11 \\ - \square \\ \hline 3 \end{array}$$



Preview


Please log in to download the printable version of this worksheet.

Subtract.

	Tens	Ones
	5	9
-		7
<hr/>		

Cece put 6 nickels, 5 dimes, and 9 pennies in her piggy bank. How many coins did she put in her piggy bank in all?

answer: _____ coins

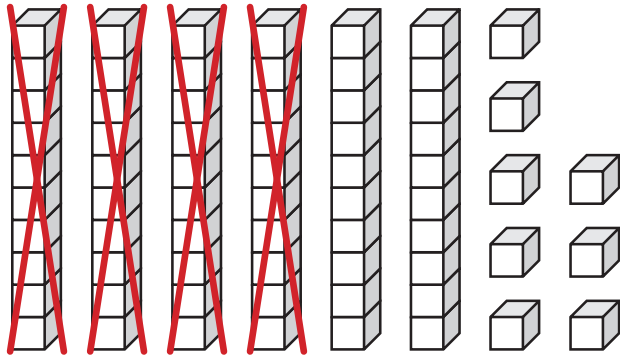




Name: _____

Math Buzz

Subtract.



$$\square - \square = \square$$


Fill in the missing numbers.

	10 less	
1 less	17	1 more
	10 more	

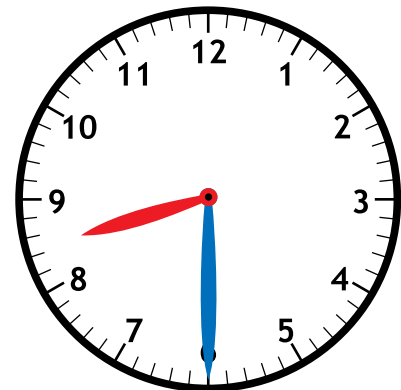
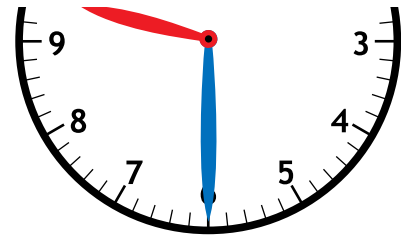


Preview

Please log in to download the printable version of this worksheet.



There are _____ equal halves.





Name: _____


Math Buzz

Add.

	Tens	Ones
	6	2
+		5
<hr/>		


Add.

$$9 + 4 + 10 = \underline{\quad}$$

Color the **nickel**.

Preview

Please log in to download
the printable version of this worksheet.



Stars	
Hawks	

Goals Scored

Stars	
Hawks	

Each ○ = 1 goal



Write the fact family for the numbers in the box.

8	9	17
---	---	----

$8 + 9 = 17$
 $9 + 8 = 17$
 $17 - 8 = 9$
 $17 - 9 = 8$

What time is shown on the clock?

4:30 3:30

Add.

Tens	Ones
4	6
+	3
4	9

Gia and Pax rode their bikes to the park. Each bike has 2 wheels. How many wheels are there total?

$2 + 2 = 4$

answer: 4 wheels

I have one curved surface and no corners. What shape am I?

cone cube sphere

Add.

$26 + 50 = 76$

Compare using < or >.

39 < 63

Color the penny.



Preview

Please log in to download the printable version of this worksheet.

than the blue pencil.

answer: 20 coins

Subtract.

$68 - 40 = 28$

Fill in the missing numbers.

	10 less 7	
1 less 16	17	1 more 18
	10 more 27	

Draw a line to show the pie can be cut into equal halves.

There are 2 equal halves.
Answers may vary.

Which clock shows 9:30?

Add.

Tens	Ones
6	2
+	5
6	7

Add.

$9 + 4 + 10 = 23$

Color the nickel.

The tally chart shows how many goals the Stars and Hawks scored in the game. Use the tally chart to complete the picture graph.

Goals Scored	
Stars	
Hawks	

Goals Scored	
Stars	○ ○ ○ ○ ○ ○ ○ ○ ○ ○
Hawks	○ ○ ○

Each ○ = 1 goal