

Name: \_\_\_\_\_



## Math Buzz


Solve each side and compare using  $<$ ,  $>$ , or  $=$ .

$$7 + 7 \bigcirc 5 + 9$$

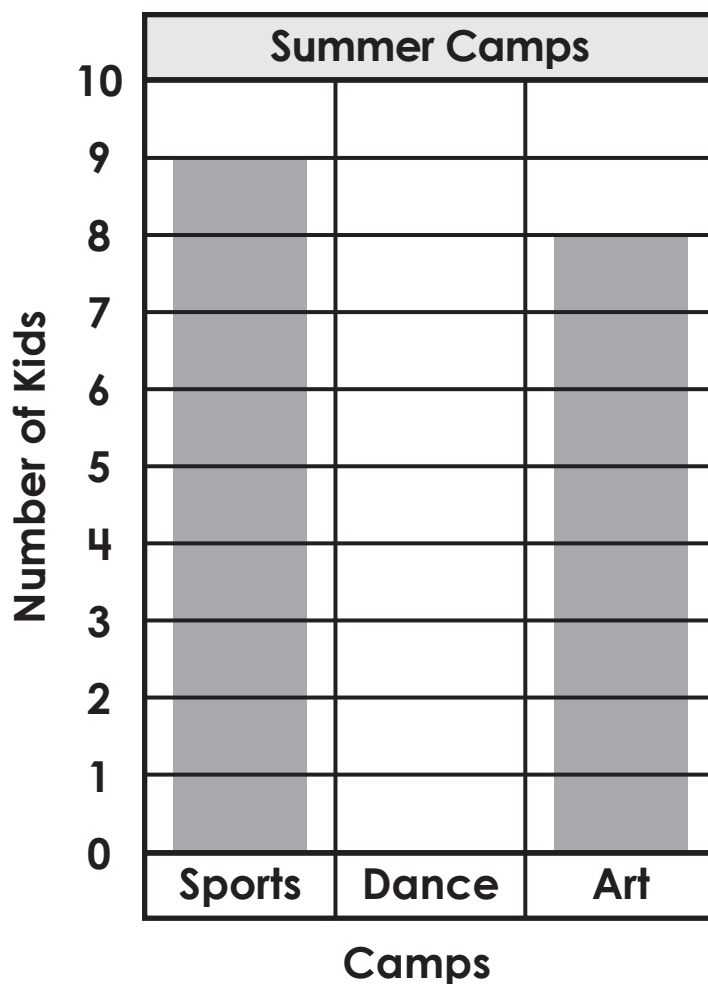
Subtract.

$$\begin{array}{r} 68 \\ - 7 \\ \hline \end{array}$$

Draw **pennies** to show how much the baseball costs.




The graph below shows which summer camps kids signed up to attend.



There were 4 fewer kids who attended dance camp than sports camp. Complete the graph to show how many kids attended dance camp.


How many kids went to summer camps in all? \_\_\_\_\_



Name: \_\_\_\_\_

## Math Buzz

Draw a line to make equal halves. Color one half.



Add.

$$\begin{array}{r} 71 \\ + 8 \\ \hline \end{array}$$

Draw lines to make equal fourths. Color one fourth.

Draw 9 triangles.  
Circle groups of two.



# Preview

Please log in to download the printable version of this worksheet.

Fill in the missing numbers.

	10 less	
1 less	109	1 more
	10 more	

Are there any left over?

\_\_\_\_\_

Is 9 even or odd?

\_\_\_\_\_

Name: \_\_\_\_\_



## Math Buzz


Draw **nickels** to show how much the teddy bear costs.



## Preview


Please log in to download  
the printable version of this worksheet.

There are 23 students in Mrs. Vasko's class.  
6 students from next door came over for  
reading groups. How many students are  
there now?



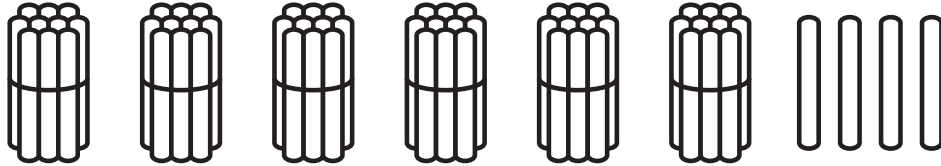
answer: \_\_\_\_\_ students

Name: \_\_\_\_\_



# Math Buzz

Count the sticks and fill in the missing numbers.



1 more is \_\_\_\_\_.

10 more is \_\_\_\_\_.

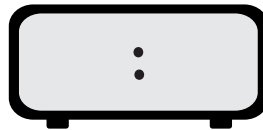
1 less is \_\_\_\_\_.

10 less is \_\_\_\_\_.



# Preview

Please log in to download the printable version of this worksheet.



Add.

$$90 + 5 = \underline{\hspace{2cm}}$$

Are there any left over?

\_\_\_\_\_

Is 6 even or odd?

\_\_\_\_\_

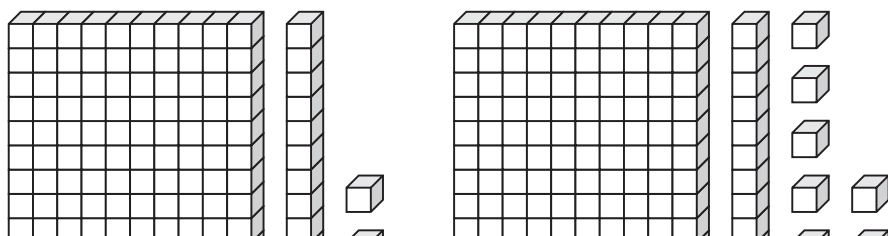
Name: \_\_\_\_\_

# Math Buzz

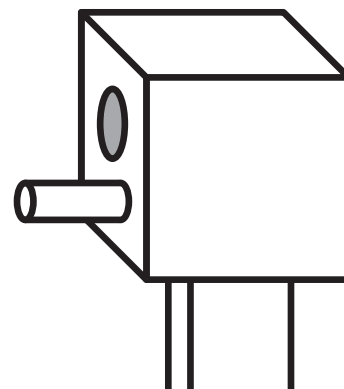
Solve.

Find the difference between 54 and 1. \_\_\_\_\_

Compare.




Circle the shapes used to make the birdhouse.



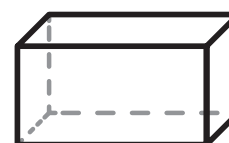
# Preview

Please log in to download the printable version of this worksheet.

Draw circles to show how much the doll costs.



40¢





Solve each side and compare using <, >, or =.

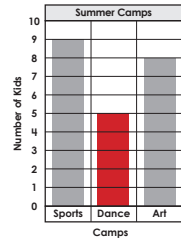
$$7 + 7 = 5 + 9$$

**14**                      **14**

Subtract.

$$\begin{array}{r} 68 \\ - 7 \\ \hline 61 \end{array}$$

Draw pennies to show how much the baseball costs.



How many kids went to summer camps in all? **22**

Draw a line to make equal halves. Color one half.



Draw lines to make equal fourths. Color one fourth.



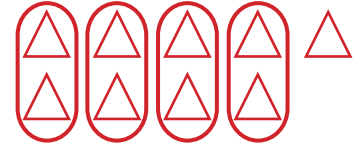
Add.

$$\begin{array}{r} 71 \\ + 8 \\ \hline 79 \end{array}$$

Fill in the missing numbers.

	10 less	
	<b>99</b>	
1 less	109	1 more
<b>108</b>		<b>110</b>
	10 more	
	<b>119</b>	

Draw 9 triangles. Circle groups of two.



Are there any left over? **yes**

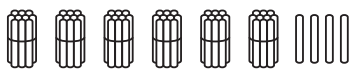


# Preview

Please log in to download the printable version of this worksheet.

Answer . . . . . students

Count the sticks and fill in the missing numbers.



1 more is **65**.  
1 less is **63**.  
10 more is **74**.  
10 less is **54**.

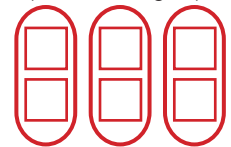
Fill in the times shown on the clocks.



Add.

$$90 + 5 = \underline{95}$$

Draw 6 squares. Circle groups of two.



Are there any left over? **no**

Is 6 even or odd? **even**

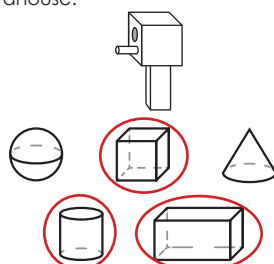
Answers may vary.

Solve.

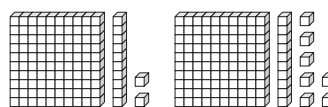
Find the difference between 54 and 1. **53**

$$54 - 1 = 53$$

Circle the shapes used to make the birdhouse.




Compare.



**112** is less than **117**  
**112 < 117**

Draw dimes to show how much the doll costs.



**D D D D**  
**10¢ 20¢ 30¢ 40¢**