

Name: _____

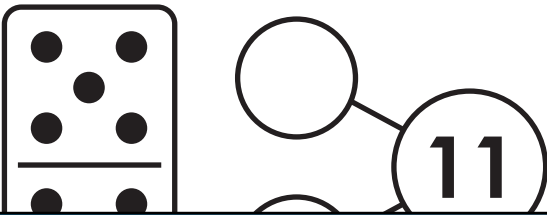


Math Buzz

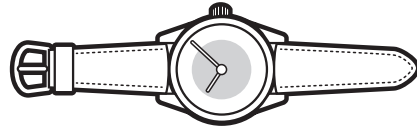
Count by ones.

97, _____, _____, _____, _____, _____, _____

Fill in the number bonds.

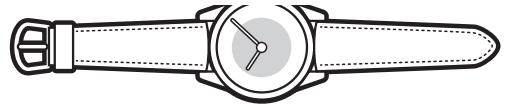


Number the watches from **shortest to longest**.

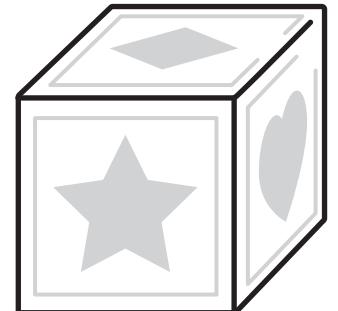

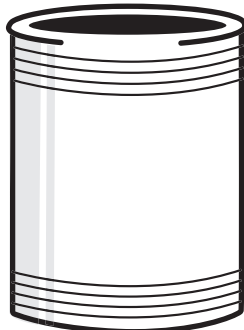


Preview


Please log in to download the printable version of this worksheet.



Color the .

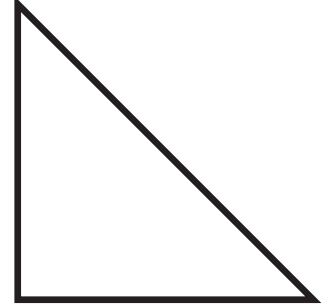




Name: _____



Math Buzz

Color the shape that **does not** have straight sides.



How many tens and ones make this number?

Circle the correct number sentence and solve.



Preview

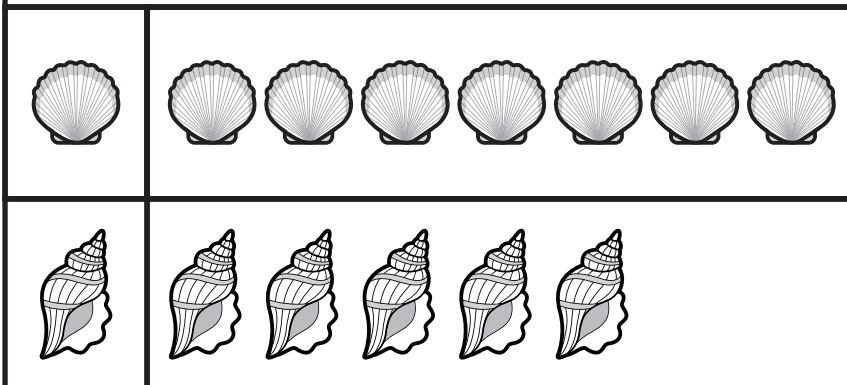
Please log in to download the printable version of this worksheet.

c. 1 ten 18 ones

d. 8 tens 1 one

$$7 - 3 = \underline{\quad}$$

Seashells




How many  ? _____

How many  ? _____

Which has **fewer**?

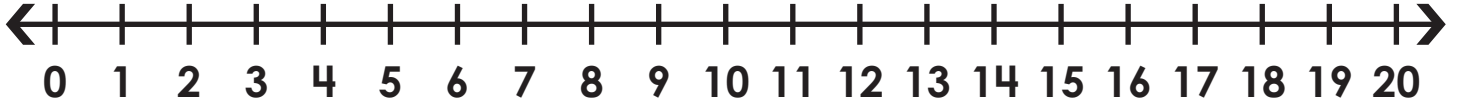


Name: _____



Math Buzz

Use the number line to find the **sums**.



$7 + 4 = \underline{\quad}$

$15 + 5 = \underline{\quad}$

$3 + 10 = \underline{\quad}$

Fill in the missing numbers.

1 less

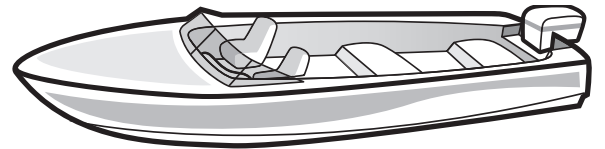
Number the boats from **longest** to **shortest**.



Preview

Please log in to download the printable version of this worksheet.


87



Trace the shapes. Write how many of each shape.




Name: _____




Math Buzz

Color the suns that show numbers greater than 50.




Draw tallies to show how many students picked .

Favorite Color		
	Tallies	Total
	 	8



Preview

Please log in to download the printable version of this worksheet.



Circle the correct number sentence and solve.

Oscar has 10 carrots. Jazmin has 2 carrots.

How many fewer carrots does Jazmin have than Oscar?

$$10 + 2 = \underline{\quad}$$

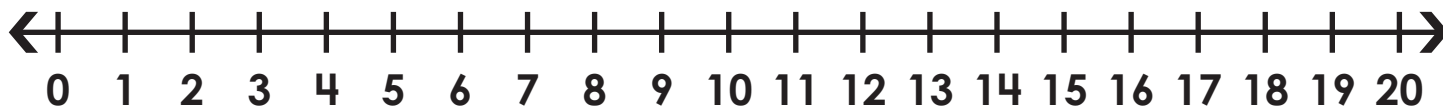
$$10 - 2 = \underline{\quad}$$

Name: _____




Math Buzz

Use the number line to find the **differences**.



$18 - 5 = \underline{\quad\quad}$ $9 - 6 = \underline{\quad\quad}$ $17 - 14 = \underline{\quad\quad}$



Color the .

Circle which weighs **less**.



Preview

Please log in to download
the printable version of this worksheet.



Count by tens.

10, _____, _____, _____, _____, _____, 60,

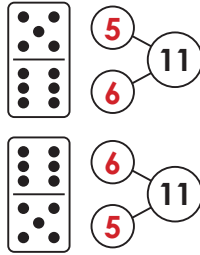
_____, _____, _____, _____, _____, 120



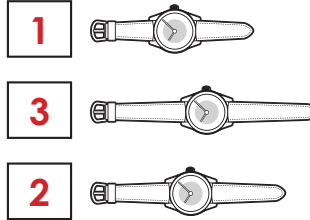
Count by ones.

97, 98, 99, 100,
101, 102

Fill in the number bonds.



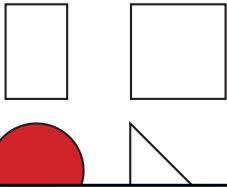
Number the watches from **shortest** to **longest**.



Color the .



Color the shape that **does not** have straight sides.



How many tens and ones make this number?

18

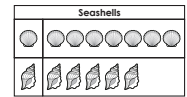
- a. 8 tens 8 ones
- b. 1 ten 8 ones**
- c. 1 ten 18 ones

Circle the correct number sentence and solve.

Leslie has 7 books. She bought 3 more at the book fair. How many books does Leslie have total?

$7 + 3 = 10$

$7 - 3 =$



How many ? 7

How many ? 5


Which has **fewer**?



Preview

Please log in to download the printable version of this worksheet.

Color the suns that show numbers **greater than 50**.



Draw tallies to show how many students picked .

Favorite Color		
	Tallies	Total
		8
		5

Color the shape that **does not** have curved sides.



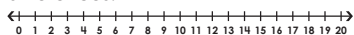
Circle the correct number sentence and solve.

Oscar has 10 carrots. Jazmin has 2 carrots. How many fewer carrots does Jazmin have than Oscar?

$10 + 2 =$

$10 - 2 = 8$

Use the number line to find the **differences**.




$18 - 5 =$ 13

$9 - 6 =$ 3

$17 - 14 =$ 3

Color the .



Circle which weighs **less**.



Count by tens.

10, 20, 30, 40,
50, 60, 70, 80,
90, 100, 110, 120