

Name: _____



Math Buzz

Count by ones.

108, _____, _____, _____, _____, _____,
 _____, _____, _____, _____

Color the circle to show whether the two sides are equal or not equal.

Write how many tens and ones make this number.



Preview

Please log in to download the printable version of this worksheet.

Draw a model to solve.

Raj had 2 apps on his tablet.

He added 8 more apps.

How many apps does he have total?

Raj has _____ apps total.



Name: _____




Math Buzz


Fill in the missing numbers.

1 less	
	17
	31
	45
	79

Match each shape to its number of straight sides.



4 straight sides



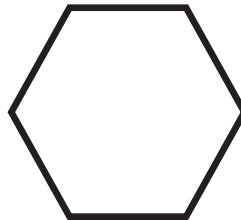
6 straight sides



Preview

Please log in to download the printable version of this worksheet.


$$\underline{\quad} = 8 + 3$$



3 straight sides

Fill in the missing number.

whole	part
13	7
	part



Name: _____



Math Buzz

Musical Instruments



Circle the shape that matches the object.



Preview

Please log in to download the printable version of this worksheet.

How many  ? _____

How many  ? _____

How many  ? _____

Which has the **most**?




$$\underline{\quad} = 14 - 2$$

Write the number.

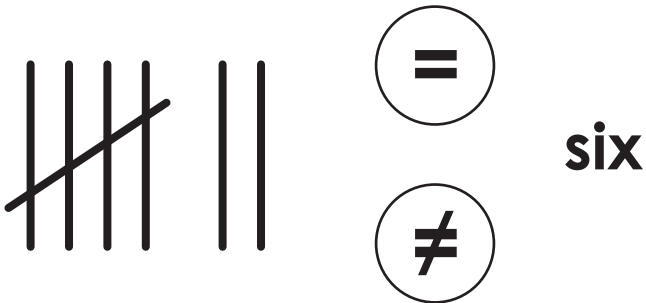
tens	ones
1	7

Name: _____



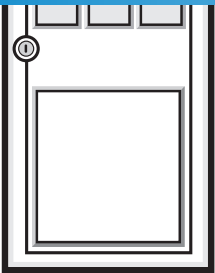
Math Buzz

Color the circle to show whether the two sides are equal or not equal.



Start on 7. Count by tens.

1	2	3	4	5	6	7	8	9	10
11	12	13	14	15	16	17	18	19	20
21	22	23	24	25	26	27	28	29	30
31	32	33	34	35	36	37	38	39	40
41	42	43	44	45	46	47	48	49	50
51	52	53	54	55	56	57	58	59	60
61	62	63	64	65	66	67	68	69	70



Preview

Please log in to download the printable version of this worksheet.

/ , _____ , _____ , _____ ,

_____ , _____ , _____ , _____ ,

_____ , _____ , _____ , _____

Draw a model to solve.

Ruby has 9 stickers. Omar has 2 stickers.
How many fewer stickers does Omar have than Ruby?


Omar has _____ fewer stickers than Ruby.

Name: _____



Math Buzz

Draw the shape that comes next.



Fill in the number bonds.
Write the addition sentences.

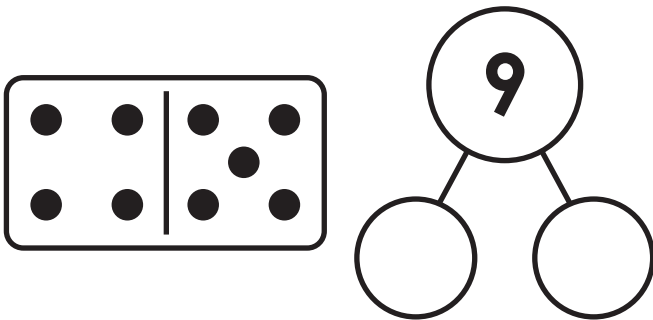
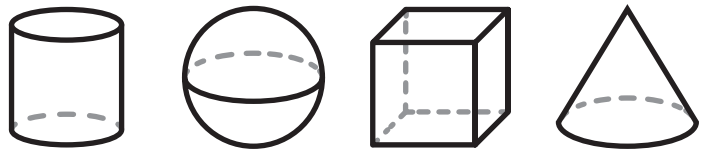


Circle the shape that matches
the object.



Preview

Please log in to download
the printable version of this worksheet.



$$\square + \square = 9$$

Fill in the missing number.

whole	part
18	part
	12



Count by ones.
108, **109**, **110**, **111**,
112, **113**, **114**, **115**, **116**

Color the circle to show whether the two sides are equal or not equal.

Write how many tens and ones make this number.

eleven	
tens	ones
1	1

Draw a model to solve.
Raj had 2 apps on his tablet. He added 8 more apps. How many apps does he have total?

2 + 8 = 10
Raj has **10** apps total.
Drawings may vary.

Fill in the missing numbers.


1 less	
16	17
30	31
44	45
78	79

Match each shape to its number of straight sides.

Add.
 $9 + 6 = \underline{15}$
 $\underline{11} = 8 + 3$

Fill in the missing number.

whole	part
13	7
	6



Preview

Please log in to download the printable version of this worksheet.

Color the circle to show whether the two sides are equal or not equal.

7, **17**, **27**, **37**,
47, **57**, **67**, **77**,
87, **97**, **107**, **117**

Draw a line that is **taller** than the door.

Answers may vary.

Draw a model to solve.
Ruby has 9 stickers. Omar has 2 stickers. How many fewer stickers does Omar have than Ruby?

9 - 2 = 7
Omar has **7** fewer stickers than Ruby.
Drawings may vary.

Draw the shape that comes next.

Fill in the number bonds. Write the addition sentences.

5 + **4** = 9 **4** + **5** = 9

Circle the shape that matches the object.

Fill in the missing number.

whole	part
18	6
	12