

Name: _____



Math Buzz

Start at 8. Count by tens.

8, 18, 28, _____, _____, _____, _____,

_____ , _____ , _____ , _____ , _____

Fill in the missing number.

whole	part
-------	------

Circle the shape that has equal parts.





Preview

Please log in to download the printable version of this worksheet.

Add.

$$\begin{array}{r} 7 \\ + 8 \\ \hline \end{array}$$

$$14 + 3 = \underline{\quad}$$



Name: _____



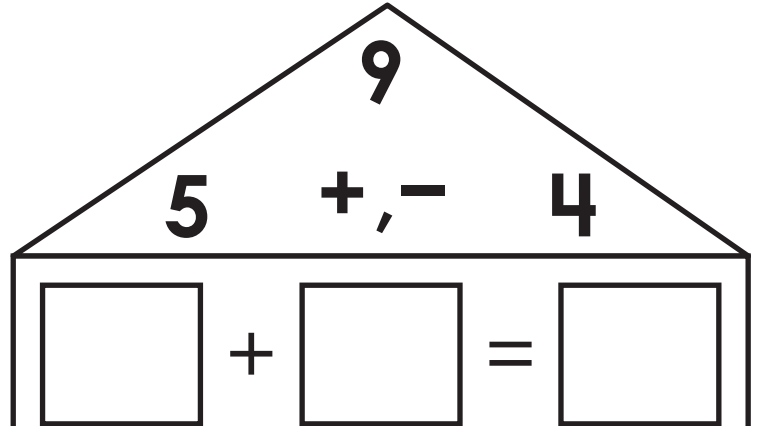
Math Buzz

Fill in the missing numbers.

1 less		1 more
	90	

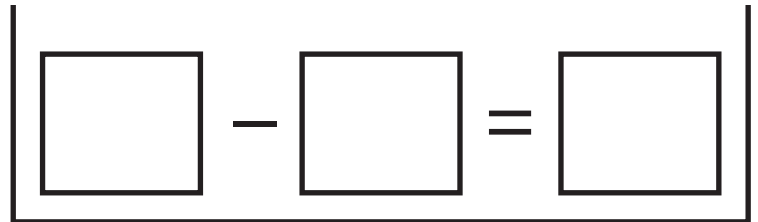
1 less		1 more
	116	

Write the fact family for the numbers in the house.




Preview

Please log in to download the printable version of this worksheet.



Color the **cone**.





Name: _____



Math Buzz

Fill in the days.

Sunday
Monday
Tuesday
Wednesday
Thursday
Friday
Saturday



Preview

Please log in to download the printable version of this worksheet.


7




3 + 6




Label each shape as **open** or **closed**.





Name: _____



Math Buzz

Compare the numbers using words.

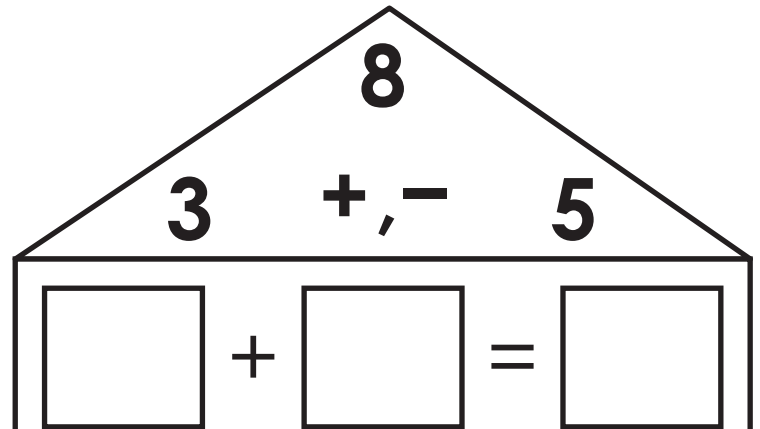
37 _____ 25

is greater than

is less than

Compare the numbers

Write the fact family for the numbers in the house.

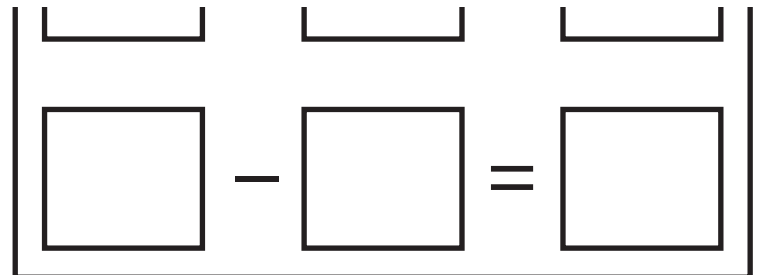


and ones.


Tens	Ones

Preview

Please log in to download the printable version of this worksheet.



Color the **cylinder**.




Name: _____



Math Buzz

Add.



$$\square + \square + \square = \square$$

Color the circle to show whether the

Label each shape as

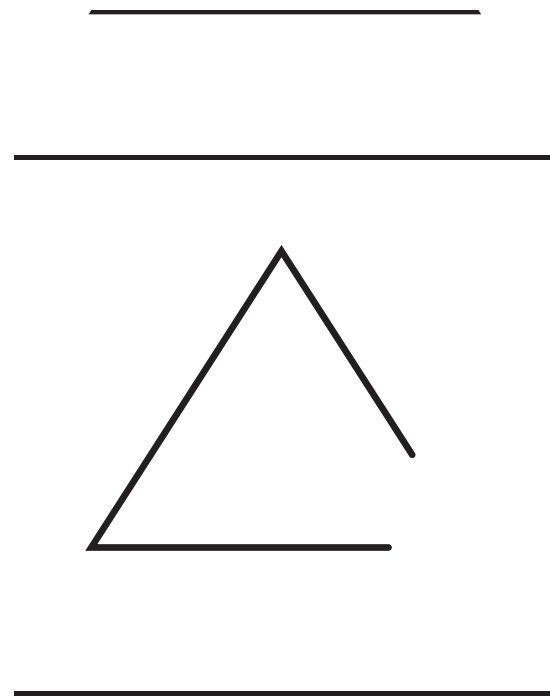


Preview

Please log in to download
the printable version of this worksheet.

Write how many tens and ones.

Tens	Ones





Start at 8. Count by tens.

8, 18, 28, 38, 48, 58, 68,
78, 88, 98, 108, 118

Fill in the missing number.

whole	part
17	14
	part 3

Add.

$$\begin{array}{r} 1 \\ 7 \\ + 8 \\ \hline 15 \end{array}$$

$14 + 3 = \underline{17}$

Circle the shape that has equal parts.



Fill in the missing numbers.

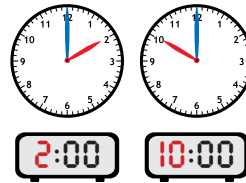
1 less		1 more
89	90	91

1 less		1 more
115	116	117

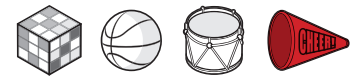
Write the fact family for the numbers in the house.

9		
5	+, -	4
5	+	4 = 9
4	+	5 = 9
9	-	4 = 5

Fill in the times shown on the clock.



Color the cone.



Answers may vary.

Preview

Please log in to download the printable version of this worksheet.

[closea](#)

Compare the numbers using words.

37 25

is greater than

is less than

Compare the numbers using < or >.

37 > 25

Write the fact family for the numbers in the house.

8		
3	+, -	5
3	+	5 = 8
5	+	3 = 8
8	-	3 = 5
8	-	5 = 3

Write how many tens and ones.

Tens	Ones
4	2

Color the cylinder.



Add.

$$\begin{array}{c} \text{6} + \text{2} + \text{5} = \text{13} \end{array}$$

Color the circle to show whether the two sides are equal or not equal.

$$6 - 2 \quad \begin{array}{c} \text{=} \\ \text{\neq} \end{array} \quad 4$$

Write how many tens and ones.

Tens	Ones
5	7

Label each shape as open or closed.

