

Name: _____



Math Buzz

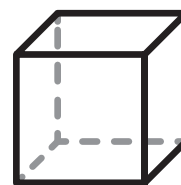


Fill in the missing number.

26, 27, _____

49, _____, 51

_____, 34, 35

Color the shape with **only flat surfaces**.






Color the shape with **only curved surfaces**.




Preview

Please log in to download the printable version of this worksheet.

Use the graph to answer the questions.

Vanilla	
Chocolate	
Strawberry	

Each  = 1 student


How many students chose chocolate?

_____.

Which had the least?

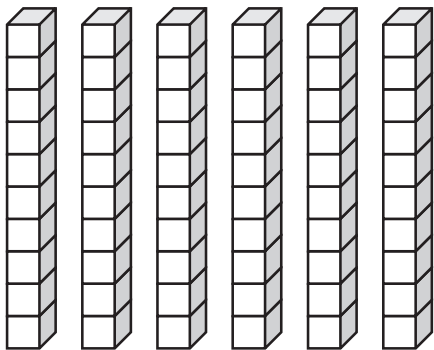
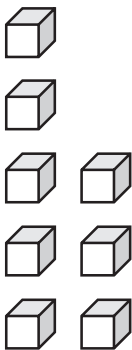
_____.

Name: _____



Math Buzz


Write how many tens and ones.

	
Tens	Ones



Preview

Please log in to download the printable version of this worksheet.



Add. Fill in = or \neq .


$3 + 7$ ○ $9 + 0$

- April
- May
- June
- July
- August
- September
- October
- November
- December

_____ .

Next month will be

_____ .

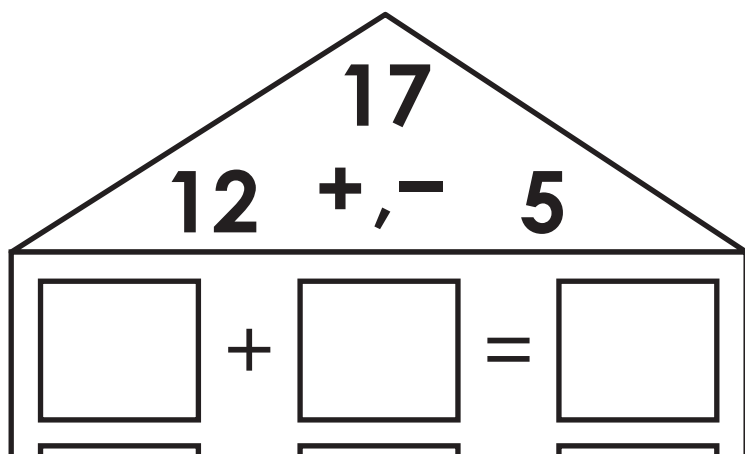




Name: _____

Math Buzz

Write the fact family for the numbers in the house.



Fill in the missing number.

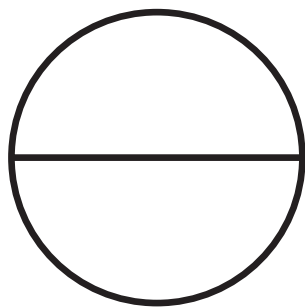
part 8	part
whole 13	




Preview

Please log in to download the printable version of this worksheet.


Write the number of equal parts.



_____ equal parts




_____ equal parts



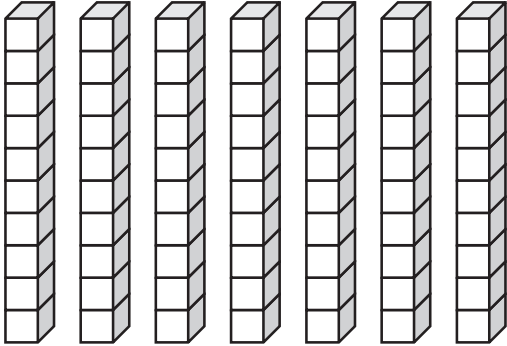
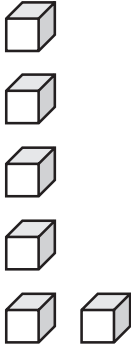
_____ equal parts

Name: _____



Math Buzz



Write how many tens and ones.

	
Tens	Ones



Preview

Please log in to download the printable version of this worksheet.



Add. Fill in = or \neq .

$$9 - 7 \quad \bigcirc \quad 6 - 4$$

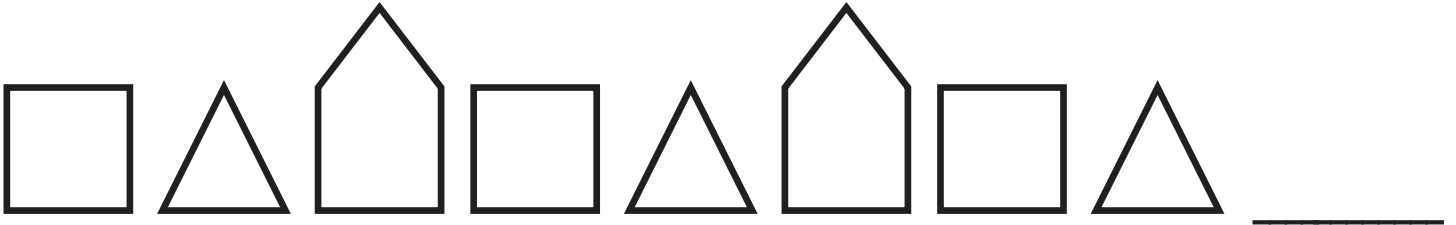
answer: _____



Name: _____

Math Buzz

Draw the shape that comes next.



Compare using $<$ or $>$.

12  15

Solve.



Preview

Please log in to download the printable version of this worksheet.



$$\begin{array}{r} 19 \\ - 12 \\ \hline \end{array}$$

answer: _____ squares



Fill in the missing number.

26, 27, 28

49, 50, 51

33, 34, 35

Color the shape with **only flat surfaces**.



Color the shape with **only curved surfaces**.



Solve.

$$3 + 11 = \underline{14}$$

$$14 - 3 = \underline{11}$$

Use the graph to answer the questions.

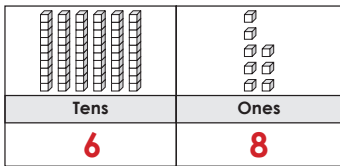


Each = 1 student

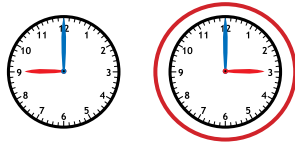
How many students chose chocolate? 8.

Which had the least? Vanilla.

Write how many tens and ones.



Which clock shows 3:00?



Add. Fill in = or \neq .

$$3 + 7 \quad \neq \quad 9 + 0$$

10 9

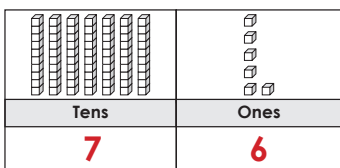
January	Fill in the months.
February	This month is
March	<u>October</u>
April	Next month will be
May	<u>November</u>
June	
July	
August	
September	
October	



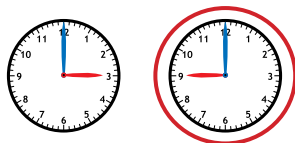
Preview

Please log in to download the printable version of this worksheet.

Write how many tens and ones.



Which clock shows 9:00?




Add. Fill in = or \neq .

$$9 - 7 \quad = \quad 6 - 4$$

2 2

Nora rolled three dice. She added the numbers she rolled. What is her total?



$$3 + 2 + 6 = 11$$

answer: 11

Draw the shape that comes next.



Compare using $<$ or $>$.

$$12 \quad < \quad 15$$

How many squares long is the shoe?



answer: 7 squares

Solve.

$$\begin{array}{r} 12 \\ + 7 \\ \hline 19 \end{array} \qquad \begin{array}{r} 19 \\ - 12 \\ \hline 7 \end{array}$$