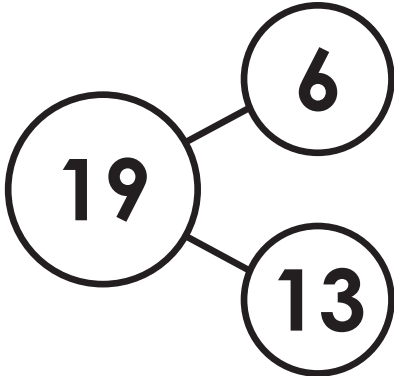




Name: _____

Math Buzz

Write the fact family for the numbers in the number bond.



Write how many tens and ones make this number.

43	
tens	ones



Preview

Please log in to download the printable version of this worksheet.

$$\underline{\quad} - \underline{\quad} = \underline{\quad}$$


$$\underline{\quad} - \underline{\quad} = \underline{\quad}$$



answer: _____ baskets

Fill in the missing shape.

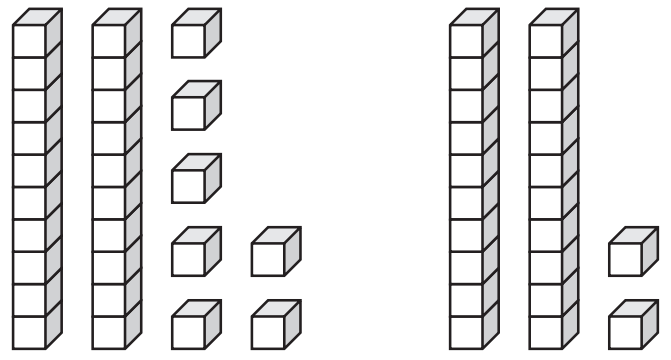




Name: _____

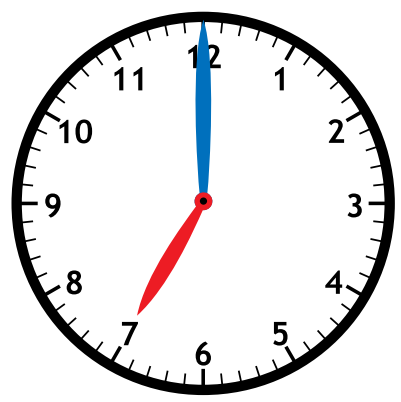
Math Buzz

Compare.



_____ is greater than _____

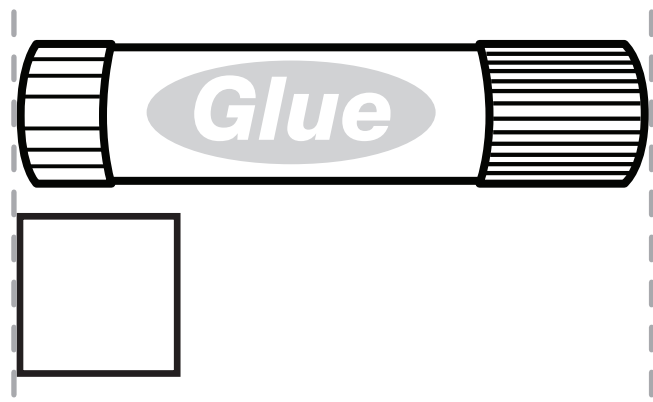
What time is shown on the clock?



Preview

Please log in to download the printable version of this worksheet.

About how many squares long is the glue stick?



4 squares

1 square

10 squares

Name: _____



Math Buzz

Kimi has 11 pieces of candy.
Bree has 4 fewer pieces.
How many pieces of candy does Bree have?

11	
4	?

Write how many tens and ones make this number.

29	
tens	ones




Preview

Please log in to download the printable version of this worksheet.

Color today's date.

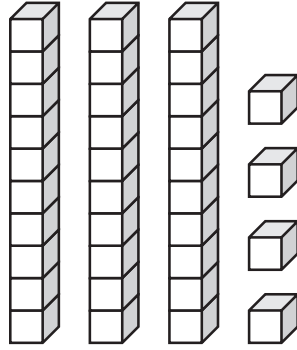
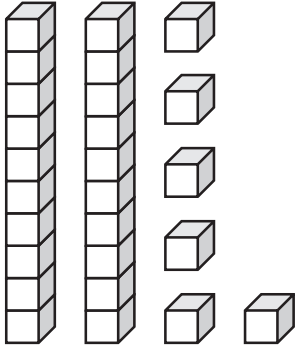
1	2	3	4	5	6	7
8	9	10	11	12	13	14
15	16	17	18	19	20	21
22	23	24	25	26	27	28
29	30	31				

Name: _____



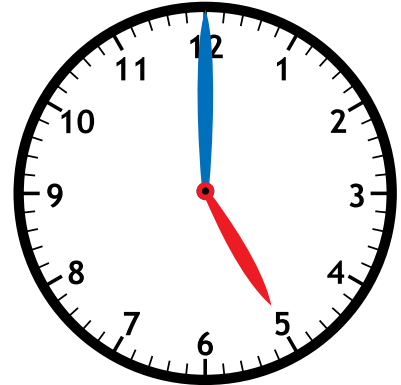
Math Buzz

Compare.



_____ is less than _____

What time is shown on the clock?






Preview

Please log in to download the printable version of this worksheet.

$$\begin{array}{r} 11 \\ + 7 \\ \hline \end{array}$$

$$\begin{array}{r} 18 \\ - 11 \\ \hline \end{array}$$

Penny 		5
Nickel 		2
Dime 		3


How many more dimes than nickels does Ty have? _____

Name: _____



Math Buzz

Piper has 1 dog, 6 fish and 3 cats. How many pets does Piper have altogether?



answer: _____ pets




Preview

Please log in to download the printable version of this worksheet.


41 | 42 | 43 | 44 | 45 | 46 | 47 | 48 | 49 | 50

10 more

Circle the objects that have **only flat surfaces**.



Draw a line to show two equal parts.





Write the fact family for the numbers in the number bond.

$$\begin{aligned} 13 + 6 &= 19 \\ 6 + 13 &= 19 \\ 19 - 6 &= 13 \\ 19 - 13 &= 6 \end{aligned}$$

Write how many tens and ones make this number.

43	
tens	ones
4	3

Jade made 7 baskets. Zion made 5 baskets. How many baskets did they make in all?

?	
7	5

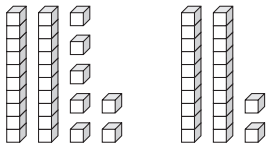
$$7 + 5 = 12$$

answer: 12 baskets

Fill in the missing shape.



Compare.



27 is greater than 22

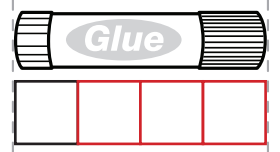
What time is shown on the clock?



Solve.

$$\begin{aligned} 6 + 8 &= 14 \\ 14 - 6 &= 8 \end{aligned}$$

About how many squares long is the glue stick?



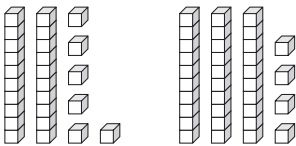
Preview

Please log in to download the printable version of this worksheet.

answer: 1 pieces of candy

Answers may vary.

Compare.



26 is less than 34

26 < 34

What time is shown on the clock?



Solve.

$$\begin{aligned} 11 \\ + 7 \\ \hline 18 \end{aligned} \qquad \begin{aligned} 18 \\ - 11 \\ \hline 7 \end{aligned}$$

Fill in the tallies to complete the chart.

Ty's Coins		Total
Penny		5
Nickel		2
Dime		3

How many more dimes than nickels does Ty have? 1

Piper has 1 dog, 6 fish and 3 cats. How many pets does Piper have altogether?



$$1 + 6 + 3 = 10$$

answer: 10 pets

Fill in the missing numbers.

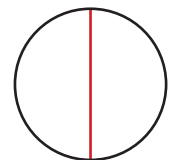
21	22	23	24	25	26	27	28	29	30
31	32	33	34	35	36	37	38	39	40
41	42	43	44	45	46	47	48	49	50

10 less
22
32
10 more
42

Circle the objects that have only flat surfaces.



Draw a line to show two equal parts.



Answers may vary.