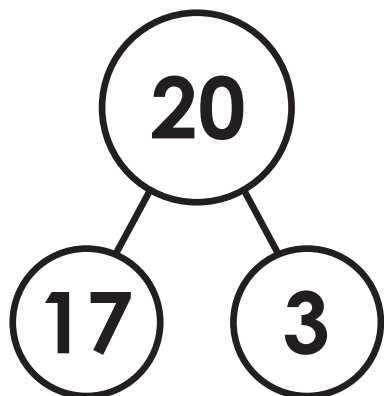


Name: \_\_\_\_\_



## Math Buzz

Write the fact family for the numbers in the number bond.



Write how many tens and ones make this number.

98	
tens	ones



## Preview

Please log in to download the printable version of this worksheet.

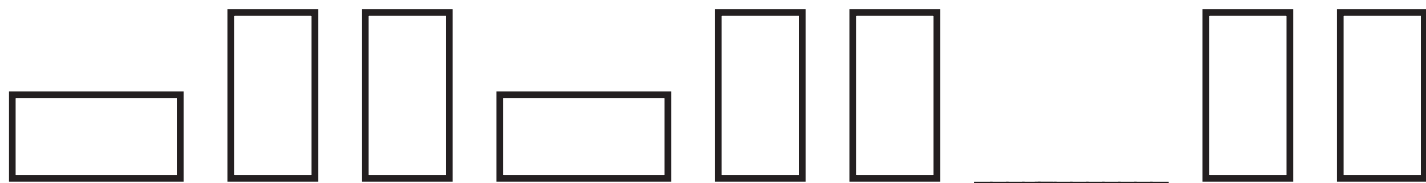
$$\underline{\quad} - \underline{\quad} = \underline{\quad}$$

$$\underline{\quad} - \underline{\quad} = \underline{\quad}$$


?

answer: \_\_\_\_\_ balloons

Fill in the missing shape.


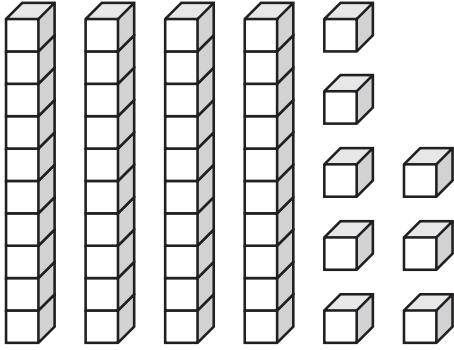


Name: \_\_\_\_\_



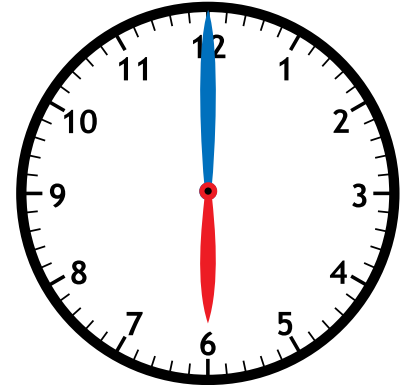
# Math Buzz

Compare.



\_\_\_\_\_ is greater than \_\_\_\_\_

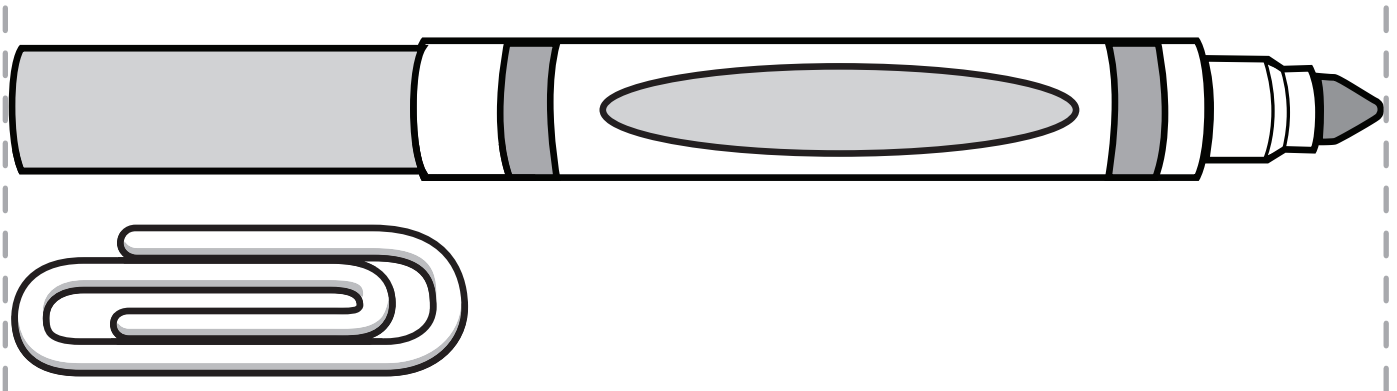
What time is shown on the clock?



# Preview

Please log in to download the printable version of this worksheet.

About how many paperclips long is the marker?



1 paperclip

8 paperclips

3 paperclips

Name: \_\_\_\_\_



## Math Buzz

Lucy had 12 blueberries.  
She used 8 to make a smoothie.  
How many blueberries does  
Lucy have left?

?	8
12	

Write how many tens and  
ones make this number.

76	
tens	ones



# Preview

Please log in to download  
the printable version of this worksheet.

Color today's date.

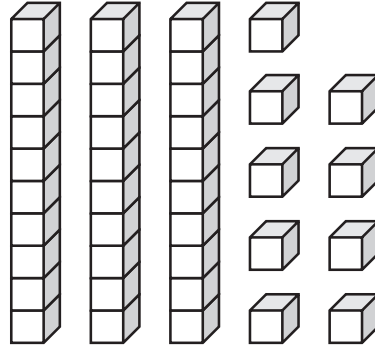
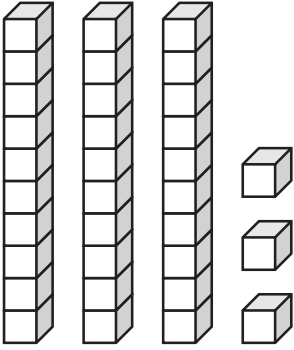
1	2	3	4	5	6	7
8	9	10	11	12	13	14
15	16	17	18	19	20	21
22	23	24	25	26	27	28
29	30	31				

Name: \_\_\_\_\_



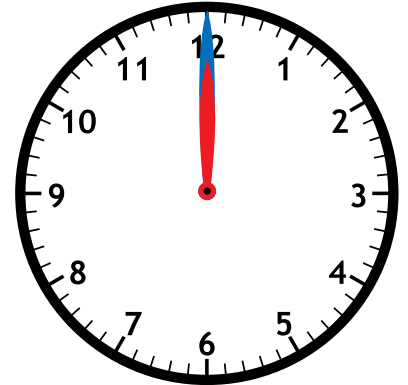
# Math Buzz

Compare.



\_\_\_\_\_ is less than \_\_\_\_\_

What time is shown on the clock?



# Preview

Please log in to download the printable version of this worksheet.

$$\begin{array}{r} 10 \\ + 3 \\ \hline \end{array}$$

$$\begin{array}{r} 13 \\ - 10 \\ \hline \end{array}$$

Name	Total	Tallies
Lindsay	5	
Daniel	8	
Nick	4	


How many more laps did Daniel run than Nick? \_\_\_\_\_

Name: \_\_\_\_\_



# Math Buzz

Riley has 5 books about cars, 2 books about animals, and 4 books about sports. How many books does Riley have in all?



answer: \_\_\_\_\_ books



# Preview

Please log in to download the printable version of this worksheet.


51	52	53	54	55	56	57	58	59	60
----	----	----	----	----	----	----	----	----	----

10 more
---------

Circle the objects that have **only curved surfaces**.



Draw a line to show four equal parts.





Write the fact family for the numbers in the number bond.

$$\begin{aligned} 17 + 3 &= 20 \\ 3 + 17 &= 20 \\ 20 - 3 &= 17 \\ 20 - 17 &= 3 \end{aligned}$$

Write how many tens and ones make this number.

98	
tens	ones
9	8

Liam got 6 red balloons and 6 blue balloons for his party. What is the total number of balloons Liam got?

6	6
?	

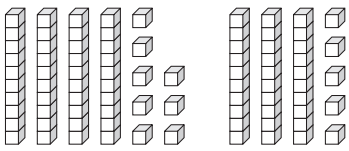
$$6 + 6 = 12$$

answer: 12 balloons

Fill in the missing shape.



Compare.



48 is greater than 35

What time is shown on the clock?

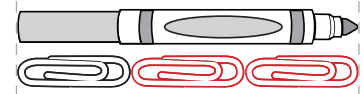


Solve.

$$15 + 2 = \underline{17}$$

$$17 - 15 = \underline{2}$$

About how many paperclips long is the marker?



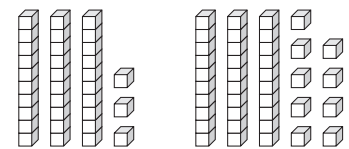
answer: 4 blueberries

# Preview

Please log in to download the printable version of this worksheet.

Answers may vary.

Compare.



33 is less than 39

33 < 39

What time is shown on the clock?



Solve.

$$\begin{array}{r} 10 \\ + 3 \\ \hline 13 \end{array}$$

$$\begin{array}{r} 13 \\ - 10 \\ \hline 3 \end{array}$$

Fill in the tallies to complete the chart.

Laps Ran		
Name	Total	Tallies
Lindsay	5	
Daniel	8	
Nick	4	

How many more laps did Daniel run than Nick? 4

Riley has 5 books about cars, 2 books about animals, and 4 books about sports. How many books does Riley have in all?



$$5 + 2 + 4 = 11$$

answer: 11 books

Fill in the missing numbers.

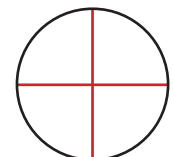
31	32	33	34	35	36	37	38	39	40
41	42	43	44	45	46	47	48	49	50
51	52	53	54	55	56	57	58	59	60

10 less
<b>38</b>
48
10 more
<b>58</b>

Circle the objects that have only curved surfaces.



Draw a line to show four equal parts.



Answers may vary.