


Name: _____



Math Buzz

The turtle is about 12 centimeters long. Circle the best estimate for the length of the fish.



Zariyah is making a quadrilateral out of craft sticks. She uses one craft stick for each side of the shape. How many craft sticks does she need?

answer: _____ **craft sticks**

There are 14 hamsters and 12 goldfish at the Pet Emporium. How many pets are there in total?



b. 9 centimeters

c. 18 centimeters

Preview

Please log in to download the printable version of this worksheet.

Is the total number of pets **even** or **odd**?

Match the numbers.

610

six hundred one

601

1 hundred 6 tens


160

600 + 10

Add.


$$\begin{array}{r} 436 \\ + 7 \\ \hline \end{array}$$

$$\begin{array}{r} 275 \\ + 41 \\ \hline \end{array}$$



Name: _____

Math Buzz



Find the total value of the money shown.



answer: _____



Preview

Please log in to download the printable version of this worksheet.

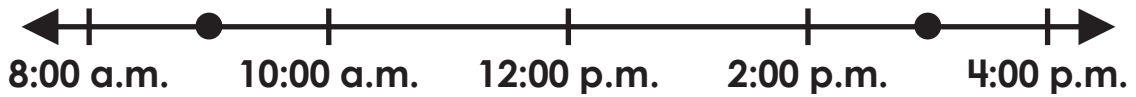
243	253
-----	-----

Rule: Add 10



total: _____ squares

$$\begin{array}{r} 832 \\ - 7 \\ \hline \end{array}$$



At about what times are the dots placed on the number line?
 _____ and _____


Write a label for each dot that names something you do during that part of the day.

Name: _____



Math Buzz

Calvin collected seashells at the beach. He arranged them into 3 rows, and put 2 in each row. Complete the number sentence to find how many shells Calvin collected in all.



Add.

$$436 + 8 = \underline{\hspace{2cm}}$$

$$723 + 45 = \underline{\hspace{2cm}}$$

Which object has 4 faces?



Preview

Please log in to download the printable version of this worksheet.

$$\underline{\hspace{1cm}} + \underline{\hspace{1cm}} + \underline{\hspace{1cm}} = \underline{\hspace{1cm}}$$

answer: _____ shells

Match each phrase to the correct digital clocks.



quarter past 7



45 minutes after 7



7 o'clock




half past 7

Complete the table.

In	868	752	390
Out		742	

Rule: Subtract 10

Name: _____



Math Buzz

Which number sentence is true?

a. $297 > 279$

b. $297 < 279$



c. $297 = 279$

Subtract.

$$\begin{array}{r} 529 \\ - 6 \\ \hline \end{array}$$

$$\begin{array}{r} 375 \\ - 6 \\ \hline \end{array}$$

Blake has two square brownies. She wants to cut each one into quarters. Show two different ways she can cut her brownies into quarters.



Add.

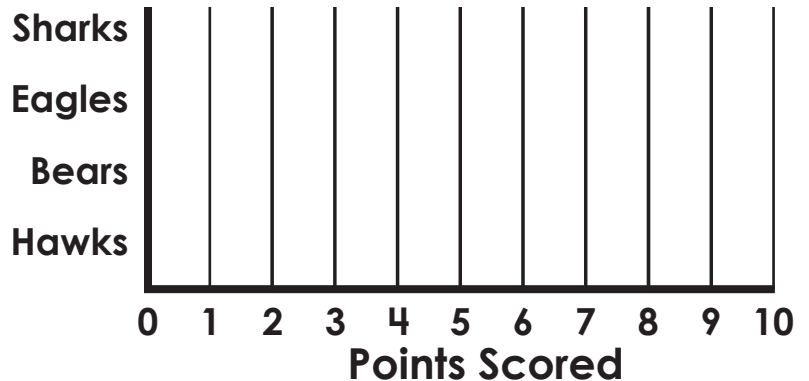


Preview

Please log in to download the printable version of this worksheet.

Teams	Points Scored
Sharks	+++ II
Eagles	+++ +++
Bears	+++
Hawks	+++ III

Teams



How many points did the Sharks and the Hawks score together? _____

How many more points did the Eagles score than the Bears? _____

How many points did the teams score all together? _____

Name: _____



Math Buzz

Subtract.

$$85 - 7 = \underline{\hspace{2cm}}$$

$$64 - 41 = \underline{\hspace{2cm}}$$

Solve.

Add 7 and 534. _____


Find the sum of 802 and 6. _____

Kairi had 15 stickers. Her brother gave her 9 more. She put 11 stickers



Preview

Please log in to download the printable version of this worksheet.



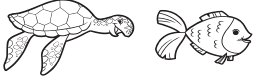
answer: _____ stickers

Order the numbers from **greatest to least**.

16 96 49 24 71



The turtle is about 12 centimeters long. Circle the best estimate for the length of the fish.



- a. 4 centimeters
- b. 9 centimeters**
- c. 18 centimeters

Zariyah is making a quadrilateral out of craft sticks. She uses one craft stick for each side of the shape. How many craft sticks does she need?

answer: 4 craft sticks

There are 14 hamsters and 12 goldfish at the Pet Emporium. How many pets are there in all?

$$14 + 12 = 26$$

answer: 26 pets

Is the total number of pets **even** or **odd**?
even

Match the numbers.

610 ~~↗~~ six hundred one
601 ~~↘~~ 1 hundred 6 tens
160 ~~↙~~ 600 + 10

Add.

$$\begin{array}{r} 436 \\ + 7 \\ \hline 443 \end{array} \quad \begin{array}{r} 275 \\ + 41 \\ \hline 316 \end{array}$$

Find the total value of the money shown.



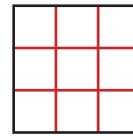
Subtract.

$$\begin{array}{r} 429 \\ - 5 \\ \hline 424 \end{array} \quad \begin{array}{r} 832 \\ - 7 \\ \hline 825 \end{array}$$

Complete the table.

In	Out
303	313
657	667
243	253

Draw lines to show 3 rows and 3 columns.



total: 9 squares



At about what times are the dots placed on the number line?

9:00 a.m. and **3:00 p.m.**

Write a label for each dot that names something you do during that part of the day.



Preview

Please log in to download the printable version of this worksheet.

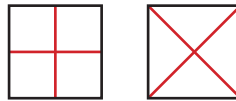
Which number sentence is true?

- a. 297 > 279**
- b. 297 < 279
- c. 297 = 279

Subtract.

$$\begin{array}{r} 529 \\ - 6 \\ \hline 523 \end{array} \quad \begin{array}{r} 375 \\ - 6 \\ \hline 369 \end{array}$$

Blake has two square brownies. She wants to cut each one into quarters. Show two different ways she can cut her brownies into quarters.



Answers may vary.

Add.

$$14 + 43 + 26 = \underline{83}$$



How many points did the Sharks and the Hawks score together?

15

How many more points did the Eagles score than the Bears?

5

How many points did the teams score all together? **30**

Subtract.

$$85 - 7 = \underline{78}$$

$$64 - 41 = \underline{23}$$

$$70 - 25 = \underline{45}$$

Solve.

Add 7 and 534. **541**

Find the sum of 802 and 6. **808**

Draw a shape that has four angles.



Answers may vary.

Kairi had 15 stickers. Her brother gave her 9 more. She put 11 stickers on her water bottle. How many does Kairi have left?

$$15 + 9 = 24$$

$$24 - 11 = 13$$

answer: 13 stickers

Order the numbers from **greatest to least**.

16 96 49 24 71

96 71 49 24 16