

Name: \_\_\_\_\_




# Math Buzz

Count back by hundreds.

950, 850, \_\_\_\_\_, \_\_\_\_\_, \_\_\_\_\_, 450, \_\_\_\_\_, \_\_\_\_\_

Maritza got a 98 on her math test this week. Last week, she scored 6 points less. What was Maritza's score on her math test last week?

6	?
98	



## Preview

Please log in to download the printable version of this worksheet.

86 \_\_\_\_\_

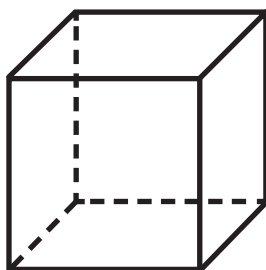
62 \_\_\_\_\_

$$\begin{array}{r} 84 \\ + 7 \\ \hline \end{array}$$


$$\begin{array}{r} 62 \\ + 8 \\ \hline \end{array}$$

$$\begin{array}{r} 36 \\ + 9 \\ \hline \end{array}$$


Which is the face of a cube?




a.




b.



c.



Name: \_\_\_\_\_



## Math Buzz

Seventy-three families came to the Driftwood School Fall Carnival. Choose two ways that show the number **seventy-three**.

- a.  $70 + 3$
- b. 37
- c. 73

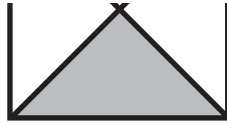
Write the ordinal number for each word.

Ordinal Word	Ordinal Number
sixth	6th
seventh	
eighth	
ninth	



# Preview

Please log in to download the printable version of this worksheet.



Fill in the missing numbers.

**three hundred forty-one**

\_\_\_\_\_ hundreds \_\_\_\_\_ tens \_\_\_\_\_ one

\_\_\_\_\_ + \_\_\_\_\_ + \_\_\_\_\_

\_\_\_\_\_

Subtract.

$$\begin{array}{r} 80 \\ - 6 \\ \hline \end{array}$$

$$\begin{array}{r} 50 \\ - 9 \\ \hline \end{array}$$

Name: \_\_\_\_\_



# Math Buzz

Fill in the numbers 1, 2, and 3 to order the objects from shortest to longest.









# Preview

Please log in to download the printable version of this worksheet.

Add.

$$\begin{array}{r} 87 \\ + 8 \\ \hline \end{array}$$

$$\begin{array}{r} 55 \\ + 6 \\ \hline \end{array}$$



Jamal still needs \_\_\_\_\_.


Fill in the missing shape.



\_\_\_\_\_



Name: \_\_\_\_\_



# Math Buzz


Fill in the missing numbers.

**seven hundred ninety-two**

\_\_\_\_\_ hundreds \_\_\_\_\_ tens \_\_\_\_\_ ones

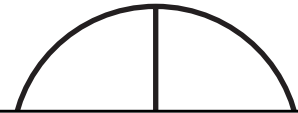
\_\_\_\_\_ + \_\_\_\_\_ + \_\_\_\_\_  
 \_\_\_\_\_

Shade one fourth of each shape.



Circle even or odd.

Subtract.



# Preview

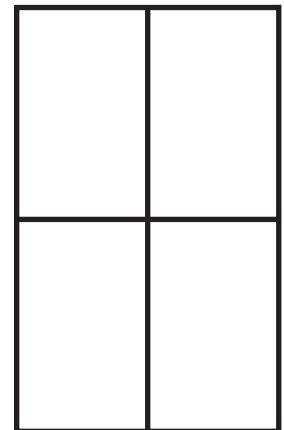

Please log in to download  
the printable version of this worksheet.

There are 23 students in Ms. Hill's class.  
There are 26 students in Mr. Johnson's class.  
How many students are in both classes combined?

?	
23	26

\_\_\_\_\_ + \_\_\_\_\_ = \_\_\_\_\_

answer: \_\_\_\_\_ students



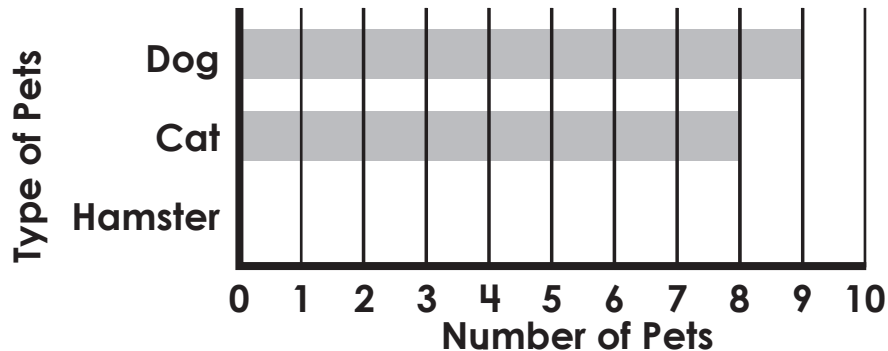
Name: \_\_\_\_\_



# Math Buzz

Complete the bar graph and answer the questions.

Pets	Number of Pets
Dog	
Cat	
Hamster	



How many students have dogs? \_\_\_\_\_



## Preview

Please log in to download the printable version of this worksheet.



Find the sum of 84 and 9. \_\_\_\_\_

Write each number in expanded form.

75 \_\_\_\_\_

58 \_\_\_\_\_

Count on by half hours.

4:00, \_\_\_\_\_, \_\_\_\_\_, \_\_\_\_\_, 6:00, 6:30, \_\_\_\_\_



Count back by hundreds.

950, 850, 750,  
650, 550, 450,  
350, 250

Maritza got a 98 on her math test this week. Last week, she scored 6 points less. What was Maritza's score on her math test last week?

6	?
98	

$$98 - 6 = 92$$

answer: 92 points

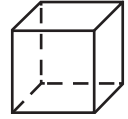
Write each number in word form.

86 eighty-six  
62 sixty-two

Add.

$$\begin{array}{r} 1 \\ 84 \\ + 7 \\ \hline 91 \end{array} \quad \begin{array}{r} 1 \\ 62 \\ + 8 \\ \hline 70 \end{array} \quad \begin{array}{r} 1 \\ 36 \\ + 9 \\ \hline 45 \end{array}$$

Which is the face of a cube?



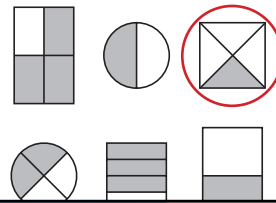
Seventy-three families came to the Driftwood School Fall Carnival. Choose two ways that show the number **seventy-three**.

- a. 70 + 3
- b. 37
- c. 73

Write the ordinal number for each word.

Ordinal Word	Ordinal Number
sixth	6th
seventh	7th
eighth	8th
ninth	9th
tenth	10th

Circle the shape with one fourth shaded.



Fill in the missing numbers.

three hundred forty-one

3 hundreds 4 tens 1 one

$$\begin{array}{r} 300 + 40 + 1 \\ \hline 341 \end{array}$$

Subtract.

$$\begin{array}{r} 7 \text{ } 10 \\ 80 \\ - 6 \\ \hline 74 \end{array}$$

$$\begin{array}{r} 4 \text{ } 10 \\ 50 \\ - 9 \\ \hline 41 \end{array}$$



# Preview

Please log in to download the printable version of this worksheet.

Jamai still needs 10%.

Fill in the missing numbers.

seven hundred ninety-two

7 hundreds 9 tens 2 ones

$$\begin{array}{r} 700 + 90 + 2 \\ \hline 792 \end{array}$$

Circle even or odd.

19  
even odd

12  
even odd

Subtract.

$$\begin{array}{r} 4 \text{ } 11 \\ 57 \\ - 4 \\ \hline 47 \end{array}$$

$$\begin{array}{r} 1 \text{ } 15 \\ 25 \\ - 8 \\ \hline 17 \end{array}$$


There are 23 students in Ms. Hill's class. There are 26 students in Mr. Johnson's class. How many students are in both classes combined?

?
23      26

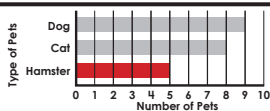
$$23 + 26 = 49$$

answer: 49 students

Shade one fourth of each shape.



Answers may vary.



How many students have dogs? 9

There are 3 fewer students who have hamsters than cats. How many students have hamsters?

5

Solve.

Add 58 and 6. 64

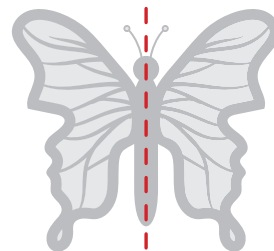
Find the sum of 84 and 9. 93

Write each number in expanded form.

75 70 + 5

58 50 + 8

Draw a line of symmetry.



Count time by half hours.

4:00, 4:30, 5:00,

5:30, 6:00, 6:30,

7:00