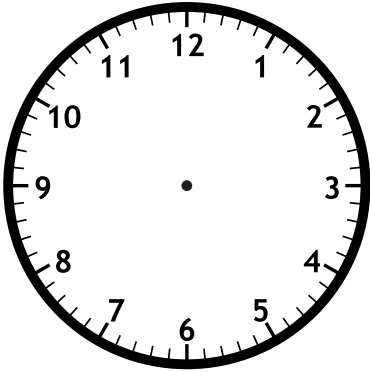




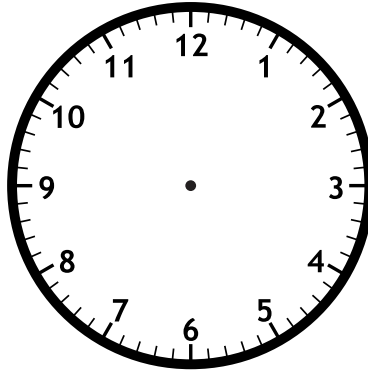
Name: _____

Math Buzz

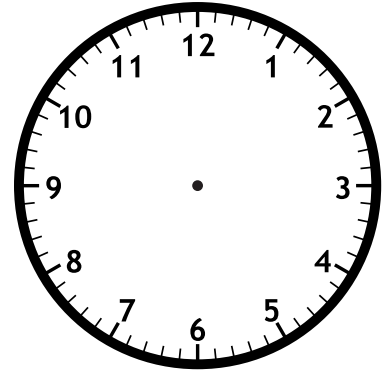
Draw hands on each clock to show the times.



5:10



3:45



9:25



Preview

Please log in to download
the printable version of this worksheet.

expanded. _____

Draw lines to divide each shape into equal parts.



halves



thirds




fourths

$$\begin{array}{r} 45 \\ + 32 \\ \hline \end{array}$$

Count on by tens.

770, _____, _____, 800, 810, _____, _____, _____

Name: _____



Math Buzz

There are 72 second graders at Eagleton Elementary School. 58 of them take the bus to school. How many second graders do not take the bus?

?	58
72	

$$\underline{\quad} - \underline{\quad} = \underline{\quad}$$

Mr. Lee has 348 pieces of candy in a jar. What is the value of the 4 in the number 348?

- a. 4 b. 40 c. 400

Fill in the thermometer to show 20°C.



Preview

Please log in to download the printable version of this worksheet.

$$\underline{\quad} + \underline{\quad} = \underline{\quad}$$

Sort the numbers.

even

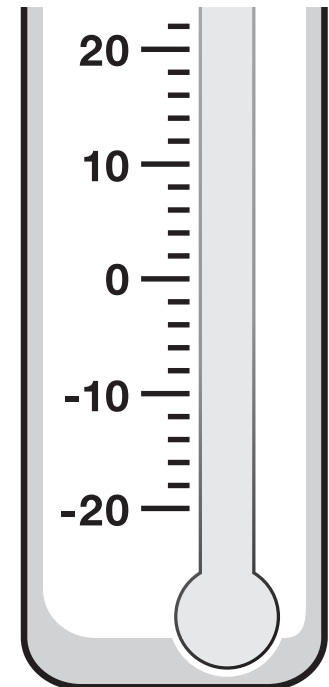
odd

17

6

9




14



Name: _____



Math Buzz

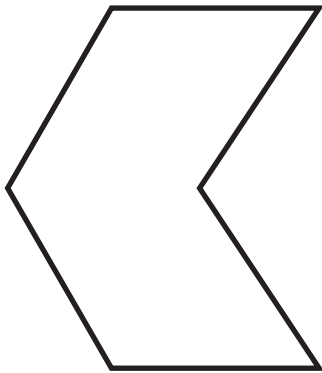
January						
Sunday	Monday	Tuesday	Wednesday	Thursday	Friday	Saturday
				1	2	3
4	5	6	7	8	9	10
11  Shopping	12	13	14	15	16	17
18	19	20  Doctor	21	22	23	24  Ski Lesson
25	26	27	28	29	30	31



Preview

Please log in to download the printable version of this worksheet.

for the shape.



_____ sides

_____ corners

$$\begin{array}{r} 87 \\ - 49 \\ \hline \end{array}$$

$32 + 36 = \underline{\hspace{2cm}}$

$37 + 24 = \underline{\hspace{2cm}}$


Write the number in standard form and expanded form.

six hundred forty-seven

standard: _____

expanded: _____

Name: _____



Math Buzz

Solve.

What is 10 more than 436? _____

What is 10 less than 848? _____

Compare. Write $>$, $<$, $=$.

362


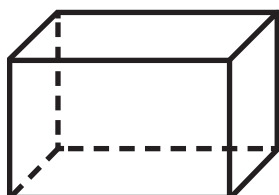
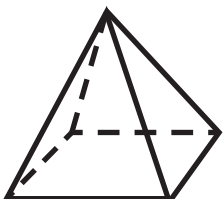
263

Circle the coins to make \$1.00. Cross off the coins you do not need.



Preview

Please log in to download the printable version of this worksheet.



Solve.

$$\begin{array}{r} 9 \\ 4 \\ + 1 \\ \hline \end{array}$$

$$\begin{array}{r} 8 \\ 9 \\ 2 \\ + 3 \\ \hline \end{array}$$

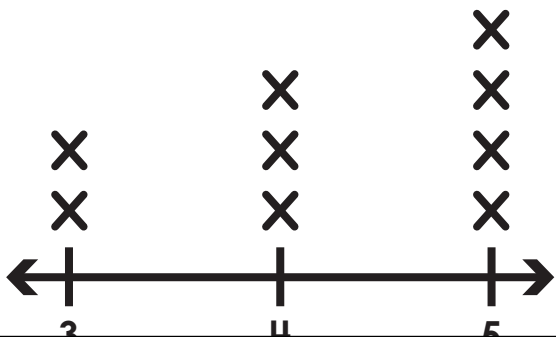
Name: _____



Math Buzz

The line plot below shows the height, in feet, of everyone in the Miller family.

key: X = 1 person



Solve.

Add 42 and 47. _____

Find the sum of 19 and 26. _____

Subtract.

92

74

33



How many people are in the Miller family?

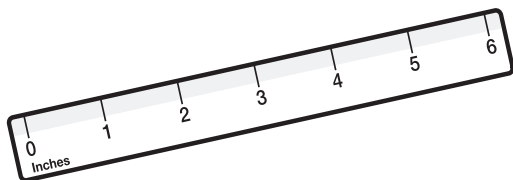
Preview

Please log in to download the printable version of this worksheet.

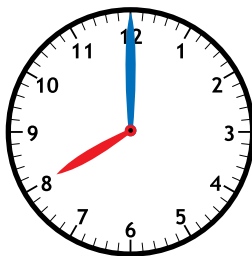
word: _____

standard: _____

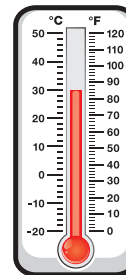
Which tool should Paige use to measure the temperature outside?



inch ruler



clock



thermometer



Draw hands on each clock to show the times.



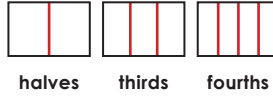
Write the number in word form and expanded form.

572

word: **five hundred seventy-two**

expanded: **500 + 70 + 2**

Draw lines to divide each shape into equal parts.



Add.

$$\begin{array}{r} 68 \\ + 13 \\ \hline 81 \end{array}$$

$$\begin{array}{r} 45 \\ + 32 \\ \hline 77 \end{array}$$

Count on by tens.

770, **780**, **790**, 800,

810, **820**, **830**, **840**

There are 72 second graders at Eagleton Elementary School. 58 of them take the bus to school. How many second graders do not take the bus?

?	58
72	

$$72 - 58 = 14$$

Mr. Lee has 348 pieces of candy in a jar. What is the value of the 4 in the number 348?

a. 4 **b. 40** c. 400

Write a related subtraction fact using the numbers below.

$$21 - 6 = 15$$

$$15 + 6 = 21$$


or

$$6 + 15 = 21$$

Sort the numbers.

even	odd
14 6	17 9

Fill in the thermometer to show 20°C.



Preview

Please log in to download the printable version of this worksheet.

Solve.

What is 10 more than 436?
446

What is 10 less than 848?
838

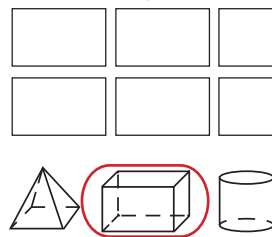
Compare. Write >, <, =.

362 > 263

Circle the coins to make \$1.00. Cross off the coins you do not need.



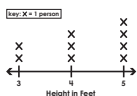
Which solid shape has these flat shapes as faces?



Solve.

$$\begin{array}{r} 9 \\ 4 \\ + 1 \\ \hline 14 \end{array}$$

$$\begin{array}{r} 8 \\ 9 \\ 2 \\ + 3 \\ \hline 22 \end{array}$$



How many people are taller than 4 feet?
4

How many people are in the Miller family?
9

Solve.

Add 42 and 47. **89**

Find the sum of 19 and 26. **45**

Subtract.

$$\begin{array}{r} 8 \ 12 \\ 92 \\ - 59 \\ \hline 33 \end{array}$$

$$\begin{array}{r} 6 \ 14 \\ 74 \\ - 48 \\ \hline 26 \end{array}$$

$$\begin{array}{r} 2 \ 13 \\ 33 \\ - 27 \\ \hline 6 \end{array}$$

Write the number in word form and standard form.

$$800 + 50 + 1$$

word: **eight hundred fifty-one**

standard: **851**

Which tool should Paige use to measure the temperature outside?



inch ruler



clock



thermometer