


Name: _____



Math Buzz

The Brentwood Auditorium seats 943 people. Last night, 636 people came to see a concert. How many more people could have been seated?

Show your work

Write the number in expanded and word form.

863

expanded: _____

word: _____

answer: _____ people

Color one-fourth of the circle.




















Fill in the missing numbers




Preview

Please log in to download the printable version of this worksheet.

Room 14's Favorite Subjects

Math	     
Science	   
Reading	    
Writing	 

Each  = 2 votes


How many students chose math as their favorite subject?

answer: _____

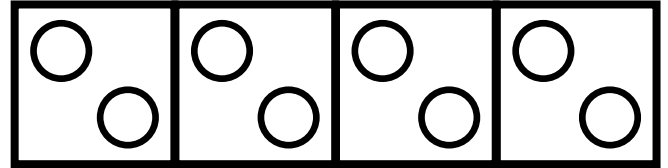
How many students chose writing as their favorite subject?

answer: _____

Name: _____



Math Buzz



$$2 + 2 + 2 + 2 = \underline{\hspace{2cm}}$$

$$4 \text{ groups of } 2 = \underline{\hspace{2cm}}$$



Preview

Please log in to download
the printable version of this worksheet.

Does he have enough to buy it?

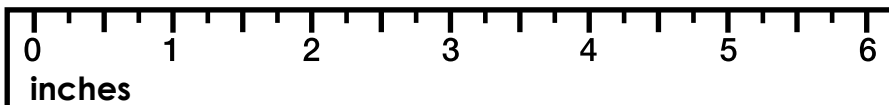
yes

no

expanded: _____

word: _____

How long is the feather?



The feather is _____ inches long.

Draw a shape that has
4 equal sides.

Name: _____




Math Buzz

There are 572 students enrolled in Bonner Elementary School, and 394 students enrolled in Bonner Middle School. How many students are enrolled in both schools combined?

Show your work

Elementary School
572 students



Middle School
394 students



answer: _____ students



Preview


Please log in to download the printable version of this worksheet.

Circle the digits in the ones place.

3 5 4

7 8

5 9 3




Add. Show your work

$$\begin{array}{r} 550 \\ + 271 \\ \hline \end{array}$$

Find the sum of 233 and 757. _____

$$707 + 147 = \underline{\hspace{2cm}}$$

Name: _____



Math Buzz

Circle the digits in the tens place.

54

673

834

There were 618 tickets sold at the Glen Park Movie Theater on Saturday. On Sunday, 384 tickets were sold. How many more tickets were sold on Saturday than Sunday?

Show your work

Subtract. Show your work

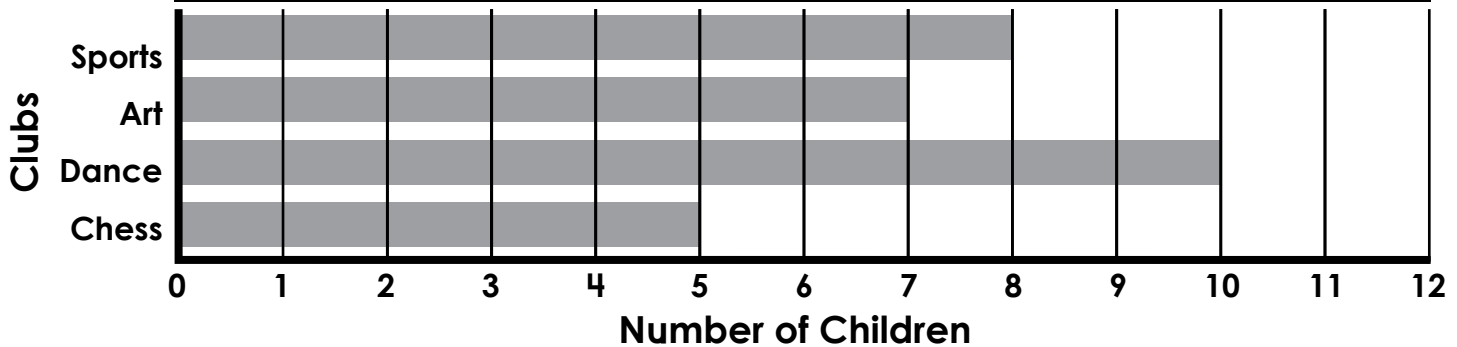
Find the difference between 865 and 307.

$578 - 286 =$ _____

What fraction of the

Preview
Please log in to download the printable version of this worksheet.

THIRD GRADE AFTER SCHOOL CLUBS



How many children are in Dance Club? answer: _____

Which club has the least amount of children? answer: _____

Name: _____



Math Buzz

Mikayla and Jorge grew bean plants for a science experiment. Mikayla's plant was 281 millimeters tall. Jorge's plant was 187 millimeters tall. How much taller was Mikayla's plant than Jorge's?

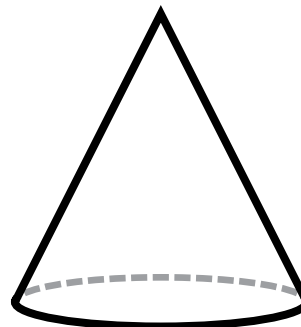
281mm



187mm



Choose the name of the shape.



sphere

cylinder

cone




Preview

Please log in to download the printable version of this worksheet.

answer: _____ millimeters

tea cup

bathtub



$$3 + 3 + 3 + 3 + 3 = \underline{\hspace{2cm}}$$

$$5 \text{ groups of } 3 = \underline{\hspace{2cm}}$$

$$5 \times 3 = \underline{\hspace{2cm}}$$

Circle the digits in the hundreds place.

4 3 1

5 4 6

7 4 8



The Brentwood Auditorium seats 943 people. Last night, 636 people came to see a concert. How many more people could have been seated?

Show your work

$$943 - 636 = 307$$

answer: **307** people

Write the number in expanded and word form.

863

expanded: 800 + 60 + 3

word: eight hundred sixty-three

Fill in the missing numbers.

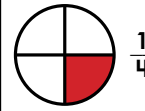
662	
103	559

$$(103 + 559 = 662)$$

288	558
846	

$$(846 - 288 = 558)$$

Color one-fourth of the circle.



Color one-third of the rectangle.



Student Favorite Subjects	
Math	10
Science	12
Reading	8
Writing	4

Each = 2 votes

How many students chose math as their favorite subject?

answer: **12**

How many students chose writing as their favorite subject?

answer: **4**



Marco wants to buy a book that costs \$4.29 from the school store. How much money does Marco have?

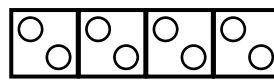
\$3.91

Write the number in expanded and word form.

358

expanded: 300 + 50 + 8

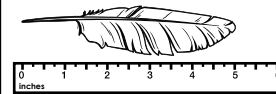
word: three hundred fifty-eight



$$2 + 2 + 2 + 2 = \underline{8}$$

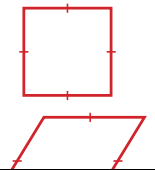
$$4 \text{ groups of } 2 = \underline{8}$$

How long is the feather?



The feather is 5 inches long.

Draw a shape that has 4 equal sides.



Preview

Please log in to download the printable version of this worksheet.

Circle the digits in the tens place.

54

6**7**3

8**3**4

There were 618 tickets sold at the Glen Park Movie Theater on Saturday. On Sunday, 384 tickets were sold. How many more tickets were sold on Saturday than Sunday?

Show your work

$$618 - 384 = 234$$

answer: **234** tickets

Subtract. Show your work

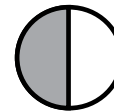
Find the difference between **865 and 307.**

558

$$578 - 286 = \underline{292}$$

$$\begin{array}{r} 14 \\ 6 \ 9 \ 12 \\ 752 \\ - 294 \\ \hline 458 \end{array}$$

What fraction of the circle is shaded?



1/2 1/3 1/4

THIRD GRADE AFTER SCHOOL CLUBS											
Sports	1	2	3	4	5	6	7	8	9	10	11
Art	1	2	3	4	5	6	7	8	9	10	11
Dance	1	2	3	4	5	6	7	8	9	10	11
Chess	1	2	3	4	5	6	7	8	9	10	11

How many children are in Dance Club?

answer: **10**

Which club has the least amount of children?

answer: **chess**

Mikayla and Jorge grew bean plants for a science experiment. Mikayla's plant was 281 millimeters tall. Jorge's plant was 187 millimeters tall. How much taller was Mikayla's plant than Jorge's?

$$281 - 187 = 94$$

answer: **94** millimeters

Choose the name of the shape.



sphere cylinder **cone**

Which holds **less** liquid? Circle your answer.



tea cup

bathtub



$$3 + 3 + 3 + 3 + 3 = \underline{15}$$

$$5 \text{ groups of } 3 = \underline{15}$$

$$5 \times 3 = \underline{15}$$

Circle the digits in the hundreds place.

431

546

748