



Name: _____

Math Buzz

Fill in the missing multiples of 2.

2, _____, 6, _____, 10,

_____, 14, _____, 18, _____

Choose the best unit of measure.

length of a classroom

millimeters centimeters

meters kilometers

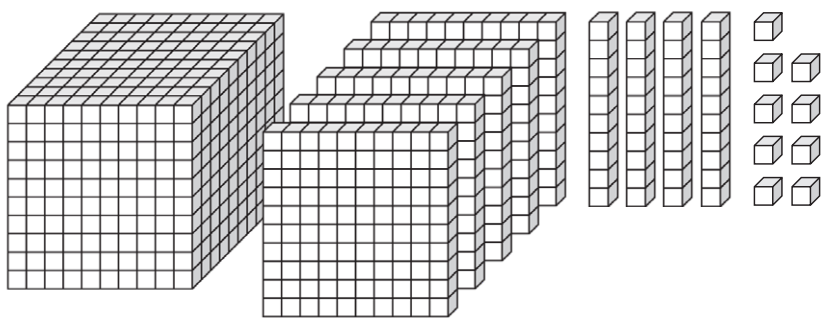
State	Land Area (square miles)
Connecticut	4,842

Dylan made a list of each state, along with its land area, that he visited with his family this summer. What is the combined land area of Connecticut and Rhode Island?



Preview

Please log in to download the printable version of this worksheet.



What number is shown?


Thousands	Hundreds	Tens	Ones



How much money is shown?

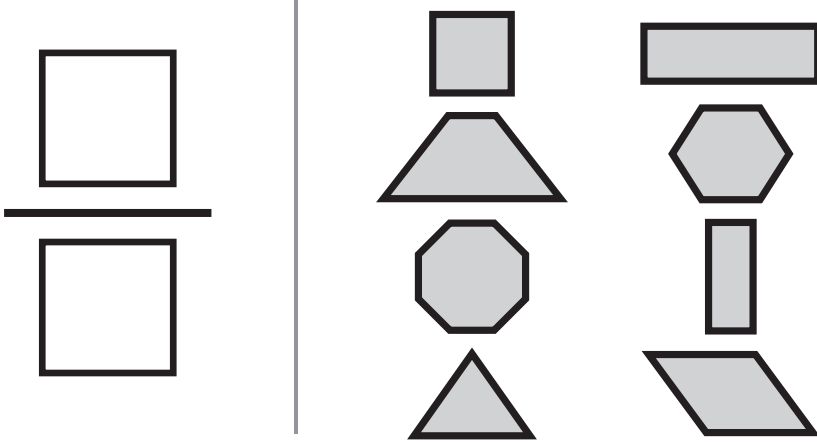
answer: _____

Name: _____



Math Buzz

What fraction of the shapes have four sides?



Complete the table.

Input	Output
372	
835	
2,581	3,270
5,718	
Rule: Add 689	



$$3 \times 7 = \underline{\quad}$$

Preview

Please log in to download the printable version of this worksheet.

Hannah bought a gallon of cider and a dozen donuts. She paid with a \$20 bill. What was Hannah's change?

Show your work

answer: _____

Smith's Orchard & Cider Mill

Basket of Apples.....	\$5
Gallon of Cider.....	\$6
Apple Pie.....	\$12
Dozen Donuts.....	\$8
Carmel Apple.....	\$2



Name: _____

Math Buzz

November

Sunday	Monday	Tuesday	Wednesday	Thursday	Friday	Saturday
				1	2	3
4	5	6	7	8	9	10
11	12	13	14	15	16	17
18	19	20	21	22	23	24
25	26	27	28	29	30	

Oliver's birthday is two weeks after Natasha's birthday. If Oliver's birthday is November 16th, what date is Natasha's birthday?



Read-a-Thon was 7,560 minutes. At the end of the first week the class read a total of 4,095 minutes. How many more minutes does Mr. Luka's class need to read to reach their goal?

Show your work

answer: _____ minutes

Preview


Please log in to download the printable version of this worksheet.

Fill in the missing multiples of 5.

5, _____, 15, _____, 25,

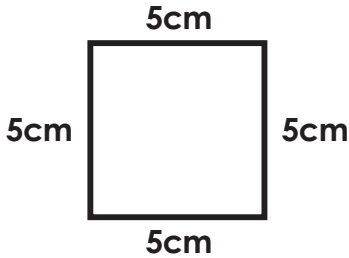
_____, 35, _____, 45, _____

Name: _____



Math Buzz

Find the perimeter of the shape.



$$5 + 5 + 5 + 5 = \underline{\hspace{2cm}}$$

perimeter = _____ cm

Write the numbers in expanded form.

780

2,436

Use the array to find the product.

Find the difference.



Preview

Please log in to download
the printable version of this worksheet.



$$4 \times 9 = \underline{\hspace{2cm}}$$

$$\begin{array}{r} \\ \\ \underline{- 738} \end{array}$$

Mrs. Walsh needs 2 eggs for each pumpkin pie she makes. If she makes 6 pumpkin pies, how many total eggs will Mrs. Walsh need?

?

2	2	2	2	2	2
---	---	---	---	---	---

$$\underline{\hspace{1cm}} \times \underline{\hspace{1cm}} = \underline{\hspace{1cm}}$$

answer: _____ eggs

Name: _____



Math Buzz

Zoey spent 60 minutes completing her homework. She spent 15 minutes on math, 18 minutes on spelling, and the rest of the time reading. How much time did Zoey spend reading independently?

Show your work

answer: _____ minutes

Compare. Write the words "is greater than", "is less than", or "is equal to."

616 _____ 662

468 _____ 4,036

8,940 _____ 8,194

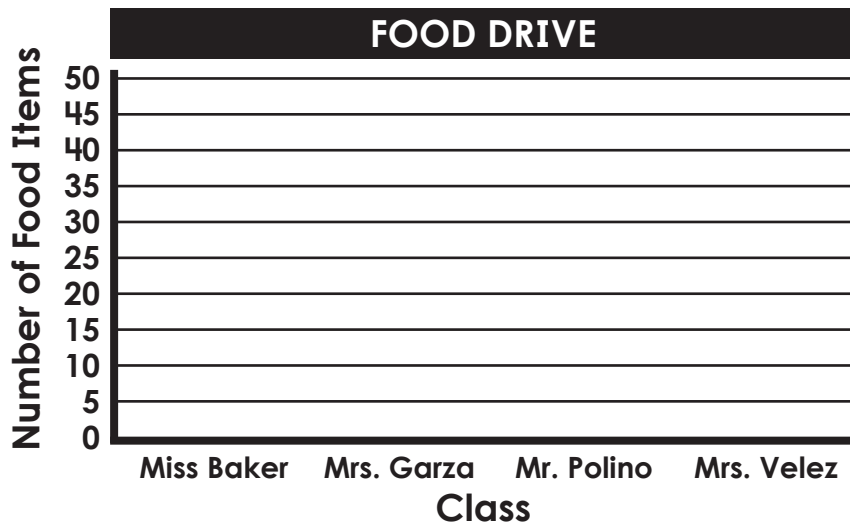


Preview

Please log in to download the printable version of this worksheet.

The chart shows the number of food items the third grade classes collected during the food drive. Use the data to complete the bar graph.

Classes	Number of Items
Miss Baker	20
Mrs. Garza	35
Mr. Polino	25
Mrs. Velez	30





Fill in the missing multiples of 2.

2, 4, 6, 8, 10,

12, 14, 16, 18, 20

Choose the best unit of measure.

length of a classroom

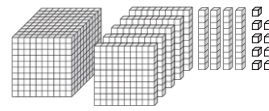
millimeters centimeters
meters kilometers

Dylan made a list of each state, along with its land area, that he visited with his family this summer. What is the combined land area of Connecticut and Rhode Island?

$$4,842 + 1,034 = 5,876$$

answer: **5,876** square miles

Count the blocks.



What number is shown?

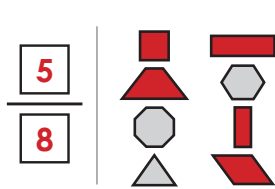
Thousands	Hundreds	Tens	Ones
1	5	4	9



How much money is shown?

answer: **\$27.54**

What fraction of the shapes have four sides?



Complete the table.

Input	Output
372	1,061
835	1,524
2,581	3,270
5,718	6,407

Rule: Add 689

Use the array to find the product.



$$3 \times 7 = \underline{21}$$

Write the numbers in standard form.

four thousand, three hundred seventy-eight

4,378

$$6,000 + 800 + 90 + 3$$

6,893

Hannah bought a gallon of cider and a dozen donuts. She paid with a \$20 bill. What was Hannah's change?

Show your work

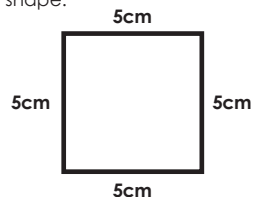
Smith's Orchard & Cider Mill	
Basket of Apples	\$5
Gallon of Cider	\$6
Apple Pie	\$12
Dozen Donuts	\$8
Caramel Apple	\$2

$$\begin{aligned} \$6 + \$8 &= \$14 \\ \$20 - \$14 &= \$6 \end{aligned}$$

Preview

Please log in to download the printable version of this worksheet.

Find the perimeter of the shape.




$$5 + 5 + 5 + 5 = 20$$

perimeter = **20** cm

Write the numbers in expanded form.

$$\begin{aligned} &780 \\ &\underline{700 + 80} \\ &2,436 \\ &\underline{2,000 + 400 + 30 + 6} \end{aligned}$$

Use the array to find the product.



$$4 \times 9 = \underline{36}$$

Find the difference.

$$\begin{aligned} &9 \quad 9 \\ &4,1010 \quad 8,1010 \\ &\underline{500} \quad \underline{900} \\ &- 279 \quad - 738 \\ &221 \quad 162 \end{aligned}$$

Mrs. Walsh needs 2 eggs for each pumpkin pie she makes. If she makes 6 pumpkin pies, how many total eggs will Mrs. Walsh need?

2	2	2	2	2	2
---	---	---	---	---	---

$$2 \times 6 = 12$$

answer: **12** eggs

Zoey spent 60 minutes completing her homework. She spent 15 minutes on math, 18 minutes on spelling, and the rest of the time reading. How much time did Zoey spend reading independently?

Show your work $15 + 18 = 33$
 $60 - 33 = 27$

answer: **27** minutes

Compare. Write the words "is greater than", "is less than", or "is equal to."

616 is less than 662

468 is less than 4,036

8,940 is greater than 8,194

Fill in the missing multiples of 10.

10, 20, 30, 40, 50,

60, 70, 80, 90, 100

Circle the shape that has two pairs of parallel lines.



The chart shows the number of food items the third grade classes collected during the food drive. Use the data to complete the bar graph.

