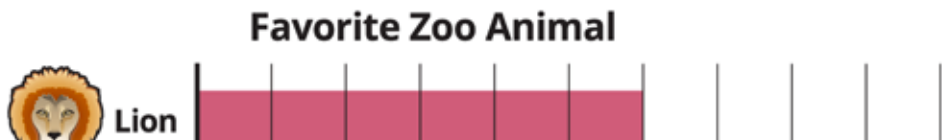


Name: _____

Daily Word Problem

Miss Fran's class went to the zoo. They made a bar graph to show their favorite zoo animal.




Preview

Please log in to download the printable version of this worksheet.

How many kids like the bear?

How many kids like the lion?

How many kids like the giraffe?



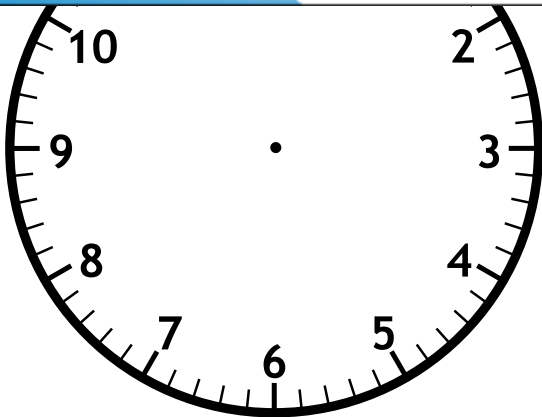
Name: _____

Daily Word Problem

Marco has reading class at 9:30.

Reading class is 30 minutes long.

What time does Marco's reading class end?



answer: _____



Name: _____

Daily Word Problem

Miss Katie's class has 24 students.


Mr. Ray's class has 20 students.

How many students are in both



Preview

Please log in to download
the printable version of this worksheet.



answer: _____

Name: _____

Daily Word Problem

Lee, May, and Jon each draw a line.
 Lee's line is the longest. May's line
 is shorter than Lee's line. Jon's line is
 shorter than May's line.



May	
Jon	



Name: _____

Daily Word Problem

Mia picks 30 apples.

She uses 8 apples to make a pie.


Then she uses 5 apples for a snack.



Preview

Please log in to download
the printable version of this worksheet.

answer: _____



Daily Word Problem

Preview

Please log in to download
the printable version of this worksheet.

