

Name: \_\_\_\_\_

**B-1**

Basic Addition  
& Subtraction

**Multi-  
Step**

## Daily Word Problem

Nira bought 15 balloons.

She gave away 5.

1 balloon popped.

How many balloons does Nira have left?

Show your work.




answer: \_\_\_\_\_

Name: \_\_\_\_\_

**Daily Word Problem**

Nick has 9 red apples, 3 green apples, and 4 yellow apples. How many more red apples than yellow apples does he have?

Show your work.



answer: \_\_\_\_\_

Name: \_\_\_\_\_

**B-3**

Repeated Addition;  
Basic Multiplication

**Multi-  
Step**

## Daily Word Problem

Miss Kelly baked a dozen blueberry muffins.

She also made 6 cinnamon muffins.

Her dad ate 2 muffins.

How many muffins does Miss Kelly have?

*Show your work.*



answer: \_\_\_\_\_

Name: \_\_\_\_\_

**B-4**

Basic Addition  
& Subtraction

Single-  
Step


## Daily Word Problem

There are 15 birds in an apple tree.

A squirrel chases 8 away.

How many birds are left in the tree?

Show your work.



answer: \_\_\_\_\_

Name: \_\_\_\_\_

**B-5**

Repeated Addition;  
Basic Multiplication

**Multi-  
Step**


## Daily Word Problem

There are 4 vases with flowers.

Each vase has 3 red flowers and 2 yellow flowers.

How many flowers are there in all?

*Show your work.*



answer: \_\_\_\_\_

## Daily Word Problem

Nira bought 15 balloons.  
She gave away 5.  
1 balloon popped.  
How many balloons does Nira have left?

Show your work.

$$15 - 5 = 10$$

$$10 - 1 = 9$$

answer: 9 balloons



Nick has 9 red apples, 3 green apples, and 4 yellow apples. How many more red apples than yellow apples does he have?

Show your work.

$$9 - 4 = 5$$

answer: 5 red apples




Miss Kelly baked a dozen blueberry muffins.  
She also made 6 cinnamon muffins.  
Her dad ate 2 muffins.  
How many muffins does Miss Kelly have?

Show your work.

$$12 + 6 = 18$$

$$18 - 2 = 16$$

answer: 16 muffins




There are 15 birds in an apple tree.  
A squirrel chases 8 away.  
How many birds are left in the tree?

Show your work.

$$15 - 8 = 7$$

answer: 7 birds



There are 4 vases with flowers.  
Each vase has 3 red flowers and 2 white flowers.  
How many flowers are there in all?

Show your work.

$$3 + 2 = 5$$

$$5 \times 4 = 20$$

answer: 20 vases

