

Name: _____

Daily Word Problem

There are 4 plates on a table.

Each plate has 3 cookies on it.

There is also a bowl with 6 more cookies.


How many cookies are there in all?

Show your work.



Preview

Please log in to download
the printable version of this worksheet.



answer: _____

Name: _____

B-12

Addition with
3 Addends

**Single-
Step**

Daily Word Problem

Mr. Pastel is an art teacher.

The boys in his class made 11 paintings.

The girls made 7 paintings.

Mr. Pastel made 1 painting.

How many paintings did they make in all?



Preview

Please log in to download
the printable version of this worksheet.

answer: _____



Name: _____

Daily Word Problem

Emily and Sam are making a craft with pom-poms. Emily has 5 green pom-poms and 6 blue ones. Sam has 9 red pom-poms and 8 blue ones. Who has fewer pom-poms?

Show your work.


Preview

Please log in to download
the printable version of this worksheet.

How many pom-poms
does Emily have? _____

How many pom-poms
does Sam have? _____

Who has fewer
pom-poms? _____



Name: _____

Daily Word Problem

Lincoln has a box of Lego blocks. The table below show how many of each color Lego are in his box.

Lincoln's Legos	
red	8
blue	9




Preview

Please log in to download
the printable version of this worksheet.

than red?

Show your work.

answer: _____



Name: _____

B-15

Basic Addition
& Subtraction

**Multi-
Step**

Daily Word Problem

There are 6 elephants outside at the zoo.

3 went inside the elephant house.

4 more elephants came out.


How many elephants are outside now?

Show your work.



Preview

Please log in to download
the printable version of this worksheet.



answer: _____

Daily Word Problem

There are 4 plates on a table.
Each plate has 3 cookies on it.
There is also a bowl with 6 more cookies.
How many cookies are there in all?

Show your work.


$3 + 3 + 3 + 3 = 12$
 $12 + 6 = 18$



Mr. Pastel is an art teacher.
The boys in his class made 11 paintings.
The girls made 7 paintings.
Mr. Pastel made 1 painting.
How many paintings did they make in all?

Show your work.

$11 + 7 + 1 = 19$



Emily and Sam are making a craft with pom-poms.
Emily has 5 green pom-poms and 6 blue ones.
Sam has 9 red pom-poms and 8 blue ones.
Who has fewer pom-poms?

Show your work.

Emily: $5 + 6 = 11$
Sam: $9 + 8 = 17$

How many pom-poms does Emily have? 11

How many pom-poms does Sam have? 17



Preview


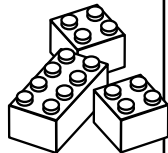
Please log in to download the printable version of this worksheet.

How many more gray Legos does Lincoln have than red?

Show your work.

$14 - 8 = 6$

answer: **6 more gray Legos**



answer: **7 elephants**