

Name: \_\_\_\_\_

**B-21**

Add & Subtract; Read  
& Interpret Data on Table

**Multi-  
Step**

## Daily Word Problem

There are 10 cars in a parking lot.

The table below shows how many of each color car is in the lot.

Cars in the Parking Lot	
white	2




# Preview

Please log in to download  
the printable version of this worksheet.

Show your work.

answer: \_\_\_\_\_



Name: \_\_\_\_\_

**B-22**

Skip Counting;  
Counting On

**Single-  
Step**

## Daily Word Problem


Count by 5s, starting with 15.  
What will the 5th number be?

Show your work.



# Preview

Please log in to download  
the printable version of this worksheet.



answer: \_\_\_\_\_

Name: \_\_\_\_\_

**B-23**

Repeated  
Addition

Multi-  
Step

## Daily Word Problem

There are 9 pairs of shoes on the shelf.

There is also a left shoe on the floor.

How many shoes are there in all?


Show your work.



# Preview

Please log in to download  
the printable version of this worksheet.

answer: \_\_\_\_\_



Name: \_\_\_\_\_

**B-24**

Addition & Subtraction;  
Extra Information

**Single-  
Step**

## Daily Word Problem

Miss Wilder has a dozen pencils, 6 notebooks, and 24 pens. One of her students borrows 4 pencils. How many pencils does Miss Wilder have left?

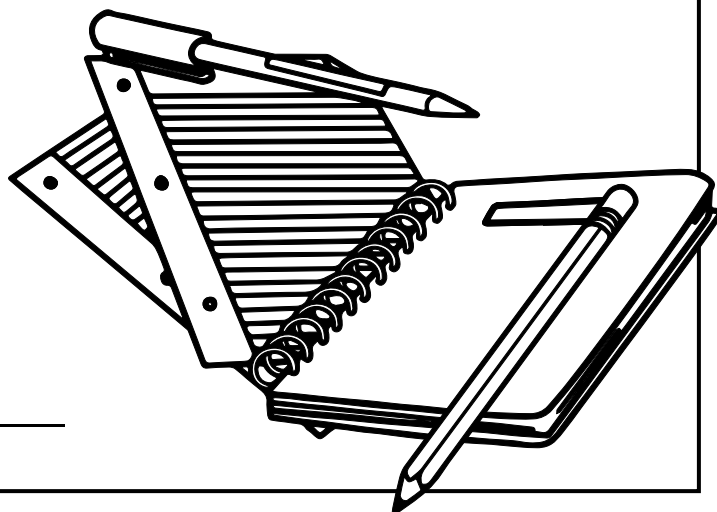
Show your work.



# Preview

Please log in to download  
the printable version of this worksheet.

answer: \_\_\_\_\_



Name: \_\_\_\_\_

**B-25**

Repeated  
Addition

Multi-  
Step

## Daily Word Problem

There are 4 basketball teams at the park. 3 of the teams have 5 players. One team has 6 players. How many basketball players are there altogether?

Show your work.



# Preview

Please log in to download  
the printable version of this worksheet.



answer: \_\_\_\_\_

## Daily Word Problem

There are 10 cars in a parking lot.  
The table below shows how many of each color car is in the lot.

Cars in the Parking Lot	
white	2
blue	5
black	?

How many black cars are in the parking lot?

Show your work.

$$2 + 5 = 7$$

$$10 - 7 = 3$$



Count by 5s, starting with 15.  
What will the 5th number be?

Show your work.

15, 20, 25, 30, **35**



There are 9 pairs of shoes on the shelf.  
There is also a left shoe on the floor.  
How many shoes are there in all?

Show your work.

$$2 + 2 + 2 + 2 + 2 + 2 + 2 + 2 + 2 = 18$$

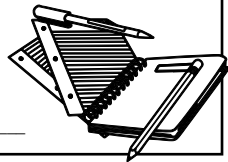
$$18 + 1 = 19$$



# Preview

Please log in to download  
the printable version of this worksheet.

answer: **8 pencils**



answer: **21 basketball players**

