

Name: _____

B-6

Basic Addition
with 3 Addends

Single-
Step

Daily Word Problem

Jamie has 3 pencils in his backpack,
4 pencils in his desk, and 6 pencils on the table.
How many pencils does he have altogether?

Show your work.



Preview

Please log in to download
the printable version of this worksheet.



answer: _____

Name: _____

Daily Word Problem

Fluffy and Spot are dogs.

Fluffy has 10 stuffed toys and 3 rubber toys.

Spot has 3 stuffed toys and 8 rubber toys.

Which dog has more toys?

Show your work.




Preview

Please log in to download
the printable version of this worksheet.

How many toys does
Fluffy have? _____

How many toys does
Spot have? _____

Which dog has
more toys? _____



Name: _____

B-8

Repeated Addition;
Basic Multiplication

**Single-
Step**

Daily Word Problem

Dominic loves horses.

He saw 6 horses in a stable.


How many legs do the 6 horses have altogether?

Show your work.



Preview

Please log in to download
the printable version of this worksheet.



answer: _____

Name: _____

B-9

Basic Addition
& Subtraction

**Multi-
Step**

Daily Word Problem

Leah has a box with 12 coins in it.

She took out 8 coins.

Her mom put 3 more coins in the box.

How many coins are the box now?


Show your work.



Preview

Please log in to download
the printable version of this worksheet.

answer: _____



Name: _____

B-10

Basic Addition & Subtraction;
Extra Information

**Single-
Step**

Daily Word Problem

Félix was cutting paper.

He cut out 9 moons.

After that, he cut out 13 stars.


Then he cut out 2 rocket ships.

After that, he cut out 1 sun.



Preview

Please log in to download
the printable version of this worksheet.



answer: _____

Daily Word Problem

Jamie has 3 pencils in his backpack,
4 pencils in his desk, and 6 pencils on the table.
How many pencils does he have altogether?

Show your work.

$$3 + 4 + 6 = 13$$



Fluffy and Spot are dogs.
Fluffy has 10 stuffed toys and 3 rubber toys.
Spot has 3 stuffed toys and 8 rubber toys.
Which dog has more toys?


Show your work.

$$\text{Fluffy: } 10 + 3 = 13$$

$$\text{Spot: } 3 + 8 = 11$$

How many toys does
Fluffy have? 13


How many toys does
Spot have? 11



Dominic loves horses.
He saw 6 horses in a stable.
How many legs do the 6 horses have altogether?

Show your work.

$$4 + 4 + 4 + 4 + 4 + 4 = 24$$



Preview

Please log in to download
the printable version of this worksheet.

answer: 7 coins



$$13 - 9 = 4$$

answer: 4

