

Name: _____

B-76

Addition & Subtraction;
Reading a Table

**Single-
Step**

Daily Word Problem

Omar cut out 35 shapes. He glued them on a piece of paper. The table below shows how many of each shape are on the paper.

Shapes	
circles	4



Preview

Please log in to download
the printable version of this worksheet.

How many more trapezoids than circles are there on the paper?

Show your work.

answer: _____



Name: _____

B-77

Place Value: 3-Digit
Numbers

Daily Word Problem

I am thinking of a secret number.

It's the smallest number you can make with these digits.

3

1

5



Preview

Please log in to download
the printable version of this worksheet.

answer: _____



Name: _____

B-78

Add & Subtract 2-Digit
Numbers; Extra Information

**Multi-
Step**

Daily Word Problem

There are 60 toys in the sandbox.

23 are dolls. 24 are dinosaurs. 13 are robots.

How many dolls and robots are in the sandbox?


Show your work.



Preview

Please log in to download
the printable version of this worksheet.

answer: _____



Name: _____

B-79

Odd and Even
Numbers

Single-
Step

Daily Word Problem

There are 10 ping pong balls in a bag.
They are numbered from 1 to 10.
Daisy removed all of the even numbers.
How many ping pong balls are left in the bag?


Show your work.



Preview

Please log in to download
the printable version of this worksheet.

answer: _____



Name: _____

B-80

Basic Multiplication;
Repeated Addition

**Single-
Step**

Daily Word Problem

There are 2 baskets.

Each basket has 6 kittens in it.

How many kittens are there in all?


Show your work.



Preview

Please log in to download
the printable version of this worksheet.

answer: _____



Daily Word Problem

Preview

Please log in to download
the printable version of this worksheet.

