

Name: \_\_\_\_\_

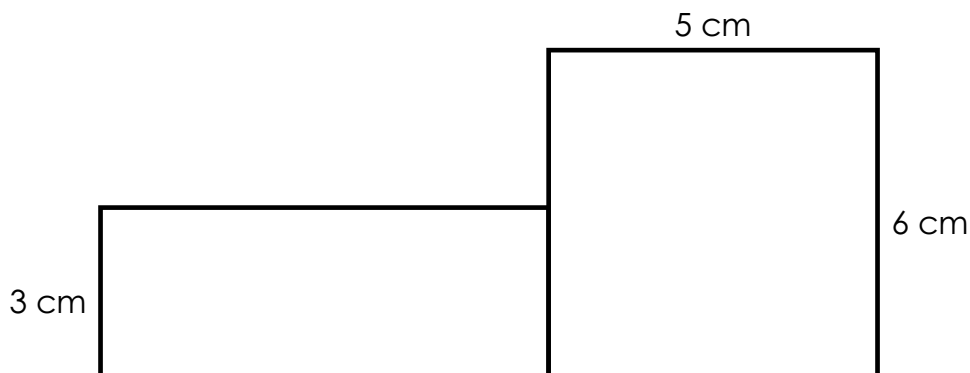
**C-116**

Area;  
Operations

**Multi-  
Step**

## Daily Word Problem

Mason made the shape below by combining two rectangles.



# Preview

Please log in to download  
the printable version of this worksheet.



answer: \_\_\_\_\_

Name: \_\_\_\_\_

## Daily Word Problem

Elena earns the same amount of money each week for doing chores around the house.


If she earns \$36 at the end of 4 weeks,  
how much money does she make in 1 week? \_\_\_\_\_

How much money will Elena make in 6 weeks? \_\_\_\_\_



# Preview

Please log in to download  
the printable version of this worksheet.




Name: \_\_\_\_\_

## Daily Word Problem

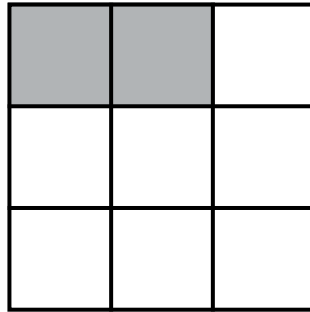
Jayden is building a new dog pen for his dog, Mr. Fluffy. He wants the dog pen to have an area of 24 square feet.

What are all of the options for the length and width of the dog pen? Draw pictures to show each of the possible dog pens below.

*Hint: What are all of the factors that make 24?  $\_\_ \times \_\_ = 24$*



Name: \_\_\_\_\_

**Daily Word Problem**Maria drew the fraction  $\frac{2}{9}$ .

# Preview

Please log in to download  
the printable version of this worksheet.

answer: \_\_\_\_\_



Name: \_\_\_\_\_

## Daily Word Problem

Mrs. Zhao has a pack of 16 crayons and a pack of 48 crayons. She separates all of the crayons into groups with 8 crayons in each.

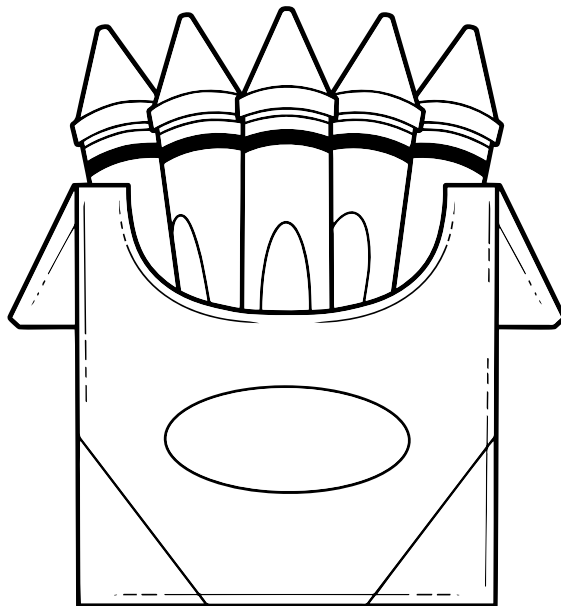
How many groups of crayons can Mrs. Zhao make?

Show your work.



# Preview

Please log in to download the printable version of this worksheet.



answer: \_\_\_\_\_

Daily Word Problem

# Preview

Please log in to download  
the printable version of this worksheet.

