

Name: \_\_\_\_\_

## Daily Word Problem

The figure below shows an outline of Emma's room and David's room. Both rooms have the same area.

Emma's Room



David's Room




# Preview

Please log in to download  
the printable version of this worksheet.

What is the perimeter of the larger room? \_\_\_\_\_

Show your work.




Name: \_\_\_\_\_

## Daily Word Problem

Marco starts watching a movie at 4:30 p.m.  
The movie is 1 hour and 28 minutes long.  
What time does the movie end?

Show your work.



answer: \_\_\_\_\_

Name: \_\_\_\_\_

**C-138**

Fractions;  
Operations

**Multi-  
Step**

## Daily Word Problem

Marcella bought a dozen donuts.


She asked for 5 chocolate, 3 glazed, and the rest of the donuts to be frosted with sprinkles.

What fraction of the donuts were frosted with sprinkles?

*Show your work.*



answer: \_\_\_\_\_



Name: \_\_\_\_\_

**Daily Word Problem**

Vincent helps his neighbors with chores to make money. The chart below shows how much money Vincent gets for doing each chore.

Chore	Amount of Money
vacuuming	\$7
dusting	\$5



# Preview

Please log in to download  
the printable version of this worksheet.

show your work

answer: \_\_\_\_\_



Name: \_\_\_\_\_

**C-140**


Area;  
Operations

**Multi-  
Step**

## Daily Word Problem

Jaxon drew the shape below.

What is the area of the whole shape?



# Preview

Please log in to download  
the printable version of this worksheet.

answer: \_\_\_\_\_



Daily Word Problem

# Preview

Please log in to download  
the printable version of this worksheet.

