

Name: _____

Daily Word Problem

The Chen family went to the movies.

They bought 2 adult tickets, 3 kid tickets, 2 buckets of popcorn, 3 boxes of candy, and 3 drinks.

Use the chart below to figure out how much total money the Chen family spent.


Item	Price
------	-------



Preview
Please log in to download
the printable version of this worksheet.

Show your work.

answer: _____




Name: _____

Daily Word Problem

Summer grows 3 types of vegetables in her garden.

Summer's Garden



Preview
Please log in to download the printable version of this worksheet.

Show your work.



answer: _____


Name: _____

Daily Word Problem

Ian bought 30 feet of fencing that he is going to use to build a rectangular pen for his pet pig.

Draw at least 3 possible rectangular pens that Ian could build. Then find the area of each.

Show your work.



Name: _____

Daily Word Problem


Camila, Ethan, and Ava are comparing the area of their paintings they made in art class. Ethan says that his painting has the largest area because it's the longest. Is he correct? Why or why not? Complete the chart to support your answer.

Name	Length (inches)	Width (inches)	Area (square inches)
Camila	8 inches	8 inches	



Preview

Please log in to download the printable version of this worksheet.



answer: _____

Name: _____

Daily Word Problem

Scarlett's flight leaves at 10:00 a.m.

She wants to get to the airport 1 hour early.

It takes her 27 minutes to drive from her house to the airport.

What time should she leave her house?

Show your work.



answer: _____

Daily Word Problem

Preview

Please log in to download
the printable version of this worksheet.

