

Name: _____

C-16

Addition &
Subtraction

**Multi-
Step**

Daily Word Problem

There are 350 paper clips in Mrs. Johnson's desk drawer.
She gives 120 paper clips to Mrs. Kendra.
She also gives 180 paper clips to Mr. Wilson.
How many paper clips does Mrs. Johnson have left?


Show your work.



Preview

Please log in to download
the printable version of this worksheet.

answer: _____



Name: _____

Daily Word Problem

Taylor bought 4 packs of football cards.

Each pack had 5 cards in it.


How many cards did he have in all?

Show your work.



Preview

Please log in to download
the printable version of this worksheet.



answer: _____

Name: _____

Daily Word Problem**MENU**

Slice of Pizza ... \$8

Hamburger ... \$12 (cheese \$2 extra)

Taco 2 for \$8

French Fries \$6

Hot Dog \$7


Popcorn \$8



Preview

Please log in to download
the printable version of this worksheet.

How much does man have to pay for lunch?

Show your work.

answer: _____

Name: _____

C-19

Addition &
Subtraction

**Multi-
Step**

Daily Word Problem

A farm has horses, pigs, and goats.
They have 78 goats and 65 pigs.
They have 145 animals in all.
How many horses are on the farm?


Show your work.



Preview

Please log in to download
the printable version of this worksheet.

answer: _____



Name: _____

Daily Word Problem

I am thinking of a secret number with 3 digits.

The digit in the tens place is the sum of 4 and 5.

The digit in the hundreds place is the difference between 7 and 2.


The digit in the ones place is less than 3 but more than 1.

What is the secret number?



Preview

Please log in to download
the printable version of this worksheet.



answer: _____

Daily Word Problem

There are 350 paper clips in Mrs. Johnson's desk drawer. She gives 120 paper clips to Mrs. Kendra. She also gives 180 paper clips to Mr. Wilson. How many paper clips does Mrs. Johnson have left?

Show your work.

$$350 - 120 = 230$$


$$230 - 180 = 50$$



Taylor bought 4 packs of football cards. Each pack had 5 cards in it. How many cards did he have in all?

Show your work.

$$4 \times 5 = 20$$



MENU

| | |
|------------------------|---------------------------------------|
| Slice of Pizza ... \$8 | Hamburger ... \$12 (cheese \$2 extra) |
| Taco 2 for \$8 | French Fries \$6 |
| Hot Dog \$7 | Popcorn \$8 |

Matt buys lunch for himself and his friends. Matt orders a cheeseburger for himself. His friend Jo orders two hot dogs. His friend Erika orders a slice of pizza. How much does Matt have to pay for lunch?

Show your work.


$$12 + 2 + 7 + 7 + 8 = 36$$



Preview

Please log in to download the printable version of this worksheet.

answer: 2 horses



$$7 - 2 = 5$$

$$3, \textcircled{2}, 1$$

$$\underline{5} \underline{9} \underline{2}$$

answer: 592

