

Name: _____

C-56

Addition & Subtraction;
Reading & Interpreting Data

**Multi-
Step**

Daily Word Problem

There are 30 highlighters in a box.

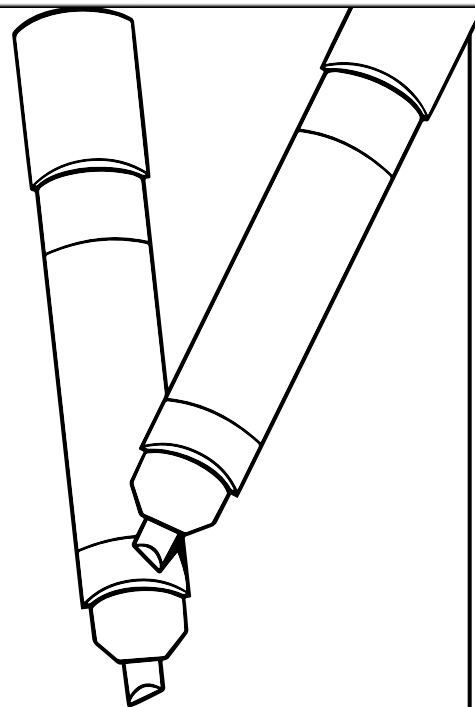
The table below shows the colors of the highlighters.

Highlighter Colors	
yellow	19
green	3



Preview

Please log in to download
the printable version of this worksheet.



answer: _____

Name: _____

C-57

Addition &
Subtraction

**Single-
Step**

Daily Word Problem


Millie and Mike are carrying a large box with 144 glass bottles in it. They accidentally drop the box and 60 bottles break. How many bottles are not broken?

Show your work.



Preview

Please log in to download
the printable version of this worksheet.



answer: _____

Name: _____

Daily Word Problem


Emily arrived to see Dr. Cote at 9:25am. She left her office at 10:00. How long was Emily at Dr. Cote's office?

Show your work.



Preview

Please log in to download
the printable version of this worksheet.



answer: _____

Name: _____

C-59

Basic Multiplication &
Division

**Single-
Step**

Daily Word Problem

Kash, Mark, and Santiago share 18 bouncy balls equally.
How many bouncy balls will each person get?

Show your work.



Preview

Please log in to download
the printable version of this worksheet.



answer: _____

Name: _____

C-60

Addition &
Subtraction

**Single-
Step**

Daily Word Problem


Elodie is 37 inches tall. Her brother Arlo is 54 inches tall. How much taller is Arlo than Elodie?

Show your work.



Preview

Please log in to download
the printable version of this worksheet.



answer: _____

Daily Word Problem

Preview

Please log in to download
the printable version of this worksheet.

