

Name: \_\_\_\_\_

**C-6**

Addition &  
Subtraction

**Multi-  
Step**

## Daily Word Problem

There are 30 cars in a parking lot.


The table below shows how many of each color car is in the lot.

Cars in the Parking Lot	
white	15
blue	9



# Preview

Please log in to download  
the printable version of this worksheet.



answer: \_\_\_\_\_

Name: \_\_\_\_\_

C-7

Addition &  
Subtraction

Single-  
Step

## Daily Word Problem

There are 127 students at Maple School.

68 are boys.


How many students are girls?

Show your work.



# Preview

Please log in to download  
the printable version of this worksheet.



answer: \_\_\_\_\_

Name: \_\_\_\_\_

**C-8**

Addition &  
Subtraction

**Multi-  
Step**

## Daily Word Problem

Vanessa, Carl, and Brook are celebrating their birthdays.

Vanessa is 27 years old.

Carl is 14 years younger than Vanessa.

Brooke is 2 years older than Carl.

How old is Brooke?


Show your work.



# Preview

Please log in to download  
the printable version of this worksheet.

answer: \_\_\_\_\_



Name: \_\_\_\_\_

C-9

Multiplication  
& Division

Single-  
Step

## Daily Word Problem

There are 6 horses in a field.

Each horse has a horseshoe on each foot.

How many horseshoes do the horses have in all?


Show your work.



# Preview

Please log in to download  
the printable version of this worksheet.

answer: \_\_\_\_\_



Name: \_\_\_\_\_

**C-10**

Addition &  
Subtraction

**Multi-  
Step**

## Daily Word Problem

There were 64 penguins at the zoo.

Then 18 baby penguins were born.

Then 14 penguins were sent away to another zoo.


How many penguins does the zoo have now?

Show your work.



# Preview

Please log in to download  
the printable version of this worksheet.



answer: \_\_\_\_\_

## Daily Word Problem

There are 30 cars in a parking lot.  
The table below shows how many of each color car is in the lot.

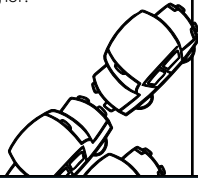
Cars in the Parking Lot	
white	15
blue	9
black	3
red	?

How many red cars are in the parking lot?

Show your work.

$$15 + 9 + 3 = 27$$

$$30 - 27 = 3$$



There are 127 students at Maple School.  
68 are boys.  
How many students are girls?

Show your work.

$$127 - 68 = 59$$



Vanessa, Carl, and Brook are celebrating their birthdays.  
Vanessa is 27 years old.  
Carl is 14 years younger than Vanessa.  
Brooke is 2 years older than Carl.  
How old is Brooke?

Show your work.

$$27 - 14 = 13$$


$$13 + 2 = 15$$



# Preview

Please log in to download  
the printable version of this worksheet.

answer: 24 horseshoes



answer: 68 penguins

