

Name: _____

Daily Word Problem

Nico keeps a reading log to track how many pages he reads each night. Figure out the pattern to complete the reading log below.

	Number of Pages Read	Time Spent Reading
Monday	9 pages	36 minutes
Tuesday	8 pages	32 minutes
Wednesday	7 pages	



Preview

Please log in to download the printable version of this worksheet.

What day did Nico read 4 pages? _____

How many more minutes did Nico read on Monday compared to Wednesday? _____



Name: _____

Daily Word Problem

A pet store has 7 fish tanks of the same size.

A worker puts 9 liters of water in each fish tank.

What is the total number of liters of water the worker puts in all of the fish tanks?


Show your work.



Preview

Please log in to download the printable version of this worksheet.

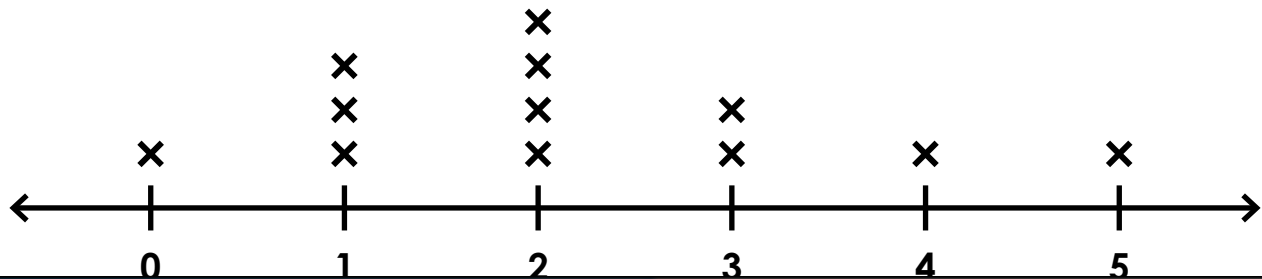
answer: _____



Name: _____

Daily Word Problem


The line plot below shows the number of pets that students in Mrs. Garcia's class own.



Preview

Please log in to download
the printable version of this worksheet.

answer: _____



Name: _____

Daily Word Problem

Hugo has 36 pieces of candy. He splits the candy evenly between himself and 5 of his friends.

James has 24 pieces of candy. He also splits the candy evenly between himself and the same 5 friends.

How many pieces of candy will each person get?


Show your work.



Preview

Please log in to download the printable version of this worksheet.

answer: _____



Name: _____


Daily Word Problem

A group of 8 students is waiting for the bus. 6 of them are wearing sneakers. 2 of them are wearing boots.

Draw a picture to show the fraction of students wearing sneakers and the fraction of students wearing boots.



Which fraction is larger? _____



Daily Word Problem

Preview

Please log in to download
the printable version of this worksheet.

